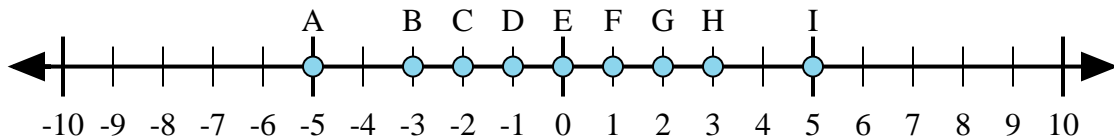




Determine which letter in the numberline best represents the answer to each problem.

Answers



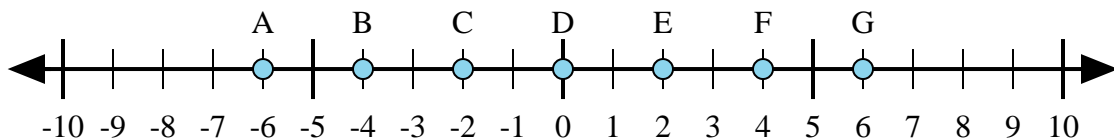
1) $2 + 3 =$

2) $2 + (-3) =$

3) $3 + (-2) =$

4) $(-2) + 3 =$

5) $(-3) + 2 =$



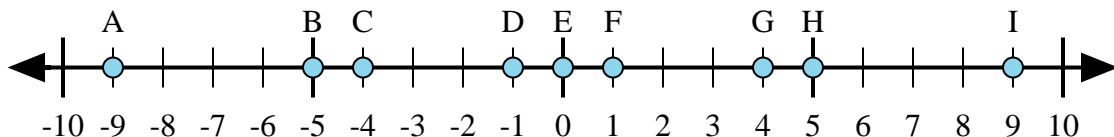
6) $4 + (-2) =$

7) $2 + 4 =$

8) $(-2) + 4 =$

9) $(-4) + 2 =$

10) $(-2) + (-4) =$



11) $5 + (-4) =$

12) $4 + (-5) =$

13) $4 + 5 =$

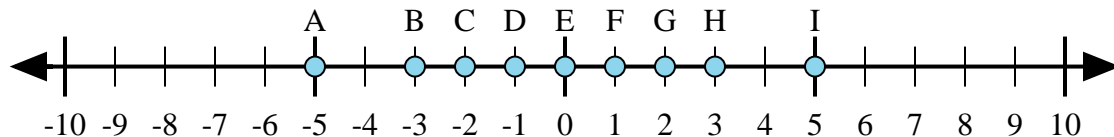
14) $(-5) + 4 =$

15) $(-4) + 5 =$

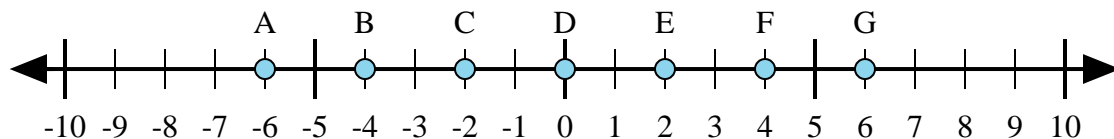
1. _____
2. _____
3. _____
4. _____
5. _____
6. _____
7. _____
8. _____
9. _____
10. _____
11. _____
12. _____
13. _____
14. _____
15. _____



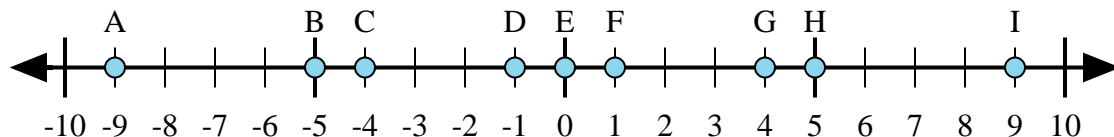
Determine which letter in the numberline best represents the answer to each problem.



- 1) $2 + 3 =$
- 2) $2 + (-3) =$
- 3) $3 + (-2) =$
- 4) $(-2) + 3 =$
- 5) $(-3) + 2 =$



- 6) $4 + (-2) =$
- 7) $2 + 4 =$
- 8) $(-2) + 4 =$
- 9) $(-4) + 2 =$
- 10) $(-2) + (-4) =$



- 11) $5 + (-4) =$
- 12) $4 + (-5) =$
- 13) $4 + 5 =$
- 14) $(-5) + 4 =$
- 15) $(-4) + 5 =$

Answers

1. I
2. D
3. F
4. F
5. D
6. E
7. G
8. E
9. C
10. A
11. F
12. D
13. I
14. D
15. F