




Solve each problem.


Answers

- 1) Which letter best shows -34?




1. _____

- 2) Which letter best shows -77?




2. _____

- 3) Which letter best shows -14?




3. _____

- 4) Which letter best shows -65?




4. _____

- 5) Which letter best shows -10?




5. _____

- 6) Which letter best shows -98?



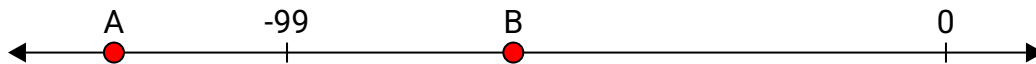
6. _____

- 7) Which letter best shows -115?



7. _____

- 8) Which letter best shows -125?



8. _____

- 9) Which letter best shows -24?



9. _____

- 10) Which letter best shows -23?



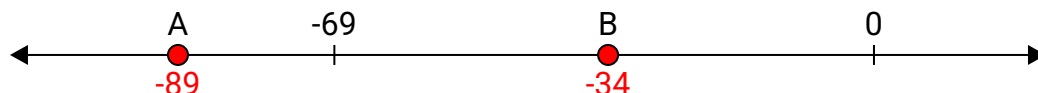
10. _____




Solve each problem.

Answers


- 1) Which letter best shows -34?

1. **B**


- 2) Which letter best shows -77?

2. **A**


- 3) Which letter best shows -14?

3. **B**


- 4) Which letter best shows -65?

4. **B**

- 5) Which letter best shows -10?

5. **B**

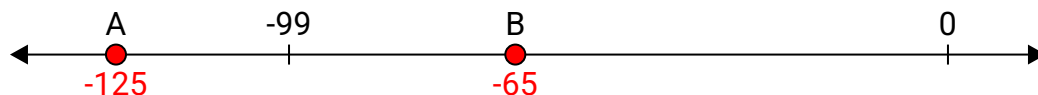
- 6) Which letter best shows -98?

6. **A**


- 7) Which letter best shows -115?

7. **A**


- 8) Which letter best shows -125?

8. **A**

- 9) Which letter best shows -24?

9. **B**

- 10) Which letter best shows -23?

10. **B**