




Solve each problem.


Answers

1) Which letter best shows -28?



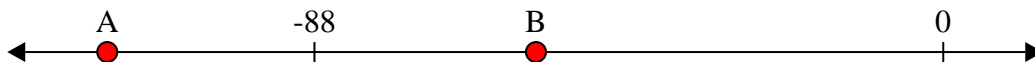
1. _____

2) Which letter best shows -26?



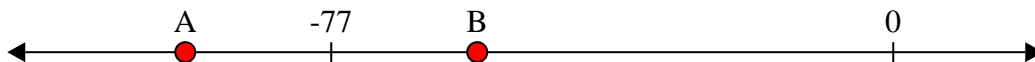
2. _____

3) Which letter best shows -117?




3. _____

4) Which letter best shows -97?



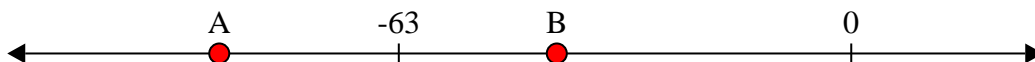
4. _____

5) Which letter best shows -113?




5. _____

6) Which letter best shows -88?




6. _____

7) Which letter best shows -22?




7. _____

8) Which letter best shows -25?




8. _____

9) Which letter best shows -82?



9. _____

10) Which letter best shows -120?




10. _____

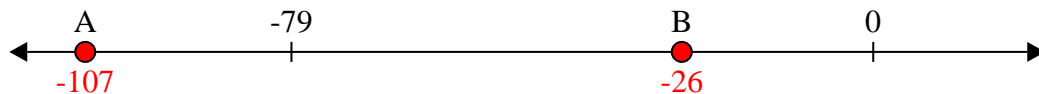


Solve each problem.

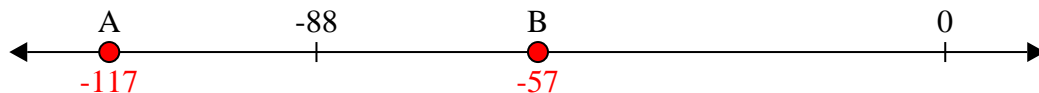
1) Which letter best shows -28?



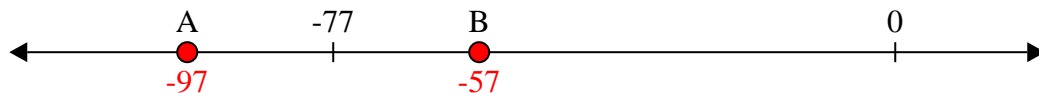
2) Which letter best shows -26?



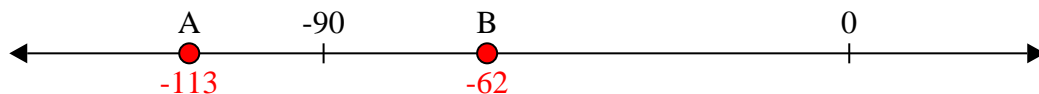
3) Which letter best shows -117?



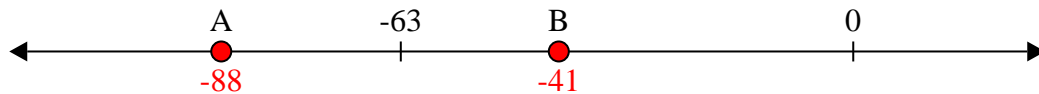
4) Which letter best shows -97?




5) Which letter best shows -113?




6) Which letter best shows -88?




7) Which letter best shows -22?



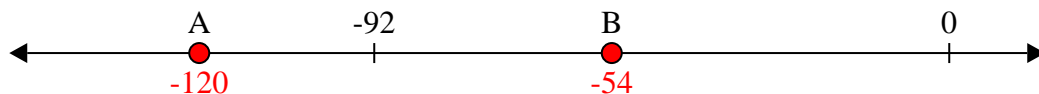
8) Which letter best shows -25?



9) Which letter best shows -82?



10) Which letter best shows -120?



Answers

1. **B**

2. **B**

3. **A**

4. **A**

5. **A**

6. **A**

7. **B**

8. **B**

9. **A**

10. **A**