




Solve each problem.


**Answers**

1) Which letter best shows -128?




1. \_\_\_\_\_

2) Which letter best shows -114?



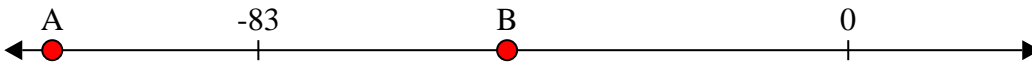
2. \_\_\_\_\_

3) Which letter best shows -76?




3. \_\_\_\_\_

4) Which letter best shows -48?




4. \_\_\_\_\_

5) Which letter best shows -47?




5. \_\_\_\_\_

6) Which letter best shows -115?



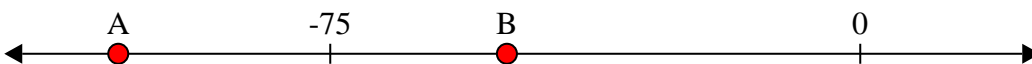
6. \_\_\_\_\_

7) Which letter best shows -115?




7. \_\_\_\_\_

8) Which letter best shows -105?




8. \_\_\_\_\_

9) Which letter best shows -10?



9. \_\_\_\_\_

10) Which letter best shows -82?



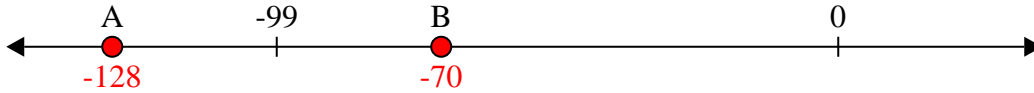
10. \_\_\_\_\_



Solve each problem.

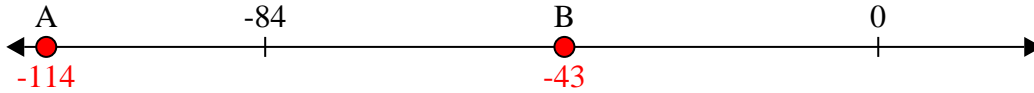
**Answers**

1) Which letter best shows -128?



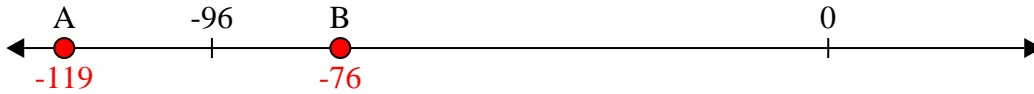
1.   **A**  

2) Which letter best shows -114?



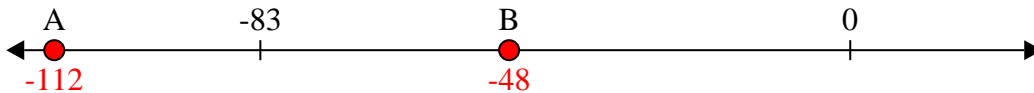
2.   **A**  

3) Which letter best shows -76?



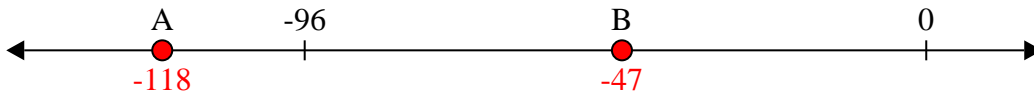
3.   **B**  

4) Which letter best shows -48?




4.   **B**  

5) Which letter best shows -47?




5.   **B**  

6) Which letter best shows -115?



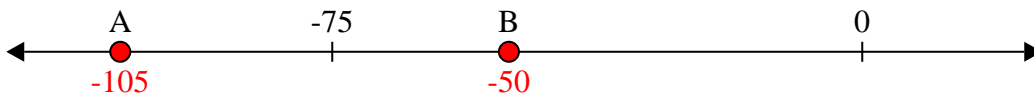
6.   **A**  

7) Which letter best shows -115?




7.   **A**  

8) Which letter best shows -105?



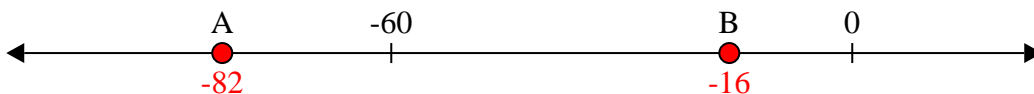
8.   **A**  

9) Which letter best shows -10?



9.   **B**  

10) Which letter best shows -82?



10.   **A**