




Solve each problem.


Answers

1) Which letter best shows -86?




1. _____

2) Which letter best shows -96?




2. _____

3) Which letter best shows -40?



3. _____

4) Which letter best shows -83?



4. _____

5) Which letter best shows -19?



5. _____

6) Which letter best shows -105?



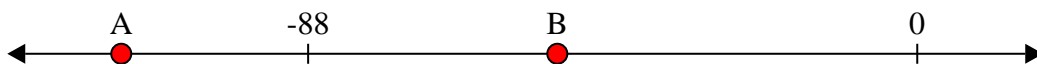
6. _____

7) Which letter best shows -31?




7. _____

8) Which letter best shows -115?




8. _____

9) Which letter best shows -90?



9. _____

10) Which letter best shows -15?




10. _____

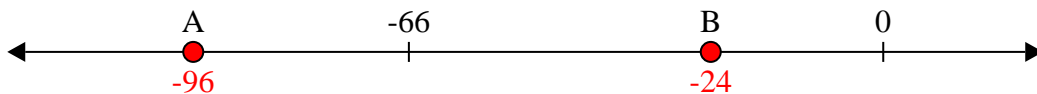


Solve each problem.

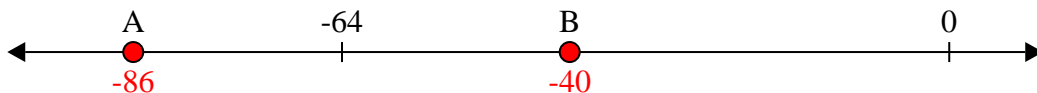
1) Which letter best shows -86?



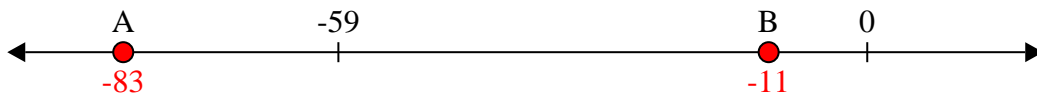
2) Which letter best shows -96?




3) Which letter best shows -40?




4) Which letter best shows -83?




5) Which letter best shows -19?



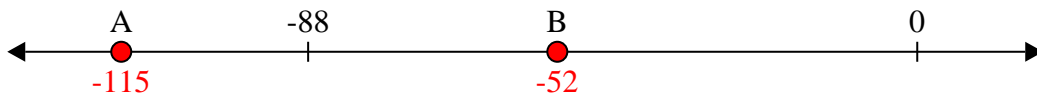
6) Which letter best shows -105?




7) Which letter best shows -31?



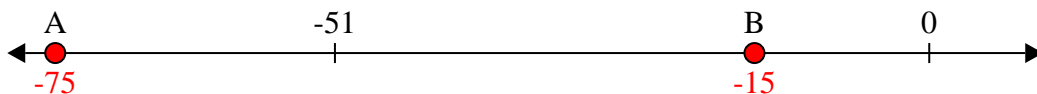
8) Which letter best shows -115?



9) Which letter best shows -90?



10) Which letter best shows -15?



Answers

1. **A**

2. **A**

3. **B**

4. **A**

5. **B**

6. **A**

7. **B**

8. **A**

9. **A**

10. **B**