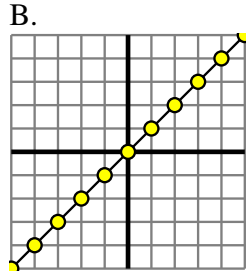




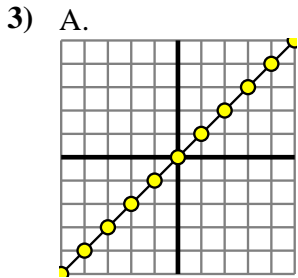
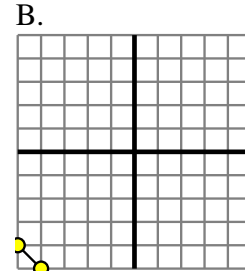
Determine which function has the greater change of rate. If the rate is the same answer with 'same'.

Answers

1) A.
 $Y=6 \times X+5$

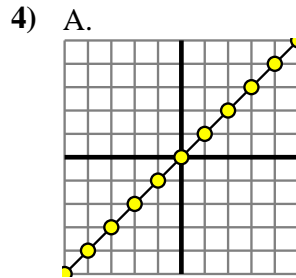


2) A.
 $Y=X-(5 \times -1)$



B.

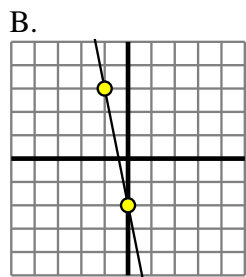
X	Y
-10	-17
-8	-15
-1	-8
2	-5
6	-1



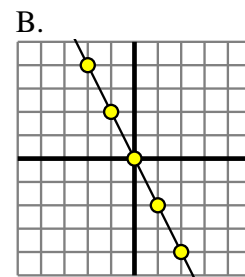
B.
 $Y=X-4$

5) A.

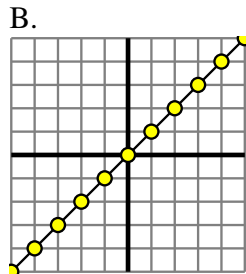
X	Y
-8	-14
-2	-2
-1	0
1	4
10	22



6) A.
 $Y=2 \times X+(X-5)$

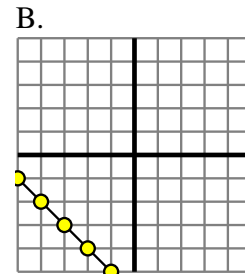


7) A.
 $Y=X-(5 \times -1)$



8) A.

X	Y
-9	-12
-1	-4
3	0
5	2
8	5

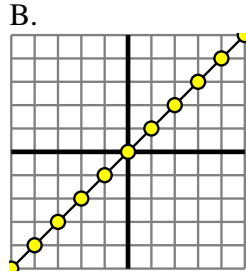


- 1. _____
- 2. _____
- 3. _____
- 4. _____
- 5. _____
- 6. _____
- 7. _____
- 8. _____

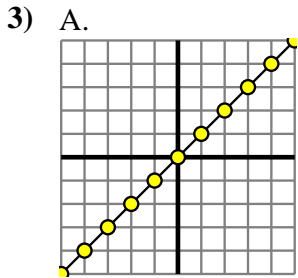
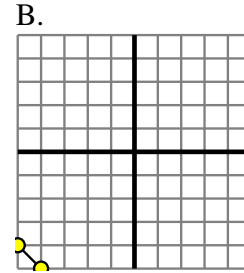


Determine which function has the greater change of rate. If the rate is the same answer with 'same'.

1) A.
 $Y=6 \times X+5$

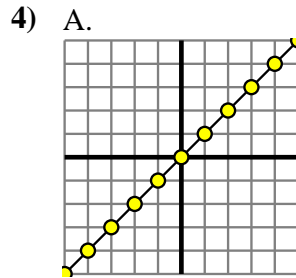


2) A.
 $Y=X-(5 \times -1)$



B.

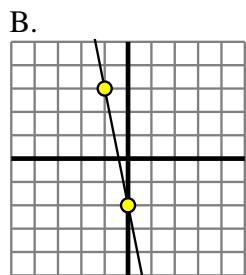
X	Y
-10	-17
-8	-15
-1	-8
2	-5
6	-1



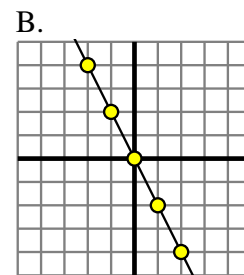
B.
 $Y=X-4$

5) A.

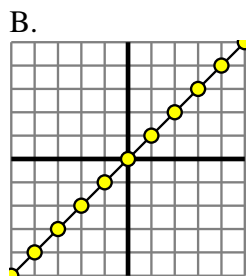
X	Y
-8	-14
-2	-2
-1	0
1	4
10	22



6) A.
 $Y=2 \times X+(X-5)$

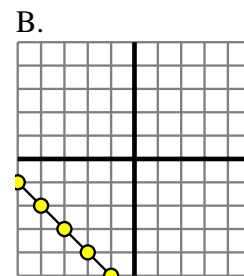


7) A.
 $Y=X-(5 \times -1)$



8) A.

X	Y
-9	-12
-1	-4
3	0
5	2
8	5



Answers

1. **A**
2. **same**
3. **same**
4. **same**
5. **B**
6. **A**
7. **same**
8. **same**