


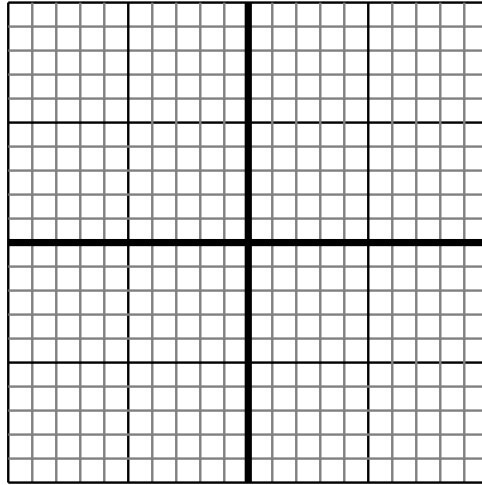


Sketch your line then answer with your slope.

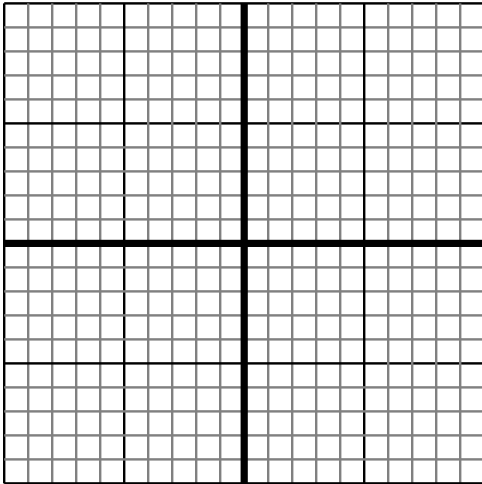
- 1) Sketch a line with a Y intercept of 6 and a smaller rate of change than: $Y = -\frac{6}{1} + 6$



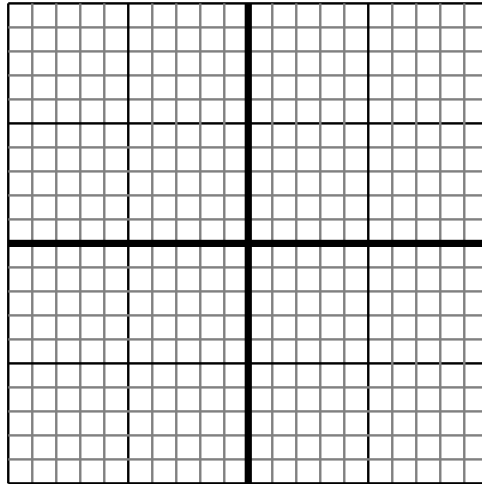
- 2) Sketch a line with a Y intercept of 9 and a greater rate of change than: $Y = -\frac{1}{9} + 9$



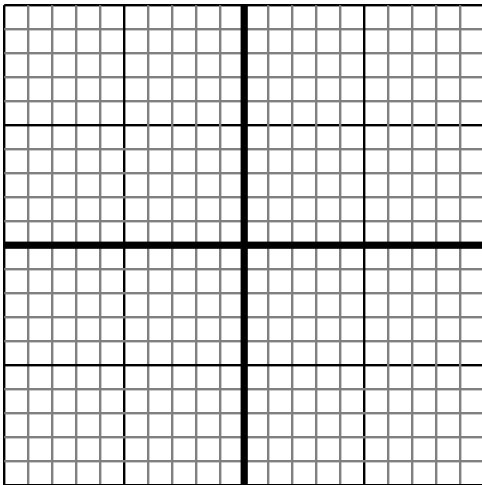
- 3) Sketch a line with a Y intercept of -9 and a greater rate of change than: $Y = -\frac{4}{6} - 9$



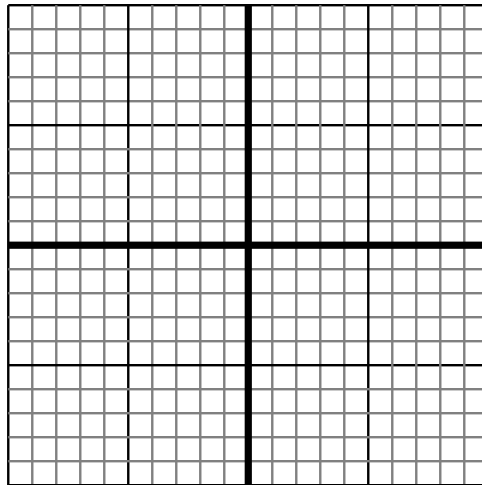
- 4) Sketch a line with a Y intercept of -3 and a greater rate of change than: $Y = -\frac{4}{2} - 3$



- 5) Sketch a line with a Y intercept of 6 and a greater rate of change than: $Y = -\frac{4}{6} + 6$



- 6) Sketch a line with a Y intercept of 0 and a greater rate of change than: $Y = -\frac{1}{8} + 0$



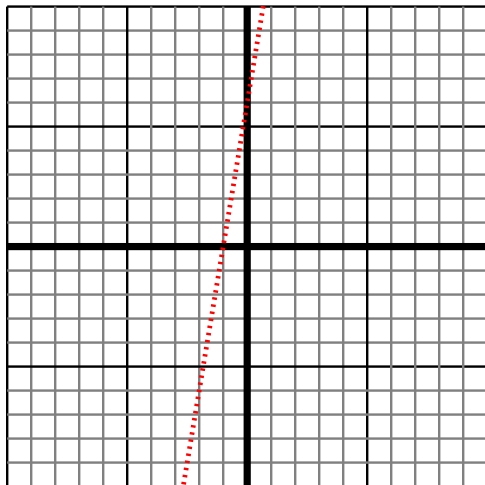
Answers

1. _____
2. _____
3. _____
4. _____
5. _____
6. _____

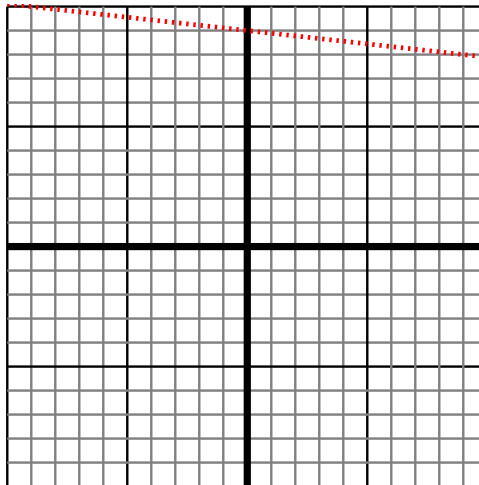


Sketch your line then answer with your slope.

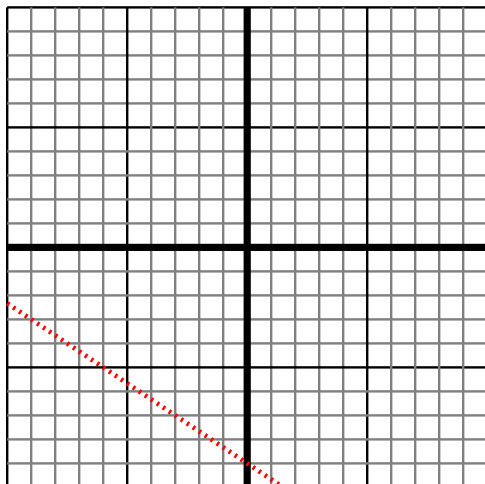
- 1) Sketch a line with a Y intercept of 6 and a smaller rate of change than: $Y = -\frac{6}{-1} + 6$



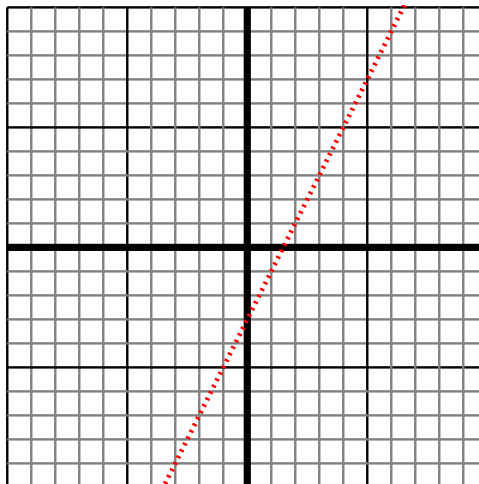
- 2) Sketch a line with a Y intercept of 9 and a greater rate of change than: $Y = -\frac{1}{9} + 9$



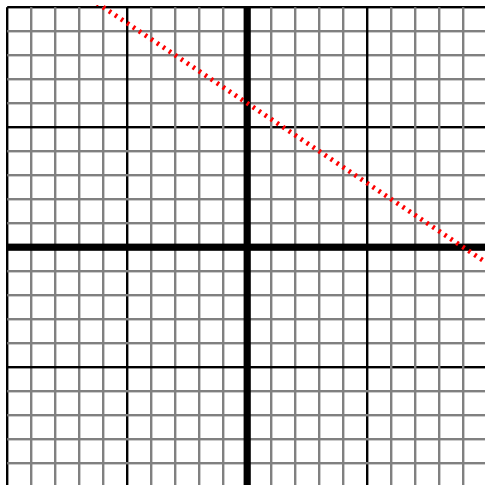
- 3) Sketch a line with a Y intercept of -9 and a greater rate of change than: $Y = -\frac{4}{6} - 9$



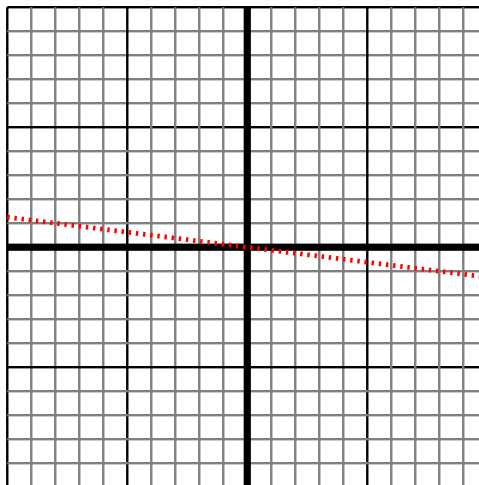
- 4) Sketch a line with a Y intercept of -3 and a greater rate of change than: $Y = -\frac{4}{-2} - 3$



- 5) Sketch a line with a Y intercept of 6 and a greater rate of change than: $Y = -\frac{4}{6} + 6$



- 6) Sketch a line with a Y intercept of 0 and a greater rate of change than: $Y = -\frac{1}{8} + 0$



Answers

1. $< |-\frac{6}{-1}|$
2. $> |-\frac{1}{9}|$
3. $> |-\frac{4}{6}|$
4. $> |-\frac{4}{-2}|$
5. $> |-\frac{4}{6}|$
6. $> |-\frac{1}{8}|$