

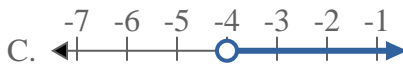
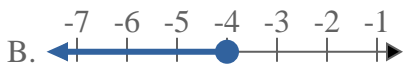


Solve each problem.

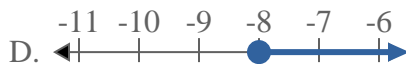
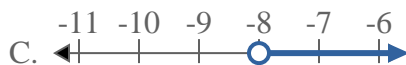
1) Which option best shows $X < -5$



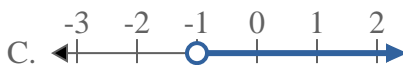
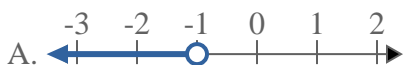
2) Which option best shows $X < -4$



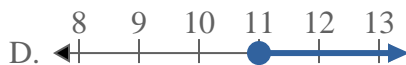
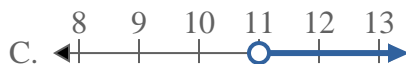
3) Which option best shows $X < -8$



4) Which option best shows $X < -1$



5) Which option best shows $X \geq 11$



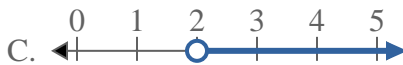
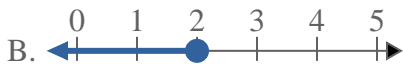
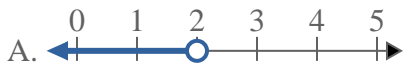
6) Which option best shows $X \geq 5$



7) Which option best shows $X \geq 13$



8) Which option best shows $X < 2$



Answers

1. _____

2. _____

3. _____

4. _____

5. _____

6. _____

7. _____

8. _____

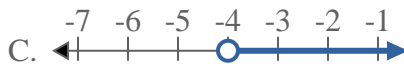
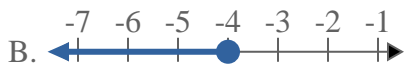


Solve each problem.

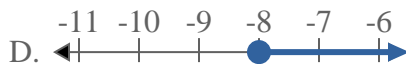
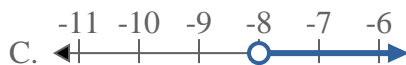
1) Which option best shows $X < -5$



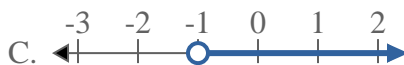
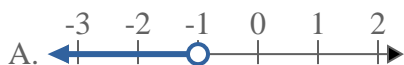
2) Which option best shows $X < -4$



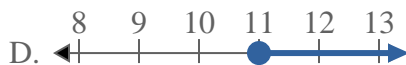
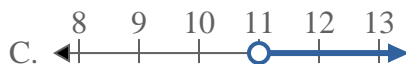
3) Which option best shows $X < -8$



4) Which option best shows $X < -1$



5) Which option best shows $X \geq 11$



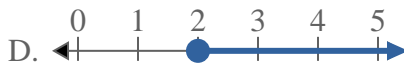
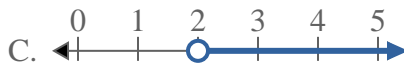
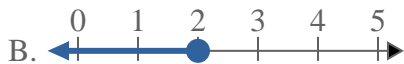
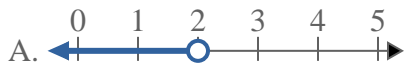
6) Which option best shows $X \geq 5$



7) Which option best shows $X \geq 13$



8) Which option best shows $X < 2$



Answers

1. **A**

2. **A**

3. **A**

4. **A**

5. **D**

6. **D**

7. **D**

8. **A**