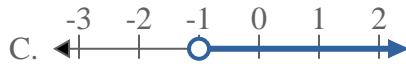
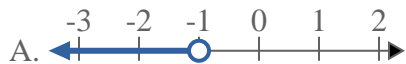




Solve each problem.

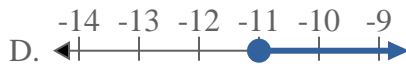
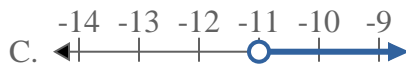
1) Which option best shows  $X > -1$



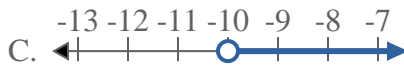
2) Which option best shows  $X < -14$



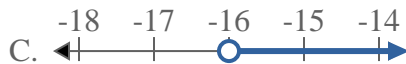
3) Which option best shows  $X \leq -11$



4) Which option best shows  $X < -10$



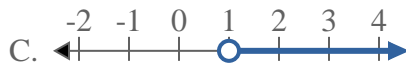
5) Which option best shows  $X \leq -16$



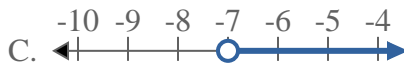
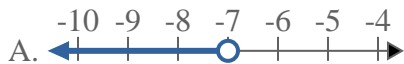
6) Which option best shows  $X > 17$



7) Which option best shows  $X > 1$



8) Which option best shows  $X > -7$



**Answers**

1. \_\_\_\_\_

2. \_\_\_\_\_

3. \_\_\_\_\_

4. \_\_\_\_\_

5. \_\_\_\_\_

6. \_\_\_\_\_

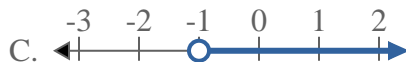
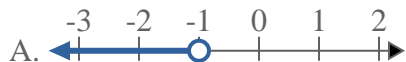
7. \_\_\_\_\_

8. \_\_\_\_\_

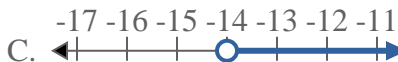
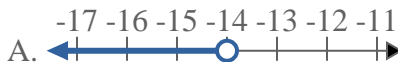


Solve each problem.

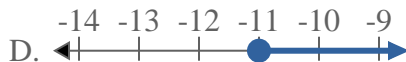
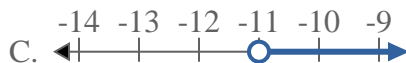
1) Which option best shows  $X > -1$



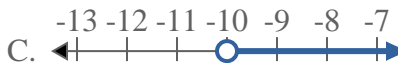
2) Which option best shows  $X < -14$



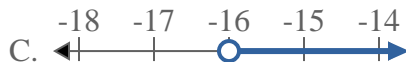
3) Which option best shows  $X \leq -11$



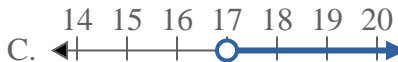
4) Which option best shows  $X < -10$



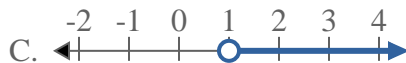
5) Which option best shows  $X \leq -16$



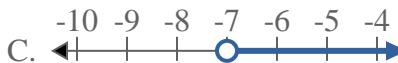
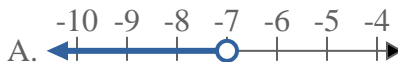
6) Which option best shows  $X > 17$



7) Which option best shows  $X > 1$



8) Which option best shows  $X > -7$



**Answers**

1.     **C**    

2.     **A**    

3.     **B**    

4.     **A**    

5.     **B**    

6.     **C**    

7.     **C**    

8.     **C**