




Solve each problem.

1) Which option best shows  $X > -5$



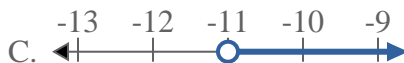
2) Which option best shows  $X \geq 12$



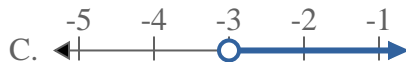
3) Which option best shows  $X \leq 20$



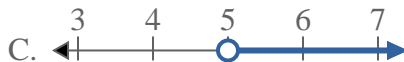
4) Which option best shows  $X \geq -11$



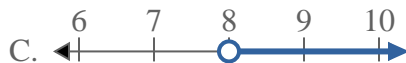
5) Which option best shows  $X > -3$



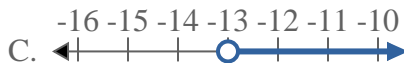
6) Which option best shows  $X > 5$



7) Which option best shows  $X \leq 8$



8) Which option best shows  $X \leq -13$



**Answers**

1. \_\_\_\_\_

2. \_\_\_\_\_

3. \_\_\_\_\_

4. \_\_\_\_\_

5. \_\_\_\_\_

6. \_\_\_\_\_

7. \_\_\_\_\_

8. \_\_\_\_\_



Solve each problem.

1) Which option best shows  $X > -5$



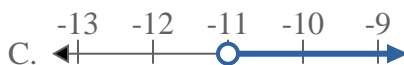
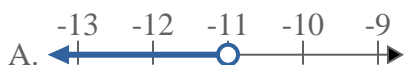
2) Which option best shows  $X \geq 12$



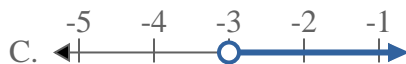
3) Which option best shows  $X \leq 20$



4) Which option best shows  $X \geq -11$



5) Which option best shows  $X > -3$



6) Which option best shows  $X > 5$



7) Which option best shows  $X \leq 8$



8) Which option best shows  $X \leq -13$



**Answers**

1. **C**

2. **D**

3. **B**

4. **D**

5. **C**

6. **C**

7. **B**

8. **B**