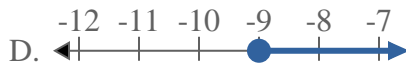
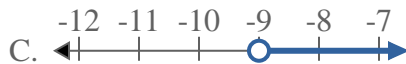




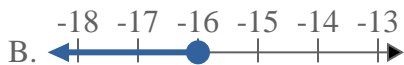
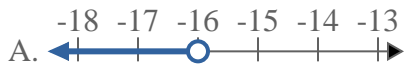
Solve each problem.

**Answers**

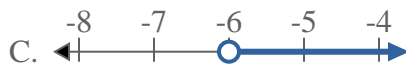
1) Which option best shows  $X < -9$



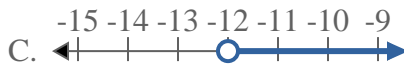
2) Which option best shows  $X \leq -16$



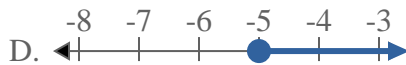
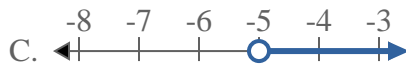
3) Which option best shows  $X \geq -6$



4) Which option best shows  $X > -12$



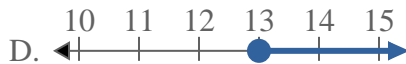
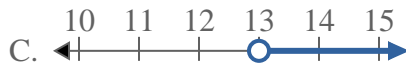
5) Which option best shows  $X \leq -5$



6) Which option best shows  $X < -10$



7) Which option best shows  $X > 13$



8) Which option best shows  $X < 11$

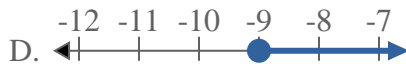
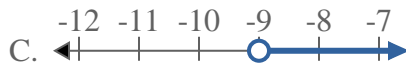


1. \_\_\_\_\_
2. \_\_\_\_\_
3. \_\_\_\_\_
4. \_\_\_\_\_
5. \_\_\_\_\_
6. \_\_\_\_\_
7. \_\_\_\_\_
8. \_\_\_\_\_

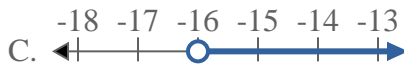
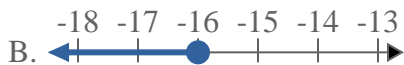
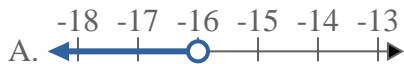


Solve each problem.

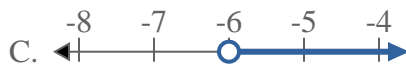
1) Which option best shows  $X < -9$



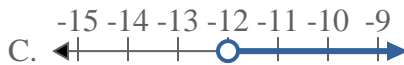
2) Which option best shows  $X \leq -16$



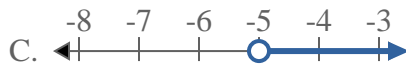
3) Which option best shows  $X \geq -6$



4) Which option best shows  $X > -12$



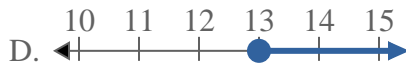
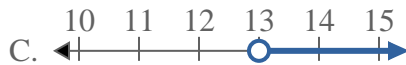
5) Which option best shows  $X \leq -5$



6) Which option best shows  $X < -10$



7) Which option best shows  $X > 13$



8) Which option best shows  $X < 11$



**Answers**

1.   **A**  

2.   **B**  

3.   **D**  

4.   **C**  

5.   **B**  

6.   **A**  

7.   **C**  

8.   **A**