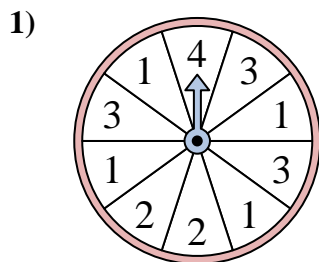
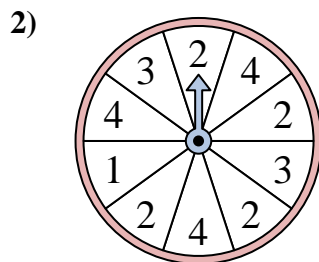




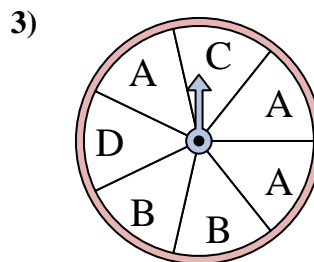
Solve each problem. Round your answer to the nearest tenth.



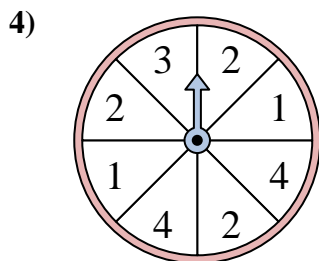
The spinner has a \_\_\_\_\_% chance of landing on a 3.



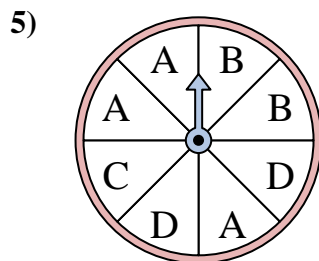
The spinner has a \_\_\_\_\_% chance of landing on a 3.



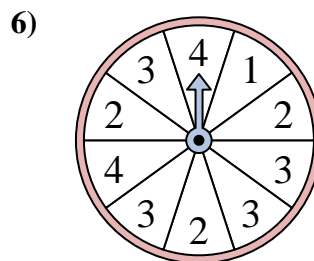
The spinner has a \_\_\_\_\_% chance of landing on a A.



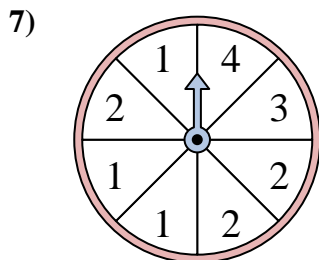
The spinner has a \_\_\_\_\_% chance of landing on a 2.



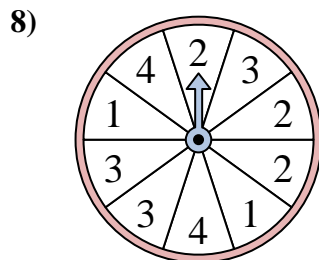
The spinner has a \_\_\_\_\_% chance of landing on a C.



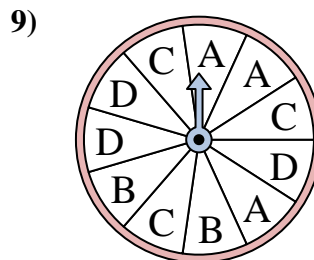
The spinner has a \_\_\_\_\_% chance of landing on a 3.



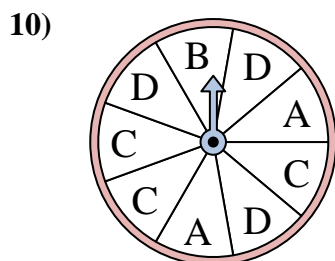
The spinner has a \_\_\_\_\_% chance of landing on a 2.



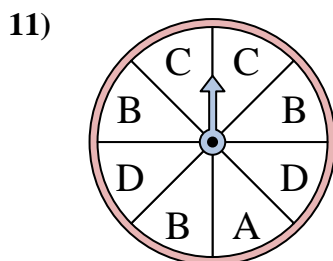
The spinner has a \_\_\_\_\_% chance of landing on a 3.



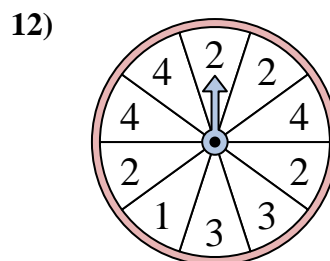
The spinner has a \_\_\_\_\_% chance of landing on a C.



The spinner has a \_\_\_\_\_% chance of landing on a B.



The spinner has a \_\_\_\_\_% chance of landing on a C.



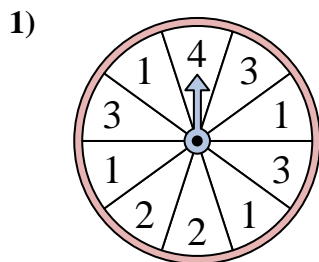
The spinner has a \_\_\_\_\_% chance of landing on a 4.

**Answers**

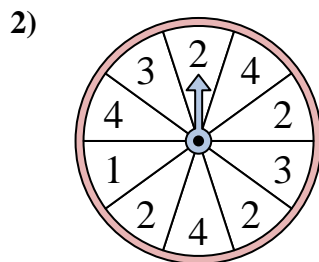
1. \_\_\_\_\_
2. \_\_\_\_\_
3. \_\_\_\_\_
4. \_\_\_\_\_
5. \_\_\_\_\_
6. \_\_\_\_\_
7. \_\_\_\_\_
8. \_\_\_\_\_
9. \_\_\_\_\_
10. \_\_\_\_\_
11. \_\_\_\_\_
12. \_\_\_\_\_



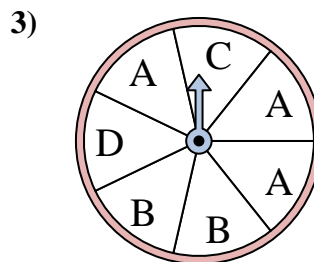
Solve each problem. Round your answer to the nearest tenth.



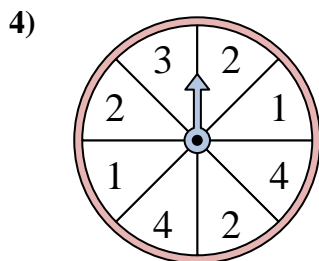
The spinner has a \_\_\_\_\_% chance of landing on a 3.



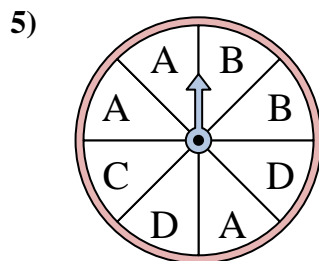
The spinner has a \_\_\_\_\_% chance of landing on a 3.



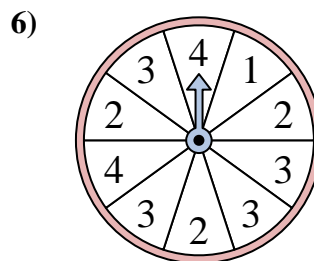
The spinner has a \_\_\_\_\_% chance of landing on a A.



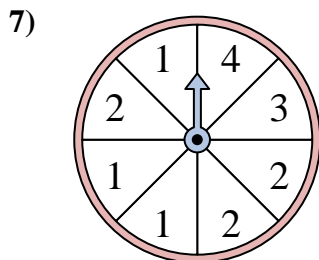
The spinner has a \_\_\_\_\_% chance of landing on a 2.



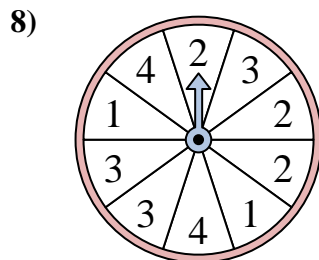
The spinner has a \_\_\_\_\_% chance of landing on a C.



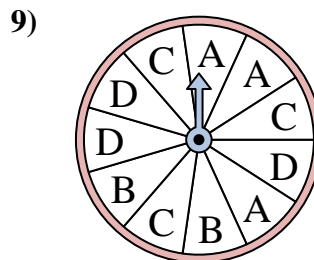
The spinner has a \_\_\_\_\_% chance of landing on a 3.



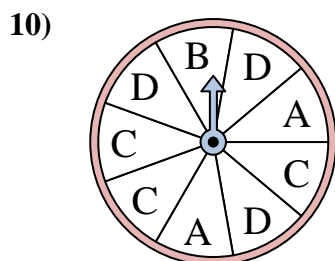
The spinner has a \_\_\_\_\_% chance of landing on a 2.



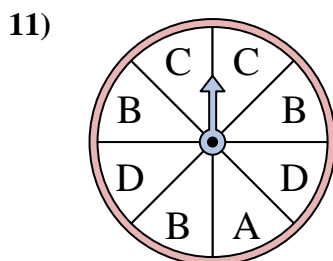
The spinner has a \_\_\_\_\_% chance of landing on a 3.



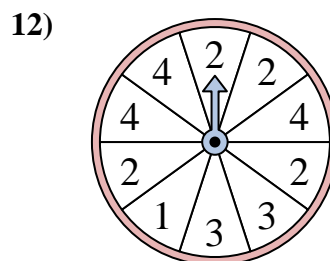
The spinner has a \_\_\_\_\_% chance of landing on a C.



The spinner has a \_\_\_\_\_% chance of landing on a B.



The spinner has a \_\_\_\_\_% chance of landing on a C.



The spinner has a \_\_\_\_\_% chance of landing on a 4.

Answers

1. 30
2. 20
3. 42.9
4. 37.5
5. 12.5
6. 40
7. 37.5
8. 30
9. 27.3
10. 11.1
11. 25
12. 30