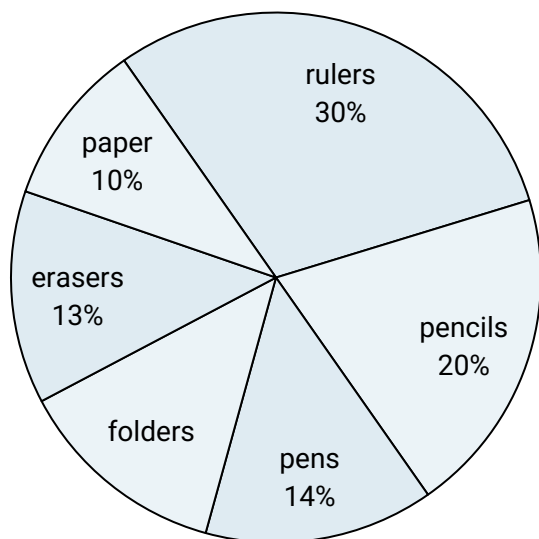




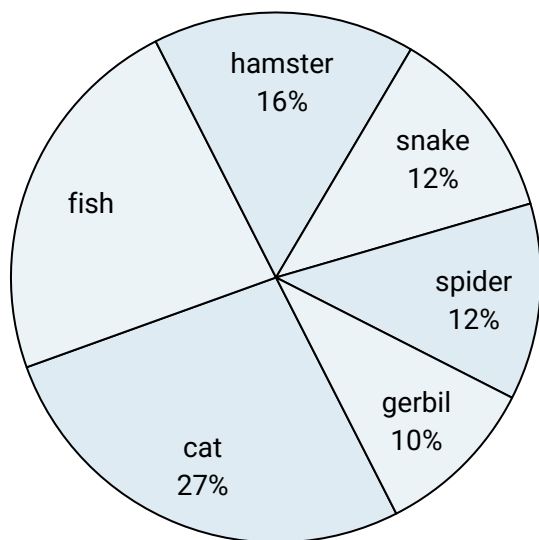
Use the graph to solve.

School Store Sales



- 1) Which product sold the worst?
- 2) What percent of the sales were pencils?
- 3) Which two products accounted for about half the sales?
- 4) What is the combined amount of paper and pens sold?
- 5) Which product sold the best?

Favorite Pet



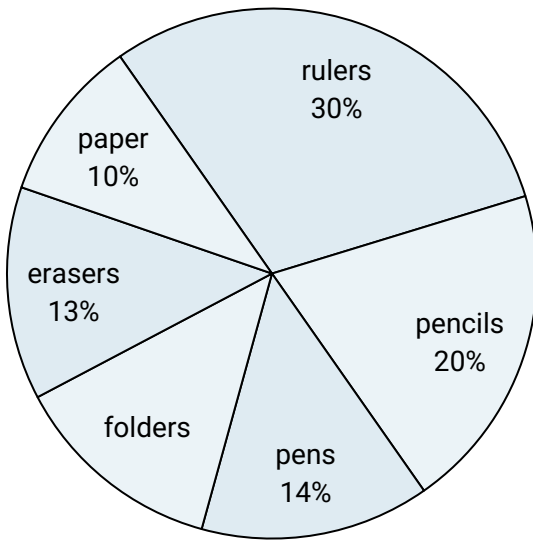
- 6) What percent of people said the snake was their favorite pet?
- 7) Which pet did the least amount of people say was their favorite?
- 8) Which pet did the greatest number of people like?
- 9) What percent of people preferred either the cat or the spider?
- 10) Which two pets did about half the people say was their favorite?

**Answers**

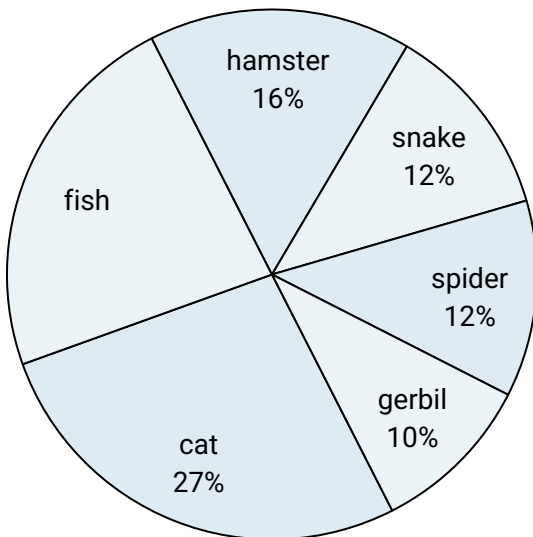
1. \_\_\_\_\_
2. \_\_\_\_\_
3. \_\_\_\_\_
4. \_\_\_\_\_
5. \_\_\_\_\_
6. \_\_\_\_\_
7. \_\_\_\_\_
8. \_\_\_\_\_
9. \_\_\_\_\_
10. \_\_\_\_\_



Use the graph to solve.

**School Store Sales**

- 1) Which product sold the worst?
- 2) What percent of the sales were pencils?
- 3) Which two products accounted for about half the sales?
- 4) What is the combined amount of paper and pens sold?
- 5) Which product sold the best?

**Favorite Pet**

- 6) What percent of people said the snake was their favorite pet?
- 7) Which pet did the least amount of people say was their favorite?
- 8) Which pet did the greatest number of people like?
- 9) What percent of people preferred either the cat or the spider?
- 10) Which two pets did about half the people say was their favorite?

**Answers**

1. **paper**
2. **20%**
3. **rulers & pencils**
4. **24%**
5. **rulers**
6. **12%**
7. **gerbil**
8. **cat**
9. **39%**
10. **cat & fish**