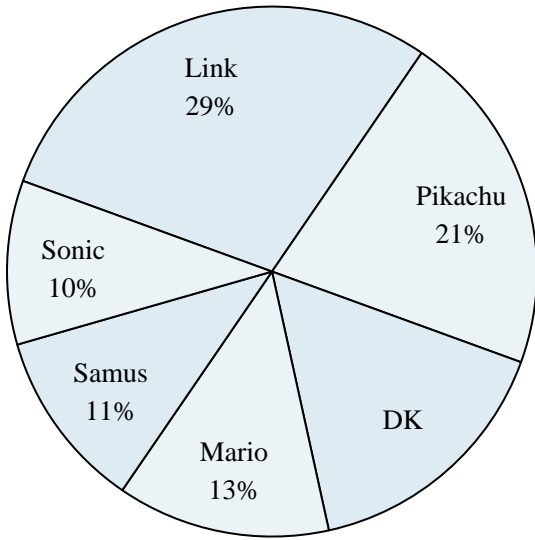




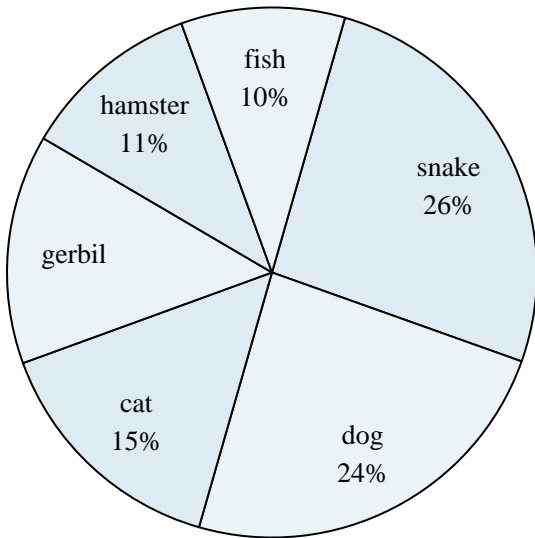
Use the graph to solve.

Favorite Game Character



- 1) What percent of people said either Link or DK was their favorite?
- 2) Which two characters did about half the people say was their favorite?
- 3) What percent of people said Samus was their favorite?
- 4) Which character was the least popular?
- 5) Which character was the most popular?

Favorite Pet



- 6) What percent of people preferred either the cat or the snake?
- 7) Which pet did the least amount of people say was their favorite?
- 8) Which two pets did about half the people say was their favorite?
- 9) What percent of people said the hamster was their favorite pet?
- 10) Which pet did the greatest number of people like?

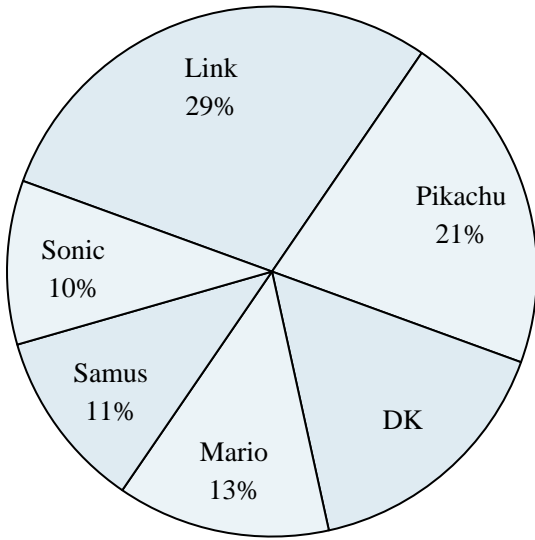
Answers

1. _____
2. _____
3. _____
4. _____
5. _____
6. _____
7. _____
8. _____
9. _____
10. _____



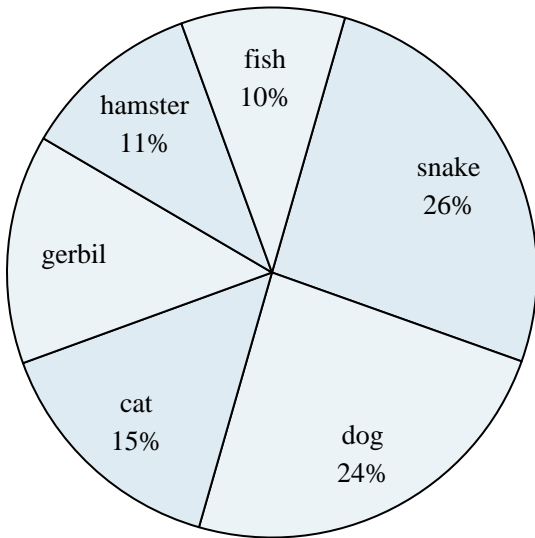
Use the graph to solve.

Favorite Game Character



- 1) What percent of people said either Link or DK was their favorite?
- 2) Which two characters did about half the people say was their favorite?
- 3) What percent of people said Samus was their favorite?
- 4) Which character was the least popular?
- 5) Which character was the most popular?

Favorite Pet



- 6) What percent of people preferred either the cat or the snake?
- 7) Which pet did the least amount of people say was their favorite?
- 8) Which two pets did about half the people say was their favorite?
- 9) What percent of people said the hamster was their favorite pet?
- 10) Which pet did the greatest number of people like?

Answers

1. 45%
2. Link & Pikachu
3. 11%
4. Sonic
5. Link
6. 41%
7. fish
8. snake & dog
9. 11%
10. snake