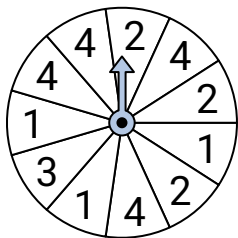




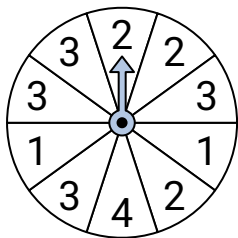
Solve each problem.

Answers

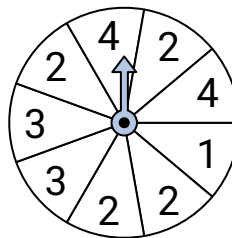
- 1) Which number is the spinner least likely to land on?



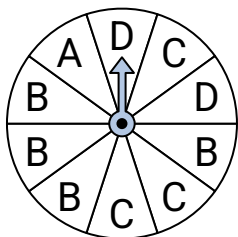
- 2) Which number is the spinner least likely to land on?




- 3) Which number is the spinner most likely to land on?



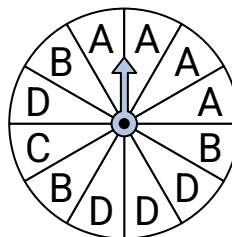
- 4) Which letter is the spinner most likely to land on?



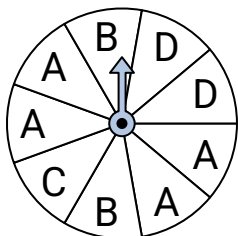
- 5) Which number is the spinner least likely to land on?



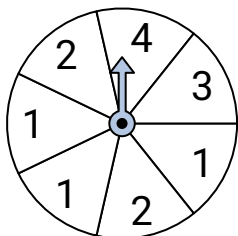
- 6) Which letter is the spinner least likely to land on?



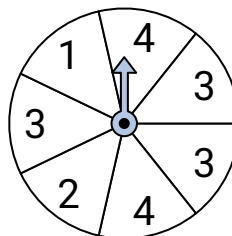
- 7) Which letter is the spinner most likely to land on?



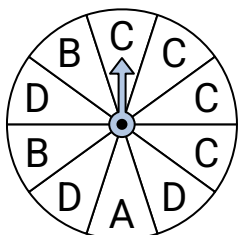
- 8) Which two numbers is the spinner equally likely to land on?



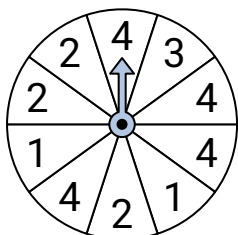
- 9) Which two numbers is the spinner equally likely to land on?



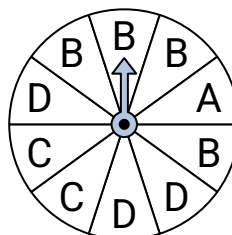
- 10) Which letter is the spinner least likely to land on?



- 11) Which number is the spinner most likely to land on?



- 12) Which letter is the spinner least likely to land on?



1. _____

2. _____

3. _____

4. _____

5. _____

6. _____

7. _____

8. _____

9. _____

10. _____

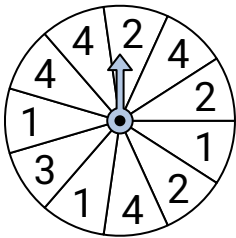
11. _____

12. _____

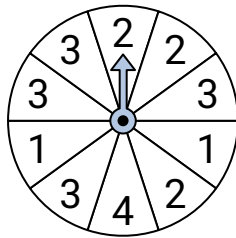


Solve each problem.

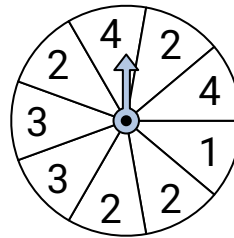
- 1) Which number is the spinner least likely to land on?



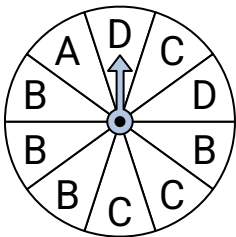
- 2) Which number is the spinner least likely to land on?




- 3) Which number is the spinner most likely to land on?



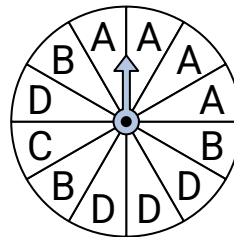
- 4) Which letter is the spinner most likely to land on?



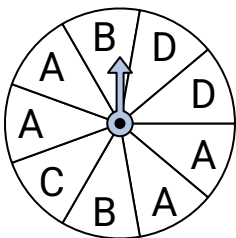
- 5) Which number is the spinner least likely to land on?



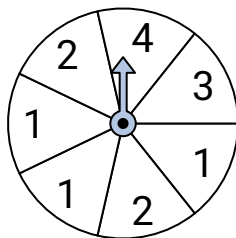
- 6) Which letter is the spinner least likely to land on?



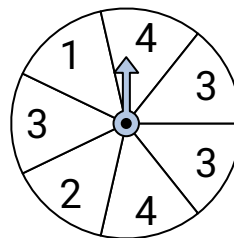
- 7) Which letter is the spinner most likely to land on?



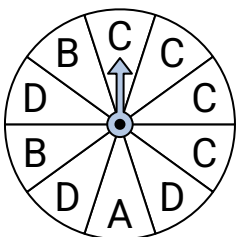
- 8) Which two numbers is the spinner equally likely to land on?



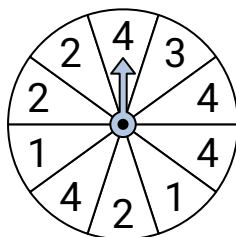
- 9) Which two numbers is the spinner equally likely to land on?



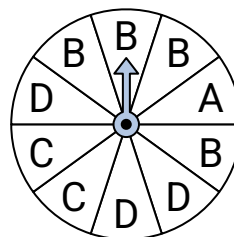
- 10) Which letter is the spinner least likely to land on?



- 11) Which number is the spinner most likely to land on?



- 12) Which letter is the spinner least likely to land on?

**Answers**

1. **3**
2. **4**
3. **2**
4. **B**
5. **1**
6. **C**
7. **A**
8. **3 & 4**
9. **1 & 2**
10. **A**
11. **4**
12. **A**