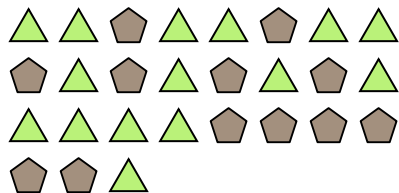





Solve each problem.

Ex) What is the ratio of pentagons to triangles?



1) What is the ratio of circles to moons?




Answers

Ex. **12:15**

2) What is the ratio of stars to squares?



3) What is the ratio of moons to pentagons?



1. _____

2. _____

3. _____

4. _____

5. _____

6. _____

7. _____

8. _____

9. _____

10. _____

11. _____

4) What is the ratio of hearts to moons?




5) What is the ratio of stars to triangles?



6) What is the ratio of moons to stars?




7) What is the ratio of pentagons to hearts?



8) What is the ratio of pentagons to stars?



9) What is the ratio of circles to moons?



10) What is the ratio of stars to moons?



11) What is the ratio of triangles to pentagons?

