



Use the double numberline to solve the problems.

Answers


1)

The ratio of boys to girls at the park was 6 to 5. If there were 12 boys, how many girls were there?

boys



girls




1. _____

2. _____


2)

A recipe call for 10 teaspoons of seasoning for every 3 batches of chicken. If you have 21 batches of chicken, how many teaspoons of seasoning will you need?

chicken



seasoning



3. _____


4. _____

5. _____


3)

In a video game for every 3 enemies defeat, you earned 7 points. If you defeated 24 enemies, how many points would you have earned?

enemies



points




6. _____

7. _____


4)

A box of candy had 7 cherry pieces for every 4 lemon pieces. If the box had 32 lemon pieces, how many cherry pieces would there be?

lemon



cherry




8. _____


5)

A store had a sale where you could get 10 bags of cashews for \$7. If you wanted to buy 50 bags, how much would it cost?

cashews




price




6)

For every 5 cans Dave collected for recycling he earned 8 cents. After he collected 10 cans, how much money would he have earned?

cans




money




7)

A movie theater put 5 cups of oil for every 7 batches of popcorn they made. After they had made 70 batches of popcorn, how much oil would they have used?

popcorn




oil




8)

A sloppy joe restaurant gave 9 napkins for every 6 items ordered. If someone bought 42 items, how many napkins should they get?

item



napkins



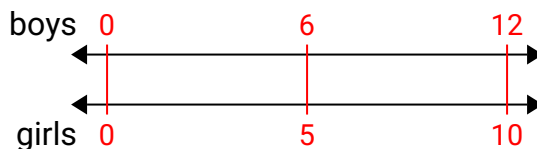


Use the double numberline to solve the problems.

Answers

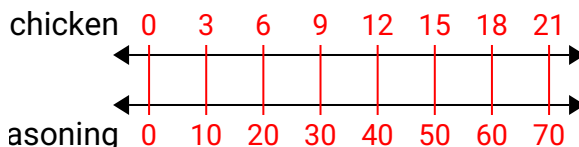
1)

The ratio of boys to girls at the park was 6 to 5. If there were 12 boys, how many girls were there?

1. **10**

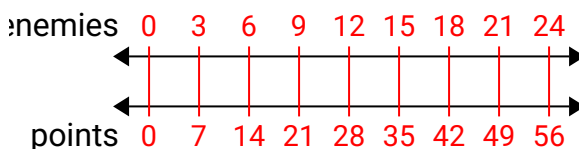
2)

A recipe call for 10 teaspoons of seasoning for every 3 batches of chicken. If you have 21 batches of chicken, how many teaspoons of seasoning will you need?

2. **70**3. **56**4. **56**5. **35**

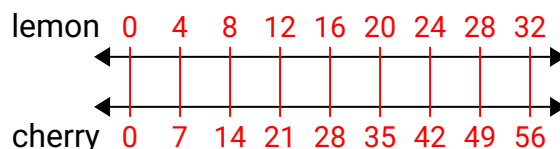
3)

In a video game for every 3 enemies defeat, you earned 7 points. If you defeated 24 enemies, how many points would you have earned?

6. **16**7. **50**

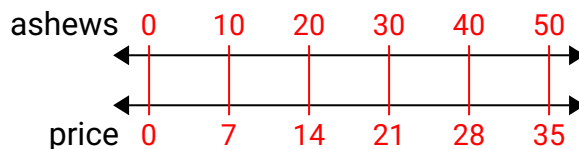
4)

A box of candy had 7 cherry pieces for every 4 lemon pieces. If the box had 32 lemon pieces, how many cherry pieces would there be?

8. **63**

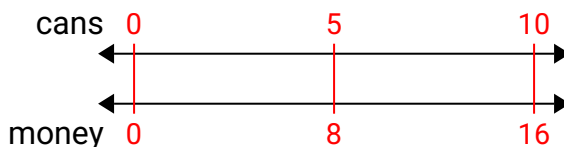
5)

A store had a sale where you could get 10 bags of cashews for \$7. If you wanted to buy 50 bags, how much would it cost?



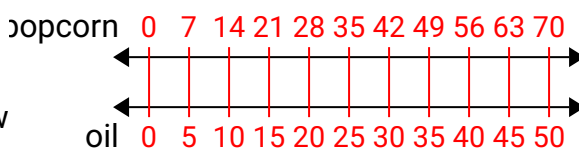
6)

For every 5 cans Dave collected for recycling he earned 8 cents. After he collected 10 cans, how much money would he have earned?



7)

A movie theater put 5 cups of oil for every 7 batches of popcorn they made. After they had made 70 batches of popcorn, how much oil would they have used?



8)

A sloppy joe restaurant gave 9 napkins for every 6 items ordered. If someone bought 42 items, how many napkins should they get?

