



Use the double numberline to solve the problems.

Answers

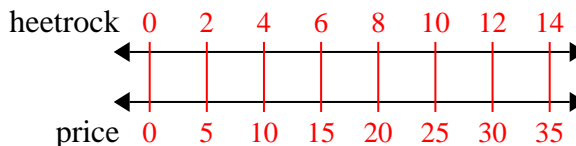
- | | | | |
|----|--|--|----------------------------------|
| 1) | A builder could get 2 sheets of sheetrock for \$5. If he bought 14 sheets, how much money would he have spent? | sheetrock
←————→
price
←————→ | 1. _____
2. _____ |
| 2) | A movie theater put 9 cups of oil for every 4 batches of popcorn they made. After they had made 36 batches of popcorn, how much oil would they have used? | popcorn
←————→
oil
←————→ | 3. _____
4. _____
5. _____ |
| 3) | On her MP3 player for every 2 pop song Katie had she also had 3 country song. If she has 14 pop songs on her MP3 player, how many country songs does she have? | pop
←————→
country
←————→ | 6. _____
7. _____ |
| 4) | A sloppy joe restaurant gave 3 napkins for every 7 items ordered. If someone bought 63 items, how many napkins should they get? | item
←————→
napkins
←————→ | 8. _____ |
| 5) | In a video game for every 2 enemies defeat, you earned 3 points. If you defeated 8 enemies, how many points would you have earned? | enemies
←————→
points
←————→ | |
| 6) | A box of candy had 9 cherry pieces for every 6 lemon pieces. If the box had 60 lemon pieces, how many cherry pieces would there be? | lemon
←————→
cherry
←————→ | |
| 7) | A recipe call for 9 teaspoons of seasoning for every 5 batches of chicken. If you have 45 batches of chicken, how many teaspoons of seasoning will you need? | chicken
←————→
seasoning
←————→ | |
| 8) | For every 2 cans Cody collected for recycling he earned 5 cents. After he collected 20 cans, how much money would he have earned? | cans
←————→
money
←————→ | |



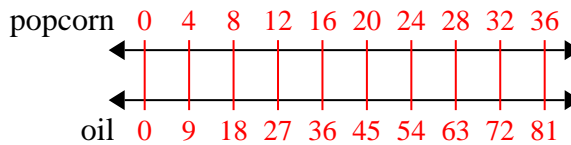
Use the double numberline to solve the problems.

Answers

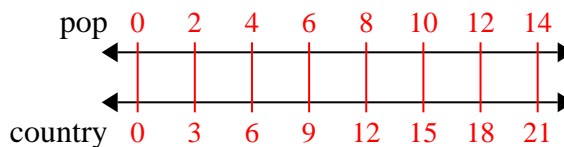
- 1) A builder could get 2 sheets of sheetrock for \$5. If he bought 14 sheets, how much money would he have spent?

1. 35

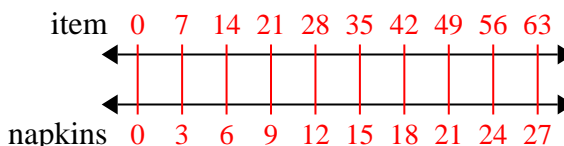
- 2) A movie theater put 9 cups of oil for every 4 batches of popcorn they made. After they had made 36 batches of popcorn, how much oil would they have used?

2. 81

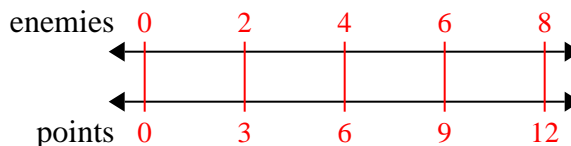
- 3) On her MP3 player for every 2 pop song Katie had she also had 3 country song. If she has 14 pop songs on her MP3 player, how many country songs does she have?

3. 21

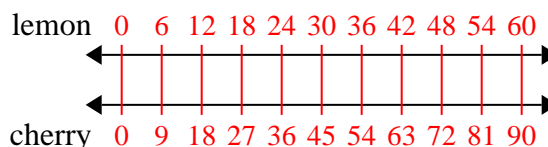
- 4) A sloppy joe restaurant gave 3 napkins for every 7 items ordered. If someone bought 63 items, how many napkins should they get?

4. 27

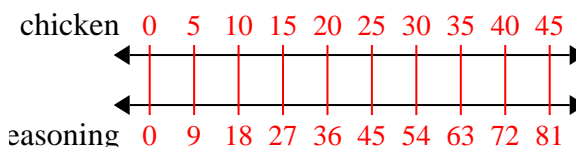
- 5) In a video game for every 2 enemies defeat, you earned 3 points. If you defeated 8 enemies, how many points would you have earned?

5. 12

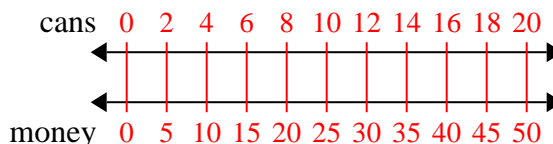
- 6) A box of candy had 9 cherry pieces for every 6 lemon pieces. If the box had 60 lemon pieces, how many cherry pieces would there be?

6. 90

- 7) A recipe call for 9 teaspoons of seasoning for every 5 batches of chicken. If you have 45 batches of chicken, how many teaspoons of seasoning will you need?

7. 81

- 8) For every 2 cans Cody collected for recycling he earned 5 cents. After he collected 20 cans, how much money would he have earned?

8. 50