



Use the double numberline to solve the problems.

Answers

- 1) At a school fundraiser for every 6 boxes of chocolate sold you earn 9 points. If you were to sell 60 boxes, how many points would you have earned?
- boxes
- points
- 2) A movie theater put 3 cups of oil for every 5 batches of popcorn they made. After they had made 30 batches of popcorn, how much oil would they have used?
- popcorn
- oil
- 3) For every 7 cans Frank collected for recycling he earned 4 cents. After he collected 70 cans, how much money would he have earned?
- cans
- money
- 4) A box of candy had 4 cherry pieces for every 5 lemon pieces. If the box had 30 lemon pieces, how many cherry pieces would there be?
- lemon
- cherry
- 5) On her MP3 player for every 2 pop song Amy had she also had 5 country song. If she has 6 pop songs on her MP3 player, how many country songs does she have?
- pop
- country
- 6) A sloppy joe restaurant gave 4 napkins for every 3 items ordered. If someone bought 21 items, how many napkins should they get?
- item
- napkins
- 7) In a video game for every 9 enemies defeat, you earned 6 points. If you defeated 54 enemies, how many points would you have earned?
- enemies
- points
- 8) A builder could get 10 sheets of sheetrock for \$2. If he bought 30 sheets, how much money would he have spent?
- heetrock
- price

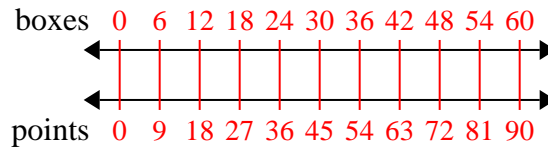
1. \_\_\_\_\_
2. \_\_\_\_\_
3. \_\_\_\_\_
4. \_\_\_\_\_
5. \_\_\_\_\_
6. \_\_\_\_\_
7. \_\_\_\_\_
8. \_\_\_\_\_



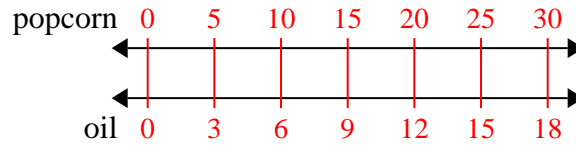
Use the double numberline to solve the problems.

**Answers**

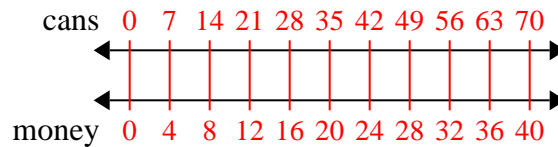
- 1) At a school fundraiser for every 6 boxes of chocolate sold you earn 9 points. If you were to sell 60 boxes, how many points would you have earned?

1. **90**

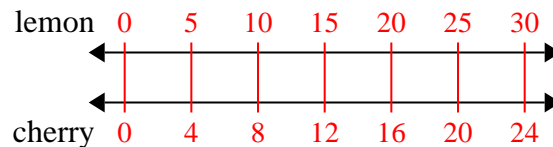
- 2) A movie theater put 3 cups of oil for every 5 batches of popcorn they made. After they had made 30 batches of popcorn, how much oil would they have used?

2. **18**3. **40**

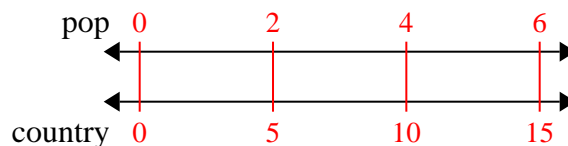
- 3) For every 7 cans Frank collected for recycling he earned 4 cents. After he collected 70 cans, how much money would he have earned?

4. **24**5. **15**6. **28**

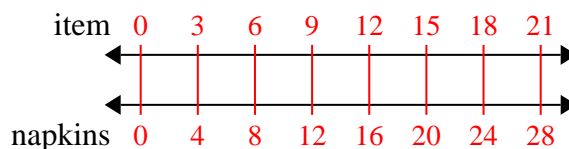
- 4) A box of candy had 4 cherry pieces for every 5 lemon pieces. If the box had 30 lemon pieces, how many cherry pieces would there be?

7. **36**8. **6**

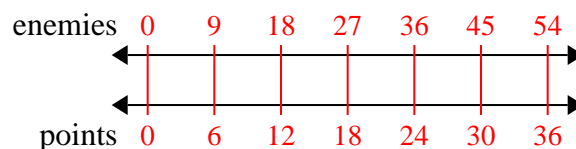
- 5) On her MP3 player for every 2 pop song Amy had she also had 5 country song. If she has 6 pop songs on her MP3 player, how many country songs does she have?



- 6) A sloppy joe restaurant gave 4 napkins for every 3 items ordered. If someone bought 21 items, how many napkins should they get?



- 7) In a video game for every 9 enemies defeat, you earned 6 points. If you defeated 54 enemies, how many points would you have earned?



- 8) A builder could get 10 sheets of sheetrock for \$2. If he bought 30 sheets, how much money would he have spent?

