



Rotate each shape. Answer as the new coordinates.

θ = Angle of Rotation

Rotation Formula

$$x1 = x \times \cos(\theta) - y \times \sin(\theta)$$

$$y1 = x \times \sin(\theta) + y \times \cos(\theta)$$

In the example to the right the shape is at coordinates (1,4). Lets find the coordinates if we rotated the shape 60° .

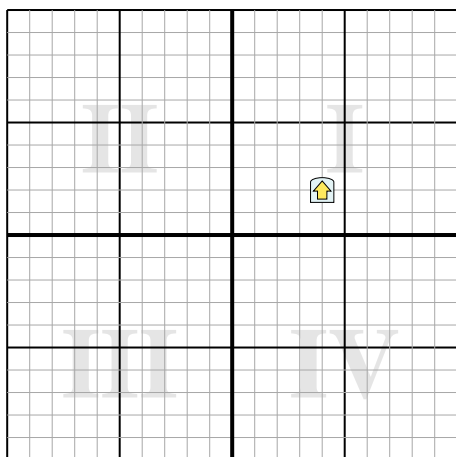


1. $x1 = 1 \times \cos(60) - 4 \times \sin(60)$
 $y1 = 1 \times \sin(60) + 4 \times \cos(60)$
2. $x1 = 1 \times 0.5 - 4 \times 0.87$
 $y1 = 1 \times 0.87 + 4 \times 0.5$
3. $x1 = 0.5 - 3.48$
 $y1 = 0.87 + 2$
4. $x1 = -2.98$
 $y1 = 2.87$
5. Looking at shape, we can see that rotated 60° it is at (-2.98 , 2.87).

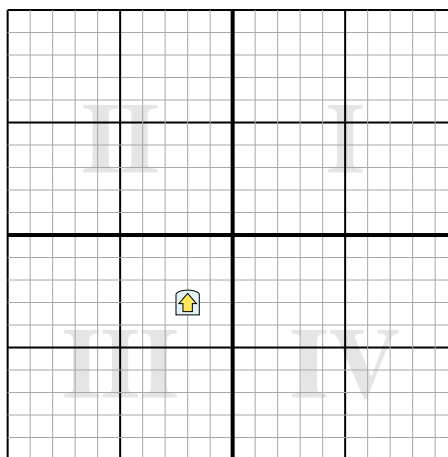
Answers

1. _____
2. _____
3. _____
4. _____

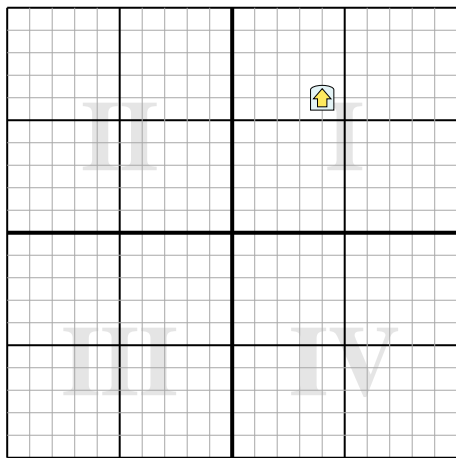
1) Rotate the shape -230° around the point (0,0).



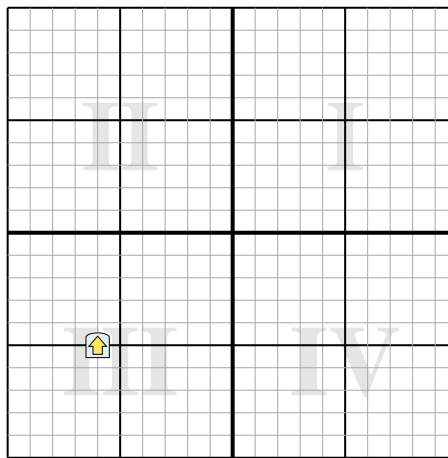
2) Rotate the shape 149° around the point (0,0).



3) Rotate the shape -184° around the point (0,0).



4) Rotate the shape 216° around the point (0,0).





Rotate each shape. Answer as the new coordinates.

θ = Angle of Rotation

Rotation Formula

$$x1 = x \times \cos(\theta) - y \times \sin(\theta)$$

$$y1 = x \times \sin(\theta) + y \times \cos(\theta)$$

In the example to the right the shape is at coordinates (1,4). Lets find the coordinates if we rotated the shape 60° .

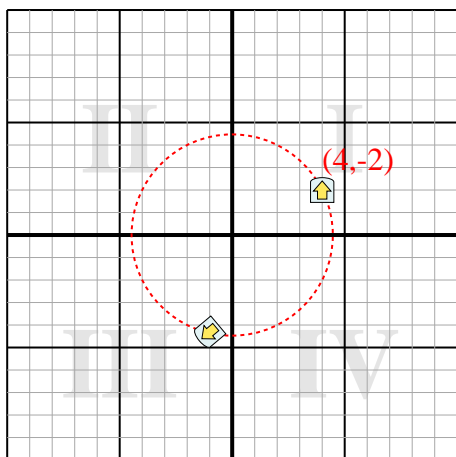


1. $x1 = 1 \times \cos(60) - 4 \times \sin(60)$
 $y1 = 1 \times \sin(60) + 4 \times \cos(60)$
2. $x1 = 1 \times 0.5 - 4 \times 0.87$
 $y1 = 1 \times 0.87 + 4 \times 0.5$
3. $x1 = 0.5 - 3.48$
 $y1 = 0.87 + 2$
4. $x1 = -2.98$
 $y1 = 2.87$
5. Looking at shape, we can see that rotated 60° it is at (-2.98 , 2.87).

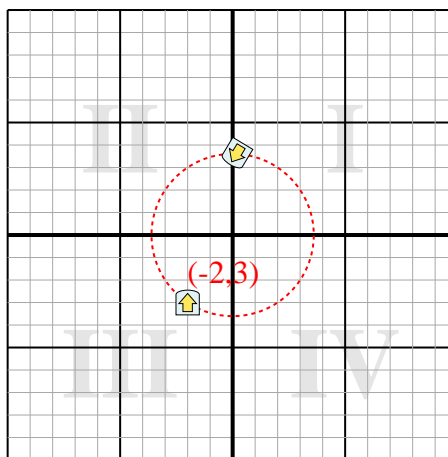
Answers

1. **(-1,-4.3)**
2. **(0.2,3.6)**
3. **(-3.6,-6.3)**
4. **(7.8,0.5)**

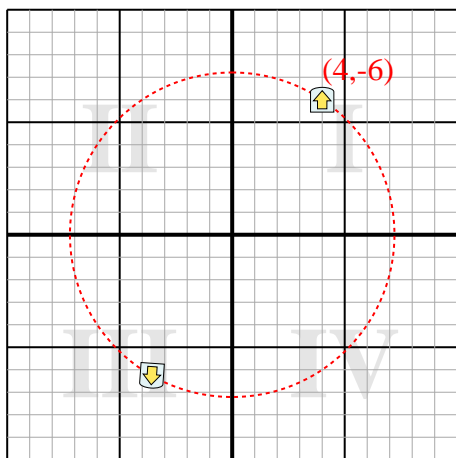
- 1) Rotate the shape -230° around the point (0,0).



- 2) Rotate the shape 149° around the point (0,0).



- 3) Rotate the shape -184° around the point (0,0).



- 4) Rotate the shape 216° around the point (0,0).

