



Use the numberlines to round each number to the nearest 100.

Answers

Ex)

4,410



Ex. 4,400

1)

853



1. _____

2)

783



2. _____

3)

9,697



3. _____

4)

8,980



4. _____

5)

569



5. _____

6)

9,924



6. _____

7)

99,310



7. _____

8)

90,005



8. _____

9)

17,192



9. _____

10)

60,453



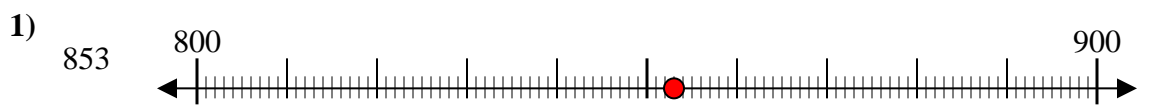
10. _____



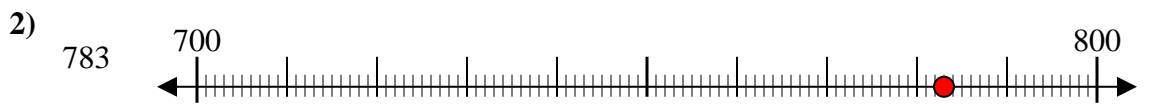
Use the numberlines to round each number to the nearest 100.



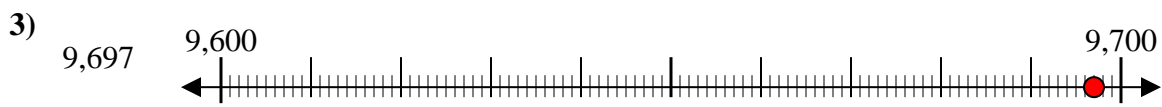
Answers
Ex. 4,400



1. 900



2. 800



3. 9,700



4. 9,000



5. 600



6. 9,900



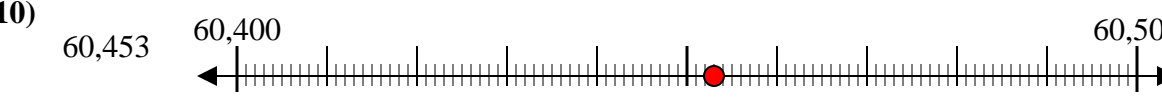
7. 99,300



8. 90,000



9. 17,200



10. 60,500