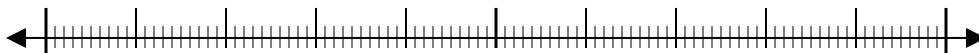




Use the numberlines to round each number to the nearest 100.

Ex)

1,224



Ex. 1,200

1)

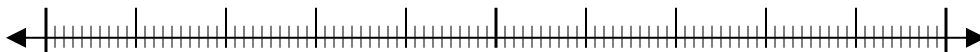
9,937



1. \_\_\_\_\_

2)

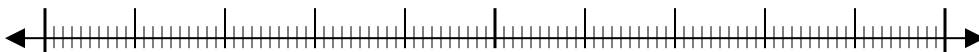
81,895



2. \_\_\_\_\_

3)

791



3. \_\_\_\_\_

4)

3,821



4. \_\_\_\_\_

5)

216



5. \_\_\_\_\_

6)

45,078



6. \_\_\_\_\_

7)

21,436



7. \_\_\_\_\_

8)

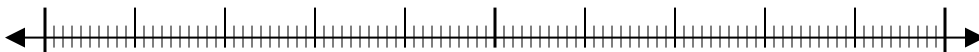
85,063



8. \_\_\_\_\_

9)

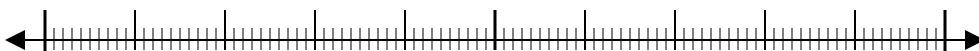
232



9. \_\_\_\_\_

10)

608

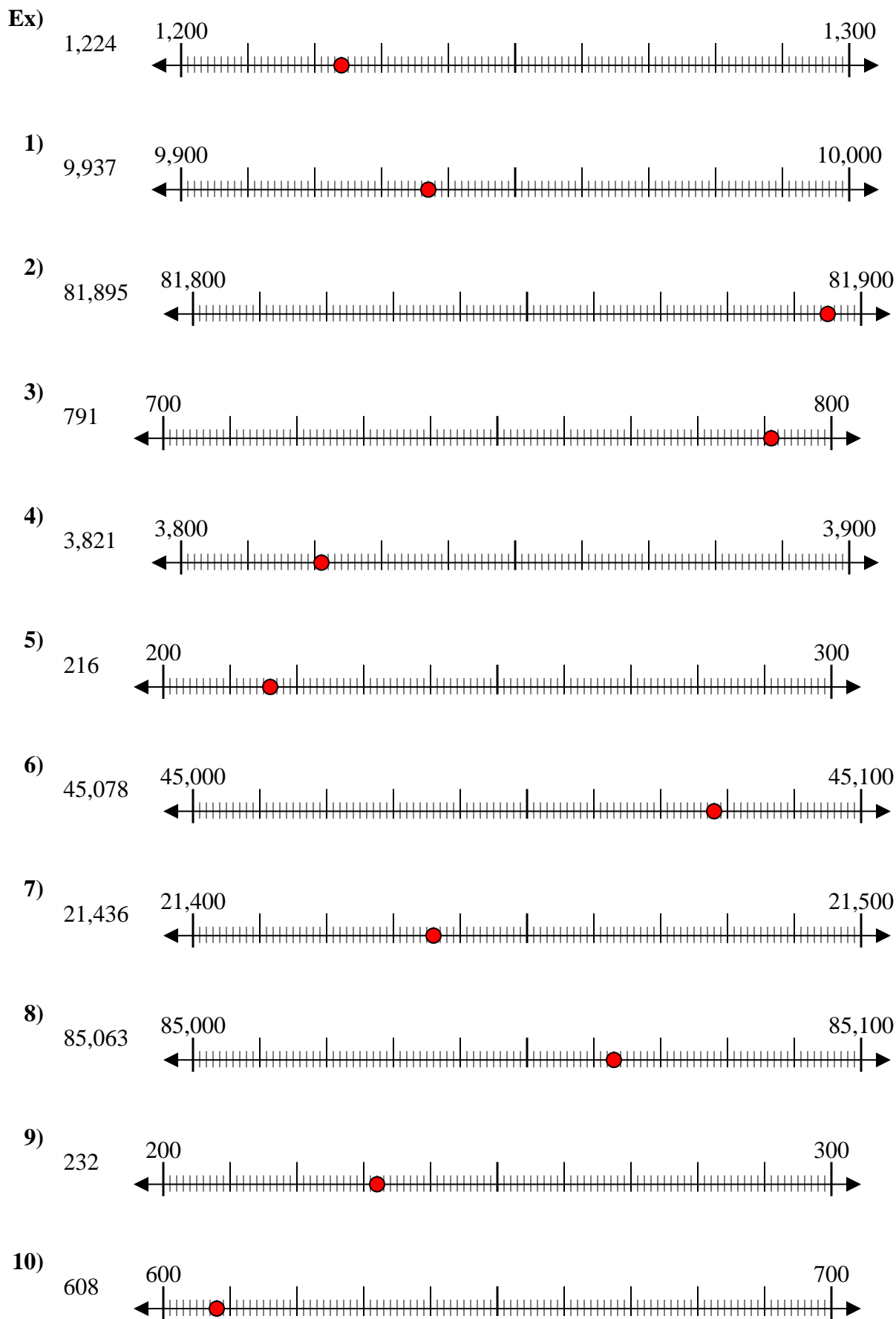


10. \_\_\_\_\_

Answers



Use the numberlines to round each number to the nearest 100.



Answers

Ex. 1,200

1. 9,900

2. 81,900

3. 800

4. 3,800

5. 200

6. 45,100

7. 21,400

8. 85,100

9. 200

10. 600