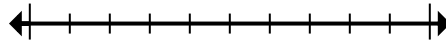


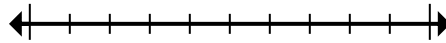
**Mark the location (approximate) on the numberline and then solve.****Answers**

- 1) Round 32,902 to the nearest ten thousand.



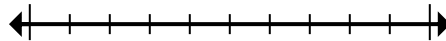
1. \_\_\_\_\_

- 2) Round 39,245 to the nearest hundred.



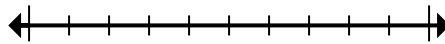
2. \_\_\_\_\_

- 3) Round 819,977 to the nearest hundred thousand.



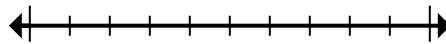
3. \_\_\_\_\_

- 4) Round 6,498,990 to the nearest ten thousand.



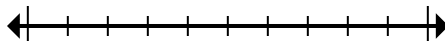
4. \_\_\_\_\_

- 5) Round 77,829 to the nearest thousand.



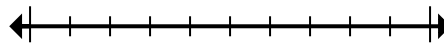
5. \_\_\_\_\_

- 6) Round 4,587 to the nearest thousand.



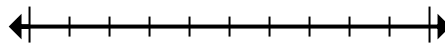
6. \_\_\_\_\_

- 7) Round 11,966,354 to the nearest hundred thousand.



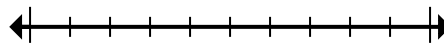
7. \_\_\_\_\_

- 8) Round 121 to the nearest hundred.



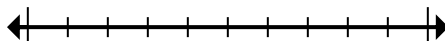
8. \_\_\_\_\_

- 9) Round 30,460,293 to the nearest hundred thousand.



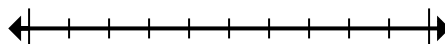
9. \_\_\_\_\_

- 10) Round 3,322 to the nearest thousand.



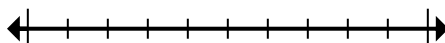
10. \_\_\_\_\_

- 11) Round 4,811,345 to the nearest thousand.



11. \_\_\_\_\_

- 12) Round 7,080 to the nearest hundred.

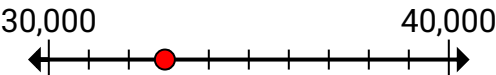
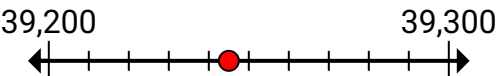
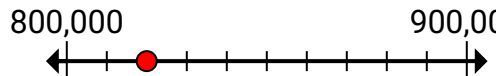
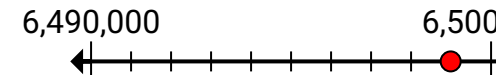
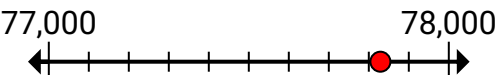
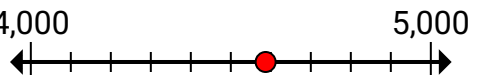
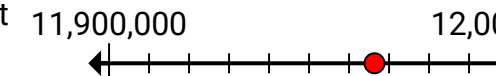
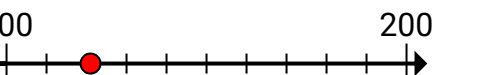
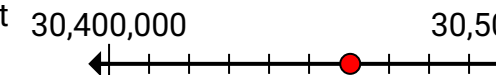
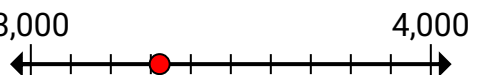
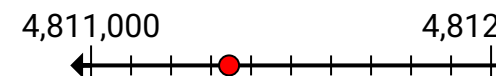
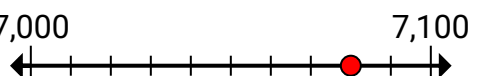


12. \_\_\_\_\_



Mark the location (approximate) on the numberline and then solve.

**Answers**

- 1) Round 32,902 to the nearest ten thousand. 
- 2) Round 39,245 to the nearest hundred. 
- 3) Round 819,977 to the nearest hundred thousand. 
- 4) Round 6,498,990 to the nearest ten thousand. 
- 5) Round 77,829 to the nearest thousand. 
- 6) Round 4,587 to the nearest thousand. 
- 7) Round 11,966,354 to the nearest hundred thousand. 
- 8) Round 121 to the nearest hundred. 
- 9) Round 30,460,293 to the nearest hundred thousand. 
- 10) Round 3,322 to the nearest thousand. 
- 11) Round 4,811,345 to the nearest thousand. 
- 12) Round 7,080 to the nearest hundred. 

1. **30,000**
2. **39,200**
3. **800,000**
4. **6,500,000**
5. **78,000**
6. **5,000**
7. **12,000,000**
8. **100**
9. **30,500,000**
10. **3,000**
11. **4,811,000**
12. **7,100**

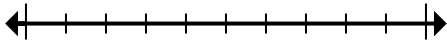


Mark the location (approximate) on the numberline and then solve.

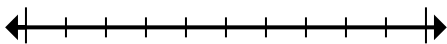
**Answers**

3,000	800,000	7,100	39,200
78,000	6,500,000	30,500,000	30,000
12,000,000	100	4,811,000	5,000

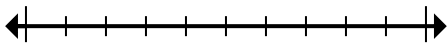
- 1) Round 32,902 to the nearest ten thousand.



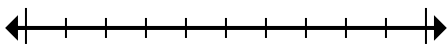
- 2) Round 39,245 to the nearest hundred.



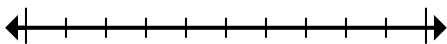
- 3) Round 819,977 to the nearest hundred thousand.



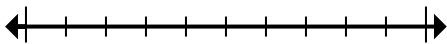
- 4) Round 6,498,990 to the nearest ten thousand.



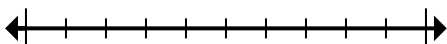
- 5) Round 77,829 to the nearest thousand.



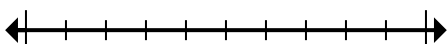
- 6) Round 4,587 to the nearest thousand.



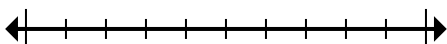
- 7) Round 11,966,354 to the nearest hundred thousand.



- 8) Round 121 to the nearest hundred.



- 9) Round 30,460,293 to the nearest hundred thousand.



- 10) Round 3,322 to the nearest

1. \_\_\_\_\_

2. \_\_\_\_\_

3. \_\_\_\_\_

4. \_\_\_\_\_

5. \_\_\_\_\_

6. \_\_\_\_\_

7. \_\_\_\_\_

8. \_\_\_\_\_

9. \_\_\_\_\_

10. \_\_\_\_\_

11. \_\_\_\_\_

12. \_\_\_\_\_