



Mark the location (approximate) on the numberline and then solve.

Answers

1) Round 828 to the nearest hundred.



1. \_\_\_\_\_

2) Round 9,053 to the nearest thousand.



2. \_\_\_\_\_

3) Round 11,215 to the nearest thousand.



3. \_\_\_\_\_

4) Round 241,077 to the nearest ten thousand.



4. \_\_\_\_\_

5) Round 342,549 to the nearest hundred.



5. \_\_\_\_\_

6) Round 996,949 to the nearest ten thousand.



6. \_\_\_\_\_

7) Round 7,577,963 to the nearest thousand.



7. \_\_\_\_\_

8) Round 17,487 to the nearest ten thousand.



8. \_\_\_\_\_

9) Round 7,921,410 to the nearest hundred thousand.



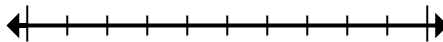
9. \_\_\_\_\_

10) Round 153,244 to the nearest hundred thousand.



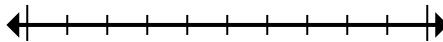
10. \_\_\_\_\_

11) Round 308,648 to the nearest hundred thousand.



11. \_\_\_\_\_

12) Round 673 to the nearest hundred.



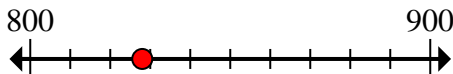
12. \_\_\_\_\_



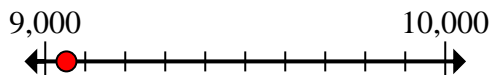
Mark the location (approximate) on the numberline and then solve.

Answers

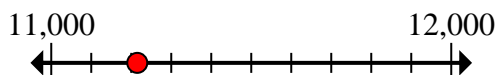
- 1) Round 828 to the nearest hundred.

1. 800

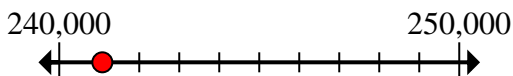
- 2) Round 9,053 to the nearest thousand.

2. 9,000

- 3) Round 11,215 to the nearest thousand.

3. 11,000

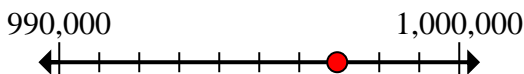
- 4) Round 241,077 to the nearest ten thousand.

4. 240,000

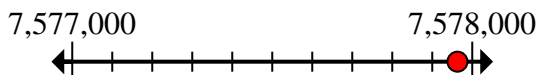
- 5) Round 342,549 to the nearest hundred.

5. 342,500

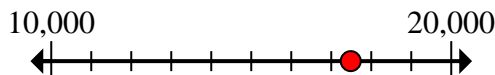
- 6) Round 996,949 to the nearest ten thousand.

6. 1,000,000

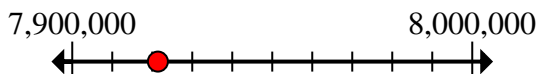
- 7) Round 7,577,963 to the nearest thousand.

7. 7,578,000

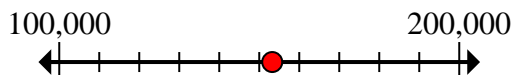
- 8) Round 17,487 to the nearest ten thousand.

8. 20,000

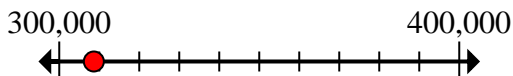
- 9) Round 7,921,410 to the nearest hundred thousand.

9. 7,900,000

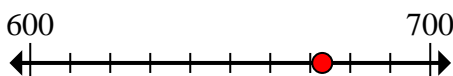
- 10) Round 153,244 to the nearest hundred thousand.

10. 200,000

- 11) Round 308,648 to the nearest hundred thousand.

11. 300,000

- 12) Round 673 to the nearest hundred.

12. 700

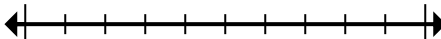


Mark the location (approximate) on the numberline and then solve.

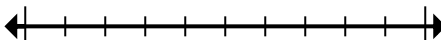
**Answers**

342,500	1,000,000	11,000	9,000
240,000	700	200,000	300,000
20,000	7,900,000	7,578,000	800

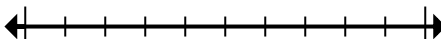
1) Round 828 to the nearest hundred.



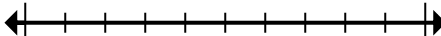
2) Round 9,053 to the nearest thousand.



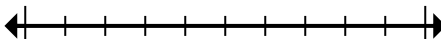
3) Round 11,215 to the nearest thousand.



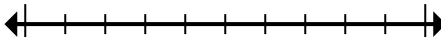
4) Round 241,077 to the nearest ten thousand.



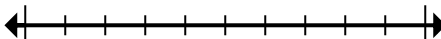
5) Round 342,549 to the nearest hundred.



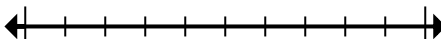
6) Round 996,949 to the nearest ten thousand.



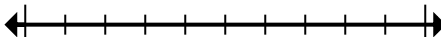
7) Round 7,577,963 to the nearest thousand.



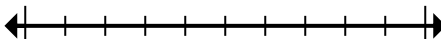
8) Round 17,487 to the nearest ten thousand.



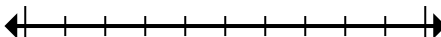
9) Round 7,921,410 to the nearest hundred thousand.



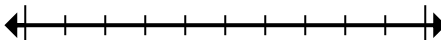
10) Round 153,244 to the nearest hundred thousand.



11) Round 308,648 to the nearest hundred thousand.



12) Round 673 to the nearest hundred.



1. \_\_\_\_\_
2. \_\_\_\_\_
3. \_\_\_\_\_
4. \_\_\_\_\_
5. \_\_\_\_\_
6. \_\_\_\_\_
7. \_\_\_\_\_
8. \_\_\_\_\_
9. \_\_\_\_\_
10. \_\_\_\_\_
11. \_\_\_\_\_
12. \_\_\_\_\_