



Mark the location (approximate) on the numberline and then solve.

Answers

1) Round 52,817 to the nearest ten thousand.



1. \_\_\_\_\_

2) Round 820,860 to the nearest hundred.



2. \_\_\_\_\_

3) Round 666,641 to the nearest ten thousand.



3. \_\_\_\_\_

4) Round 9,506 to the nearest thousand.



4. \_\_\_\_\_

5) Round 453,975 to the nearest hundred thousand.



5. \_\_\_\_\_

6) Round 534,644 to the nearest hundred thousand.



6. \_\_\_\_\_

7) Round 40,673,282 to the nearest hundred thousand.



7. \_\_\_\_\_

8) Round 126,324 to the nearest ten thousand.



8. \_\_\_\_\_

9) Round 950 to the nearest hundred.



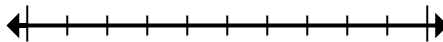
9. \_\_\_\_\_

10) Round 728,779 to the nearest thousand.



10. \_\_\_\_\_

11) Round 82,189 to the nearest ten thousand.



11. \_\_\_\_\_

12) Round 681,152 to the nearest thousand.

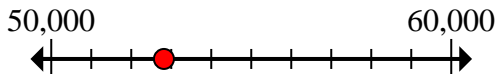


12. \_\_\_\_\_

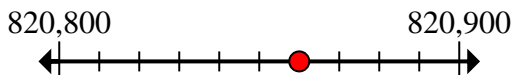


Mark the location (approximate) on the numberline and then solve.

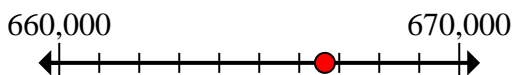
- 1) Round 52,817 to the nearest ten thousand.



- 2) Round 820,860 to the nearest hundred.



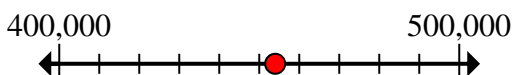
- 3) Round 666,641 to the nearest ten thousand.



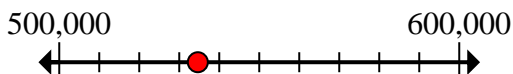
- 4) Round 9,506 to the nearest thousand.



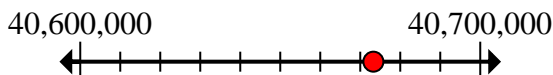
- 5) Round 453,975 to the nearest hundred thousand.



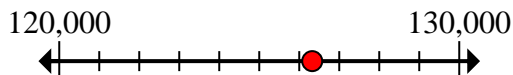
- 6) Round 534,644 to the nearest hundred thousand.



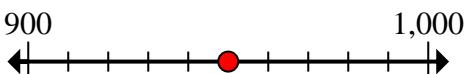
- 7) Round 40,673,282 to the nearest hundred thousand.



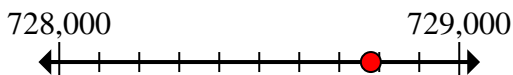
- 8) Round 126,324 to the nearest ten thousand.



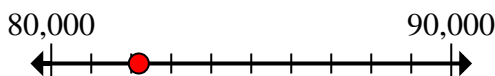
- 9) Round 950 to the nearest hundred.



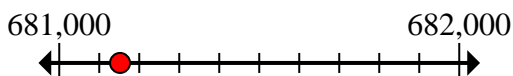
- 10) Round 728,779 to the nearest thousand.



- 11) Round 82,189 to the nearest ten thousand.



- 12) Round 681,152 to the nearest thousand.

**Answers**1. 50,0002. 820,9003. 670,0004. 10,0005. 500,0006. 500,0007. 40,700,0008. 130,0009. 1,00010. 729,00011. 80,00012. 681,000



Mark the location (approximate) on the numberline and then solve.

**Answers**

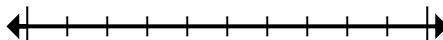
670,000	80,000	681,000	729,000
500,000	130,000	50,000	10,000
40,700,000	500,000	1,000	820,900

1) Round 52,817 to the nearest ten thousand.



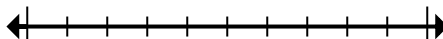
1. \_\_\_\_\_

2) Round 820,860 to the nearest hundred.



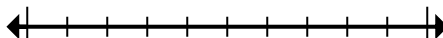
2. \_\_\_\_\_

3) Round 666,641 to the nearest ten thousand.



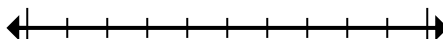
3. \_\_\_\_\_

4) Round 9,506 to the nearest thousand.



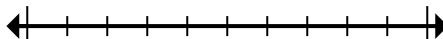
4. \_\_\_\_\_

5) Round 453,975 to the nearest hundred thousand.



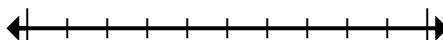
5. \_\_\_\_\_

6) Round 534,644 to the nearest hundred thousand.



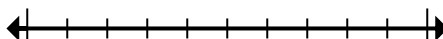
6. \_\_\_\_\_

7) Round 40,673,282 to the nearest hundred thousand.



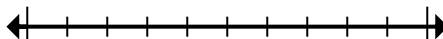
7. \_\_\_\_\_

8) Round 126,324 to the nearest ten thousand.



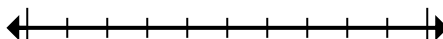
8. \_\_\_\_\_

9) Round 950 to the nearest hundred.



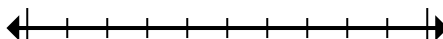
9. \_\_\_\_\_

10) Round 728,779 to the nearest thousand.



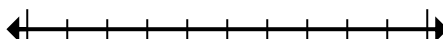
10. \_\_\_\_\_

11) Round 82,189 to the nearest ten thousand.



11. \_\_\_\_\_

12) Round 681,152 to the nearest thousand.



12. \_\_\_\_\_