



Mark the location (approximate) on the numberline and then solve.

Answers

1) Round 1,491 to the nearest thousand.



1. \_\_\_\_\_

2) Round 867,315 to the nearest hundred.



2. \_\_\_\_\_

3) Round 524 to the nearest hundred.



3. \_\_\_\_\_

4) Round 698 to the nearest hundred.



4. \_\_\_\_\_

5) Round 4,646,919 to the nearest hundred.



5. \_\_\_\_\_

6) Round 6,630,803 to the nearest thousand.



6. \_\_\_\_\_

7) Round 4,407,993 to the nearest hundred thousand.



7. \_\_\_\_\_

8) Round 83,368 to the nearest ten thousand.



8. \_\_\_\_\_

9) Round 5,665,526 to the nearest ten thousand.



9. \_\_\_\_\_

10) Round 1,299 to the nearest thousand.



10. \_\_\_\_\_

11) Round 448,098 to the nearest hundred thousand.



11. \_\_\_\_\_

12) Round 178,876 to the nearest ten thousand.

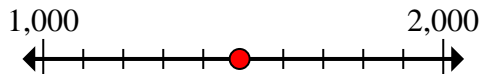


12. \_\_\_\_\_

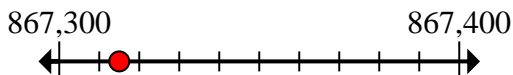


Mark the location (approximate) on the numberline and then solve.

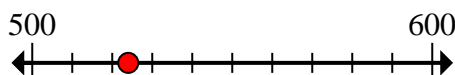
- 1) Round 1,491 to the nearest thousand.



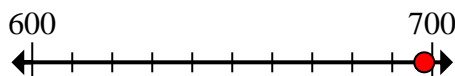
- 2) Round 867,315 to the nearest hundred.



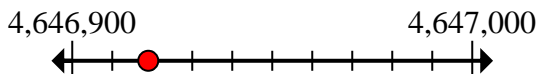
- 3) Round 524 to the nearest hundred.



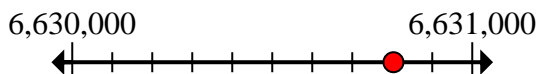
- 4) Round 698 to the nearest hundred.



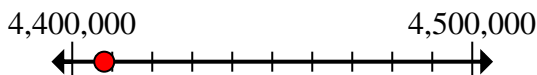
- 5) Round 4,646,919 to the nearest hundred.



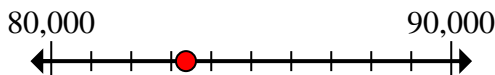
- 6) Round 6,630,803 to the nearest thousand.



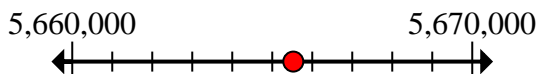
- 7) Round 4,407,993 to the nearest hundred thousand.



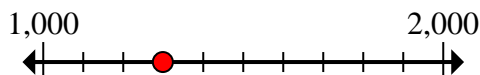
- 8) Round 83,368 to the nearest ten thousand.



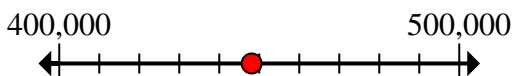
- 9) Round 5,665,526 to the nearest ten thousand.



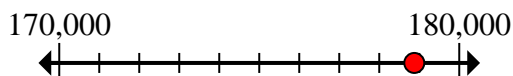
- 10) Round 1,299 to the nearest thousand.



- 11) Round 448,098 to the nearest hundred thousand.



- 12) Round 178,876 to the nearest ten thousand.

**Answers**1. 1,0002. 867,3003. 5004. 7005. 4,646,9006. 6,631,0007. 4,400,0008. 80,0009. 5,670,00010. 1,00011. 400,00012. 180,000



Mark the location (approximate) on the numberline and then solve.

## Answers

867,300

500

4,400,000

80,000

1,000

4,646,900

700

400,000

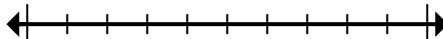
180,000

1,000

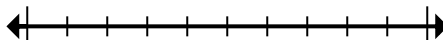
5,670,000

6,631,000

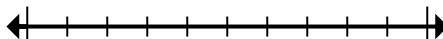
- 1) Round 1,491 to the nearest thousand.



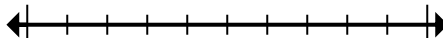
- 2) Round 867,315 to the nearest hundred.



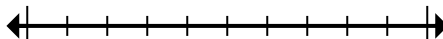
- 3) Round 524 to the nearest hundred.



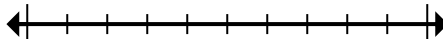
- 4) Round 698 to the nearest hundred.



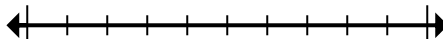
- 5) Round 4,646,919 to the nearest hundred.



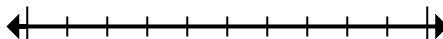
- 6) Round 6,630,803 to the nearest thousand.



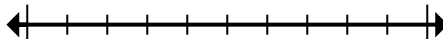
- 7) Round 4,407,993 to the nearest hundred thousand.



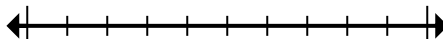
- 8) Round 83,368 to the nearest ten thousand.



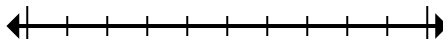
- 9) Round 5,665,526 to the nearest ten thousand.



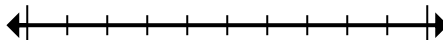
- 10) Round 1,299 to the nearest thousand.



- 11) Round 448,098 to the nearest hundred thousand.



- 12) Round 178,876 to the nearest ten thousand.



1. \_\_\_\_\_
2. \_\_\_\_\_
3. \_\_\_\_\_
4. \_\_\_\_\_
5. \_\_\_\_\_
6. \_\_\_\_\_
7. \_\_\_\_\_
8. \_\_\_\_\_
9. \_\_\_\_\_
10. \_\_\_\_\_
11. \_\_\_\_\_
12. \_\_\_\_\_