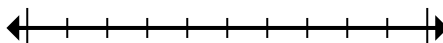




Mark the location (approximate) on the numberline and then solve.

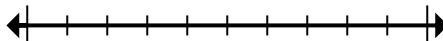
Answers

- 1) Round 649,213 to the nearest hundred thousand.



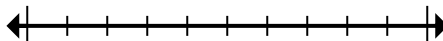
1. _____

- 2) Round 31,119 to the nearest ten thousand.



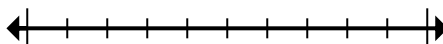
2. _____

- 3) Round 734 to the nearest hundred.



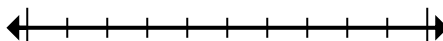
3. _____

- 4) Round 7,594 to the nearest hundred.



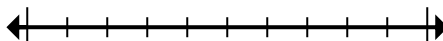
4. _____

- 5) Round 2,251,569 to the nearest hundred thousand.



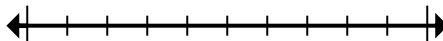
5. _____

- 6) Round 60,223 to the nearest thousand.



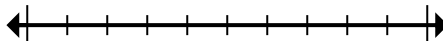
6. _____

- 7) Round 5,927 to the nearest thousand.



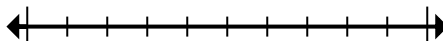
7. _____

- 8) Round 935 to the nearest hundred.



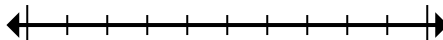
8. _____

- 9) Round 4,433,074 to the nearest ten thousand.



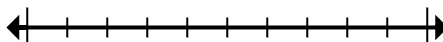
9. _____

- 10) Round 11,152 to the nearest hundred.



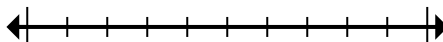
10. _____

- 11) Round 2,753,773 to the nearest ten thousand.



11. _____

- 12) Round 365,858 to the nearest hundred thousand.



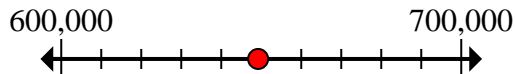
12. _____



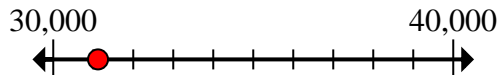
Mark the location (approximate) on the numberline and then solve.

Answers

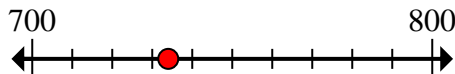
- 1) Round 649,213 to the nearest hundred thousand.

1. **600,000**

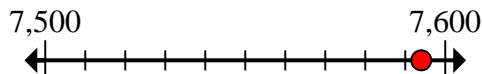
- 2) Round 31,119 to the nearest ten thousand.

2. **30,000**

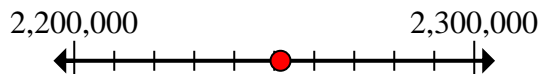
- 3) Round 734 to the nearest hundred.

3. **700**

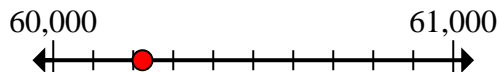
- 4) Round 7,594 to the nearest hundred.

4. **7,600**

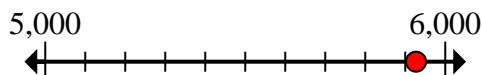
- 5) Round 2,251,569 to the nearest hundred thousand.

5. **2,300,000**

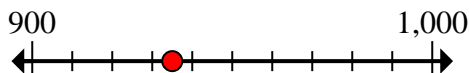
- 6) Round 60,223 to the nearest thousand.

6. **60,000**

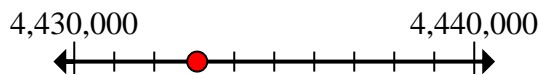
- 7) Round 5,927 to the nearest thousand.

7. **6,000**

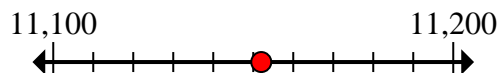
- 8) Round 935 to the nearest hundred.

8. **900**

- 9) Round 4,433,074 to the nearest ten thousand.

9. **4,430,000**

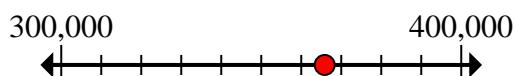
- 10) Round 11,152 to the nearest hundred.

10. **11,200**

- 11) Round 2,753,773 to the nearest ten thousand.

11. **2,750,000**

- 12) Round 365,858 to the nearest hundred thousand.

12. **400,000**



Mark the location (approximate) on the numberline and then solve.

Answers

60,000

2,750,000

600,000

700

30,000

4,430,000

2,300,000

900

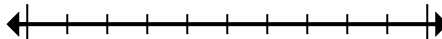
6,000

11,200

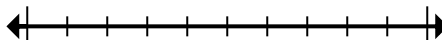
400,000

7,600

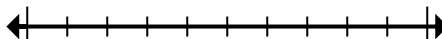
- 1) Round 649,213 to the nearest hundred thousand.



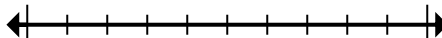
- 2) Round 31,119 to the nearest ten thousand.



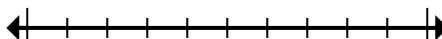
- 3) Round 734 to the nearest hundred.



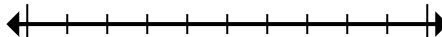
- 4) Round 7,594 to the nearest hundred.



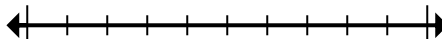
- 5) Round 2,251,569 to the nearest hundred thousand.



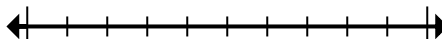
- 6) Round 60,223 to the nearest thousand.



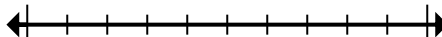
- 7) Round 5,927 to the nearest thousand.



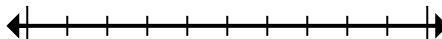
- 8) Round 935 to the nearest hundred.



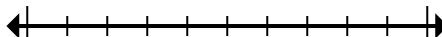
- 9) Round 4,433,074 to the nearest ten thousand.



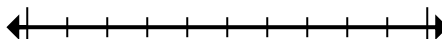
- 10) Round 11,152 to the nearest hundred.



- 11) Round 2,753,773 to the nearest ten thousand.



- 12) Round 365,858 to the nearest hundred thousand.



1. _____
2. _____
3. _____
4. _____
5. _____
6. _____
7. _____
8. _____
9. _____
10. _____
11. _____
12. _____