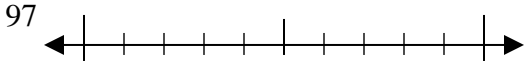




Use the numberlines to round each number to the nearest 10.

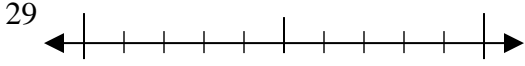
Answers

Ex)



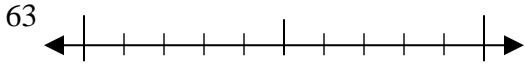
Ex. 100

1)



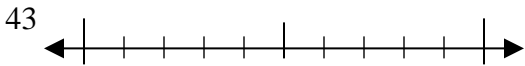
1. \_\_\_\_\_

2)



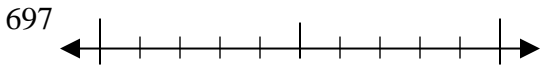
2. \_\_\_\_\_

3)



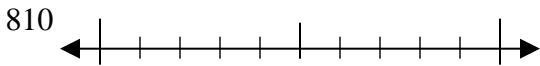
3. \_\_\_\_\_

4)



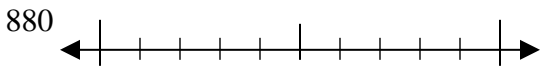
4. \_\_\_\_\_

5)



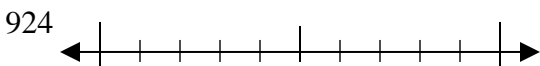
5. \_\_\_\_\_

6)



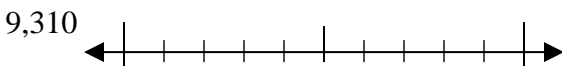
6. \_\_\_\_\_

7)



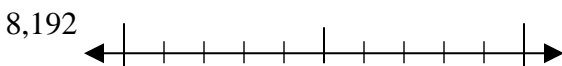
7. \_\_\_\_\_

8)



8. \_\_\_\_\_

9)

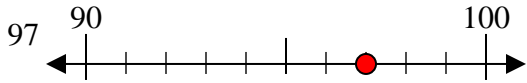


9. \_\_\_\_\_



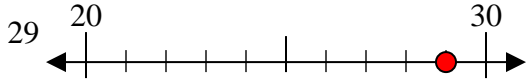
Use the numberlines to round each number to the nearest 10.

Ex)



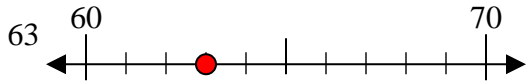
Ex. 100

1)



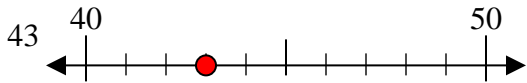
1. 30

2)



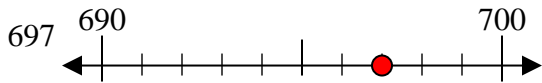
2. 60

3)



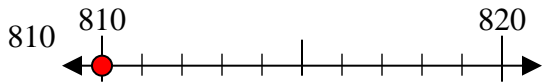
3. 40

4)



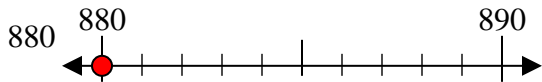
4. 700

5)



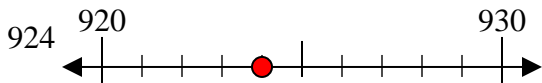
5. 810

6)



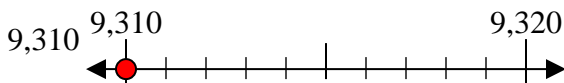
6. 880

7)



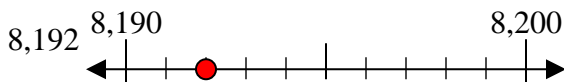
7. 920

8)



8. 9310

9)



9. 8190

Answers

Ex. 100

1. 30

2. 60

3. 40

4. 700

5. 810

6. 880

7. 920

8. 9310

9. 8190