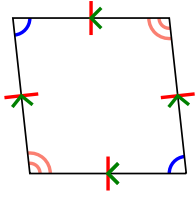




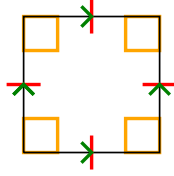
Determine if the shape shown is a Quadrilateral, Kite, Trapezoid, Parallelogram, Rhombus, Rectangle or Square (can be more than one).

Answers

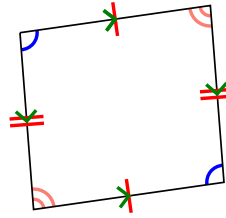
1)



2)



3)



1. \_\_\_\_\_


2. \_\_\_\_\_

3. \_\_\_\_\_

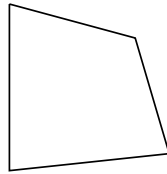
4. \_\_\_\_\_

5. \_\_\_\_\_

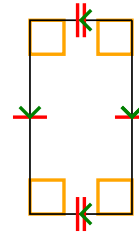
4)



5)



6)



6. \_\_\_\_\_

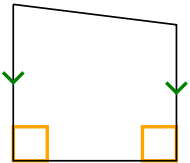
7. \_\_\_\_\_

8. \_\_\_\_\_

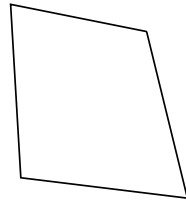
9. \_\_\_\_\_

10. \_\_\_\_\_

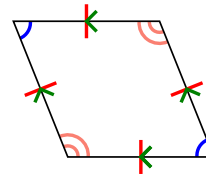
7)



8)



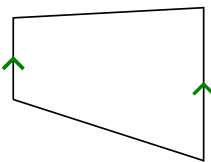
9)



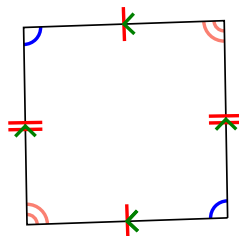
11. \_\_\_\_\_

12. \_\_\_\_\_

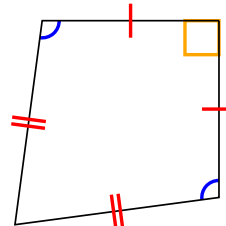
10)



11)



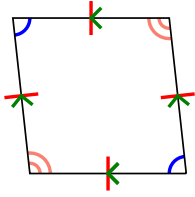
12)



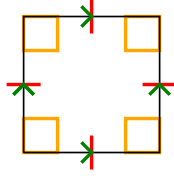


Determine if the shape shown is a Quadrilateral, Kite, Trapezoid, Parallelogram, Rhombus, Rectangle or Square (can be more than one).

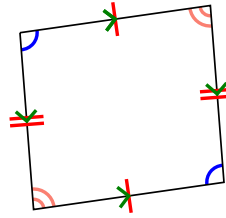
1)



2)



3)



1. Q,P,H


2. Q,P,H,R,S

3. Q,P

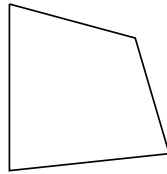
4. Q

5. Q

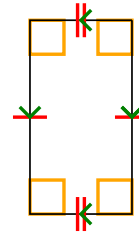
4)



5)



6)

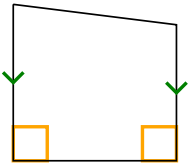


6. Q,P,R

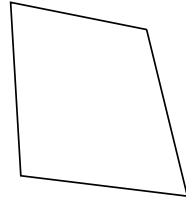
7. Q,T

8. Q

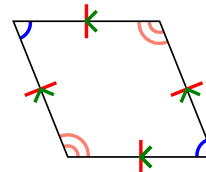
7)



8)



9)

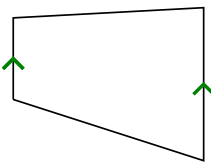


9. Q,P,H

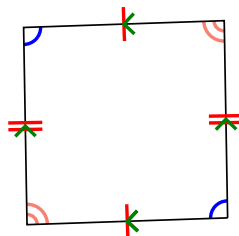
10. Q,T

11. Q,P

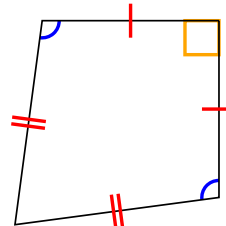
10)



11)



12)



12. Q,K