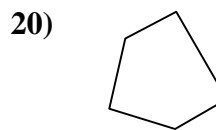
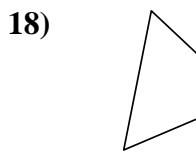
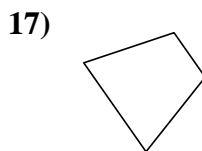
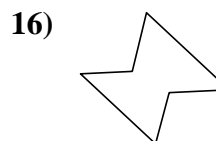
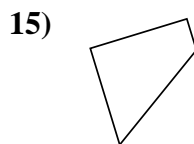
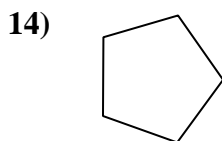

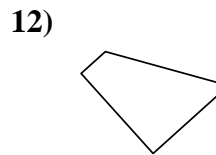
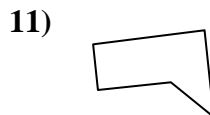
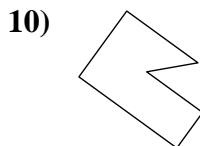
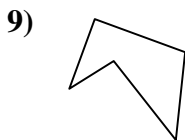
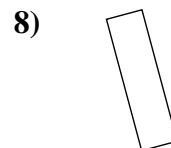
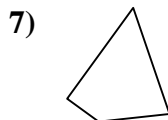
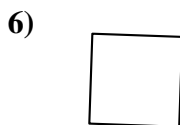
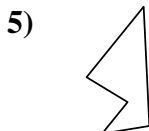
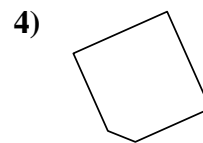
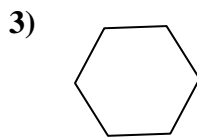
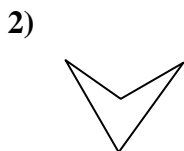
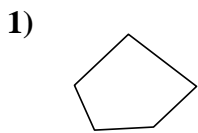




Determine if the shape shown is a quadrilateral (yes) or not (no).

Answers

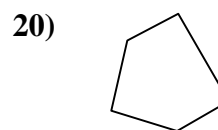
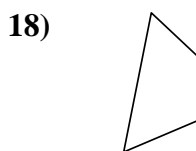
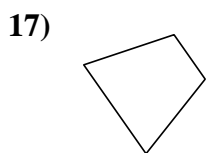
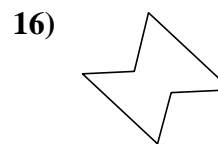
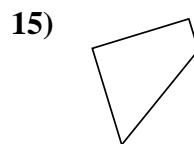
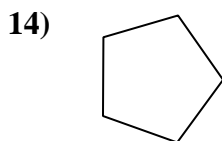

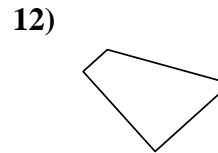
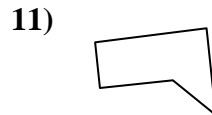
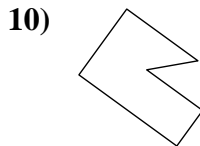
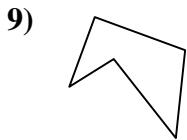
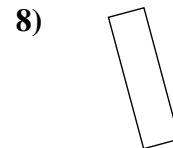
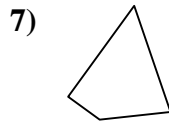
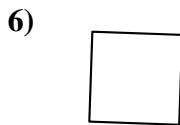
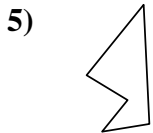
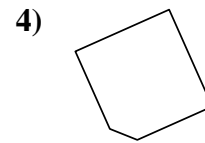
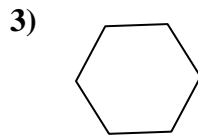
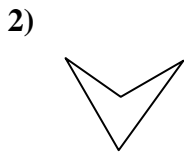
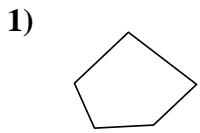


- 1. _____
- 2. _____
- 3. _____
- 4. _____
- 5. _____
- 6. _____
- 7. _____
- 8. _____
- 9. _____
- 10. _____
- 11. _____
- 12. _____
- 13. _____
- 14. _____
- 15. _____
- 16. _____
- 17. _____
- 18. _____
- 19. _____
- 20. _____



Determine if the shape shown is a quadrilateral (yes) or not (no).

Answers



- 1. no
- 2. yes
- 3. no
- 4. no
- 5. no
- 6. yes
- 7. yes
- 8. yes
- 9. no
- 10. no
- 11. no
- 12. yes
- 13. yes
- 14. no
- 15. yes
- 16. no
- 17. yes
- 18. yes
- 19. yes
- 20. no