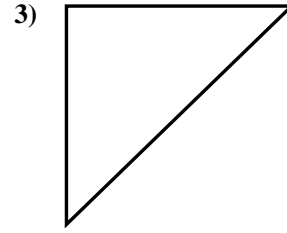
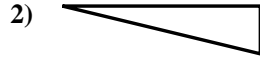
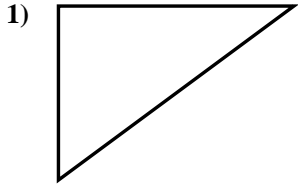


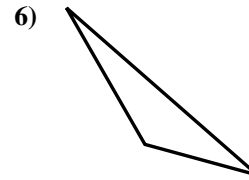
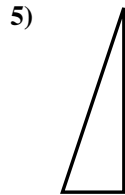
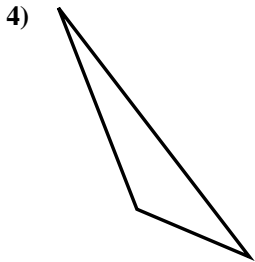


Determine if the triangle shown is a right triangle (yes) or not (no).

Answers



1. \_\_\_\_\_



2. \_\_\_\_\_

3. \_\_\_\_\_

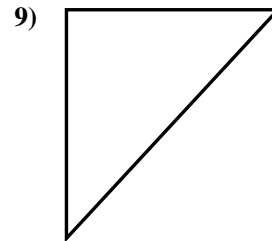
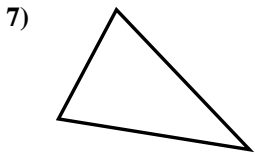
4. \_\_\_\_\_

5. \_\_\_\_\_

6. \_\_\_\_\_

7. \_\_\_\_\_

8. \_\_\_\_\_

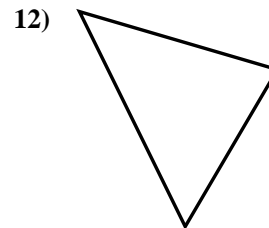
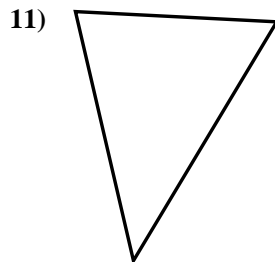
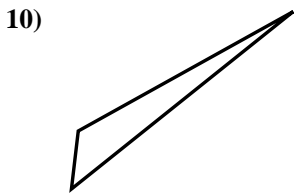


9. \_\_\_\_\_

10. \_\_\_\_\_

11. \_\_\_\_\_

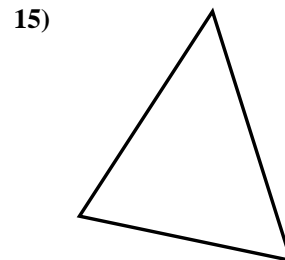
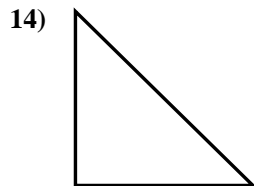
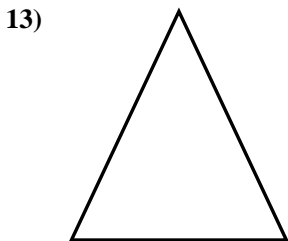
12. \_\_\_\_\_



13. \_\_\_\_\_

14. \_\_\_\_\_

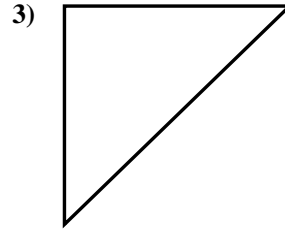
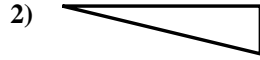
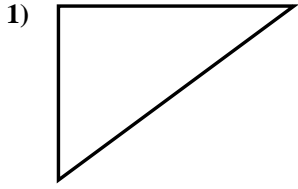
15. \_\_\_\_\_





Determine if the triangle shown is a right triangle (yes) or not (no).

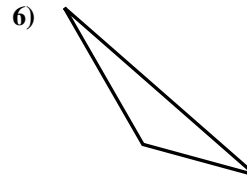
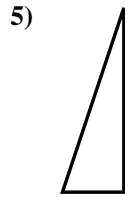
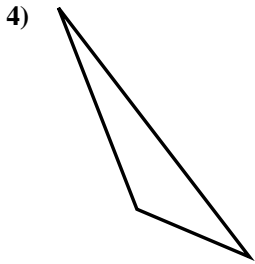
Answers



1. yes

2. yes

3. yes



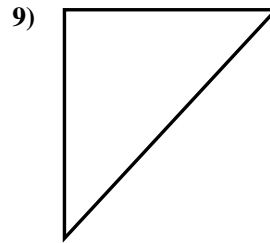
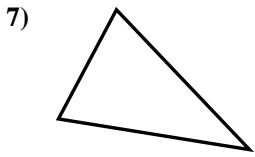
4. no

5. yes

6. no

7. no

8. yes

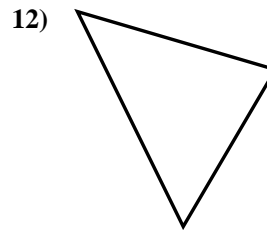
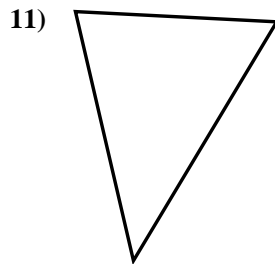
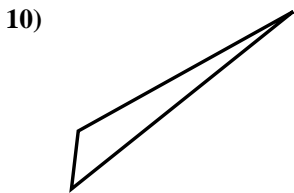


9. yes

10. no

11. no

12. no



13. no

14. yes

15. no

