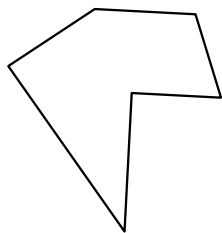





Identify the type of shape shown.

Answers

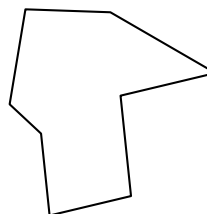
1)



2)

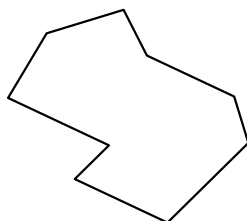


3)

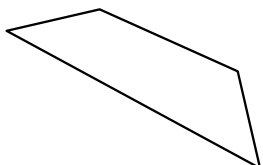


1. \_\_\_\_\_

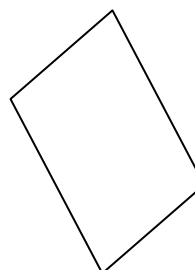
4)



5)



6)



2. \_\_\_\_\_


3. \_\_\_\_\_

4. \_\_\_\_\_

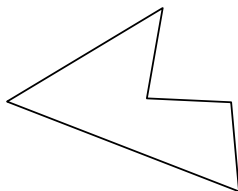
5. \_\_\_\_\_

6. \_\_\_\_\_


7)



8)



9)



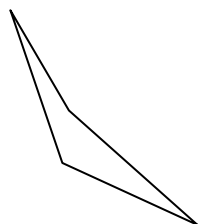
7. \_\_\_\_\_

8. \_\_\_\_\_

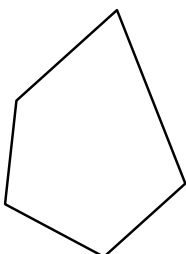
9. \_\_\_\_\_

10. \_\_\_\_\_

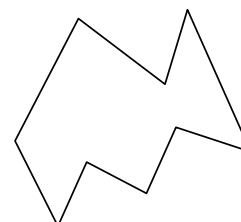
10)



11)



12)



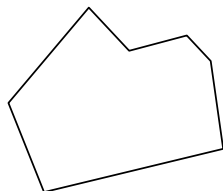
11. \_\_\_\_\_

12. \_\_\_\_\_

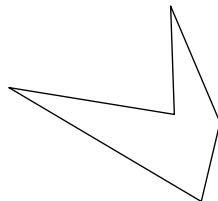
13. \_\_\_\_\_

14. \_\_\_\_\_

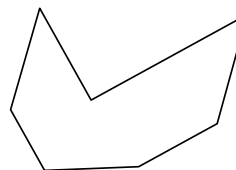
13)



14)



15)

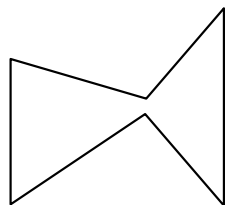


15. \_\_\_\_\_

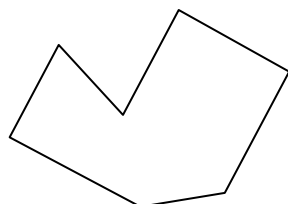
16. \_\_\_\_\_

17. \_\_\_\_\_

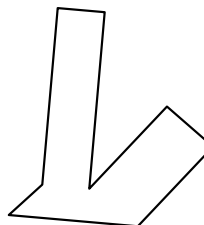
16)



17)



18)



18. \_\_\_\_\_

19. \_\_\_\_\_

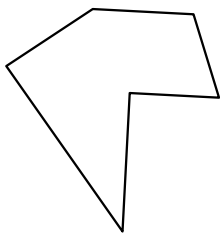
20. \_\_\_\_\_

21. \_\_\_\_\_




Identify the type of shape shown.

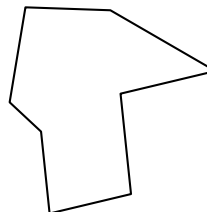
1)



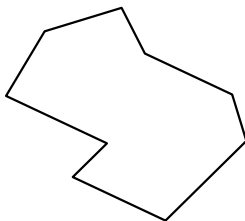
2)



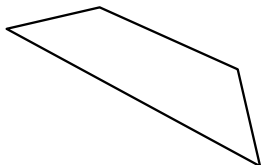
3)



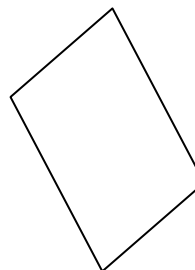
4)



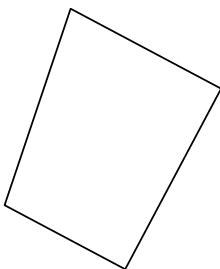
5)



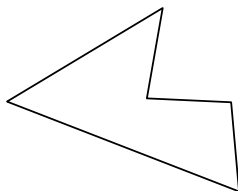
6)




7)



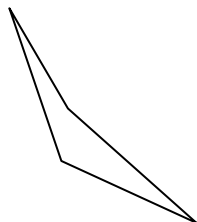
8)



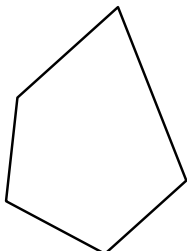
9)



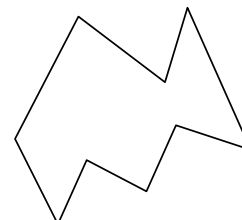
10)



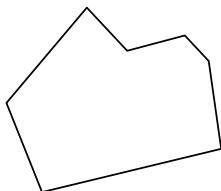
11)



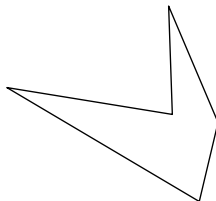
12)



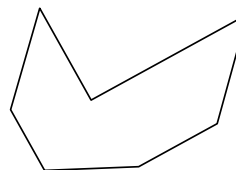
13)




14)



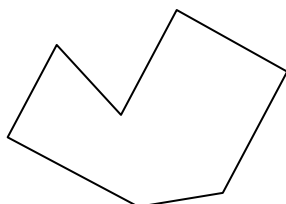
15)



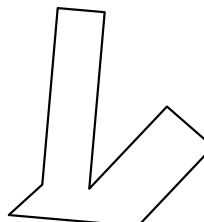
16)



17)



18)



Answers

1. hexagon

2. nonagon

3. octagon

4. nonagon

5. quadrilateral

6. quadrilateral

7. quadrilateral

8. pentagon

9. heptagon

10. quadrilateral

11. pentagon

12. nonagon

13. heptagon

14. pentagon

15. heptagon

16. hexagon

17. heptagon

18. octagon

19. octagon

20. heptagon

21. octagon