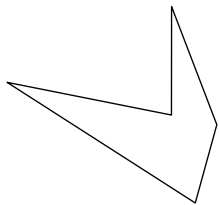


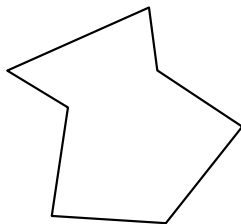


Identify the type of shape shown.


1)



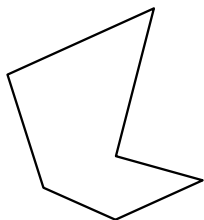
2)



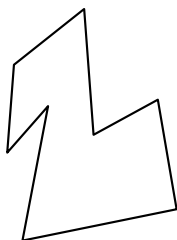
3)



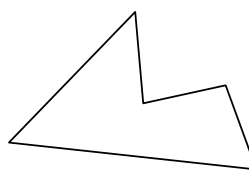
4)



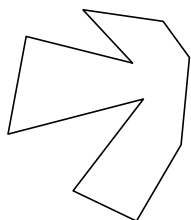
5)



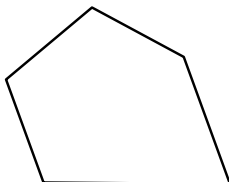
6)



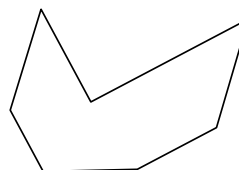
7)



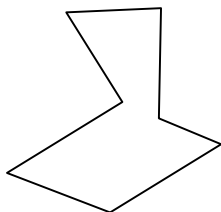
8)




9)



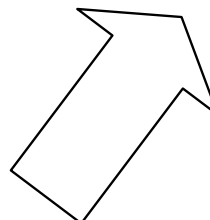
10)



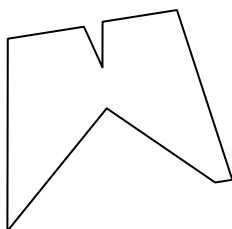
11)



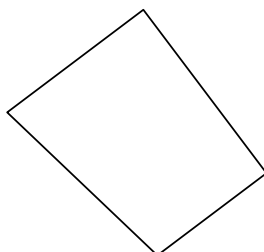
12)



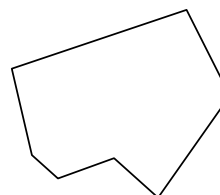
13)



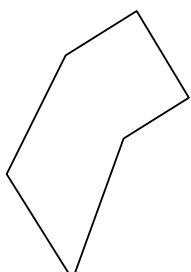
14)



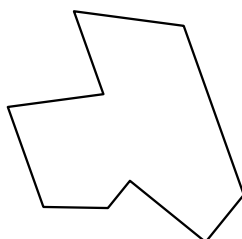
15)



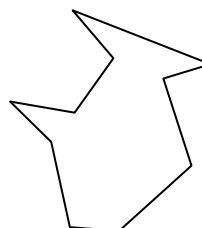
16)



17)



18)



Answers

1. \_\_\_\_\_

2. \_\_\_\_\_

3. \_\_\_\_\_

4. \_\_\_\_\_

5. \_\_\_\_\_

6. \_\_\_\_\_

7. \_\_\_\_\_

8. \_\_\_\_\_

9. \_\_\_\_\_

10. \_\_\_\_\_

11. \_\_\_\_\_

12. \_\_\_\_\_

13. \_\_\_\_\_

14. \_\_\_\_\_

15. \_\_\_\_\_

16. \_\_\_\_\_

17. \_\_\_\_\_

18. \_\_\_\_\_

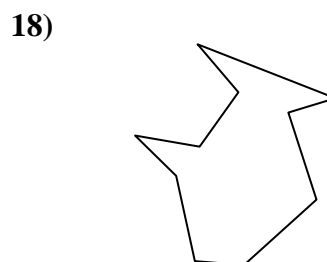
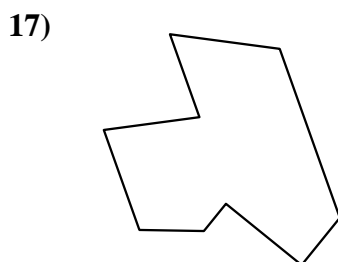
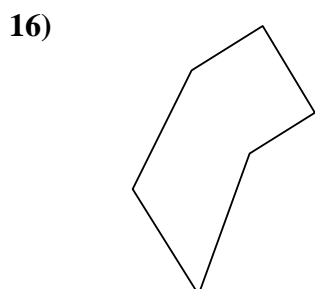
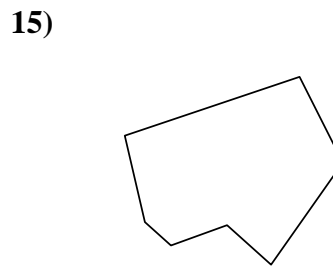
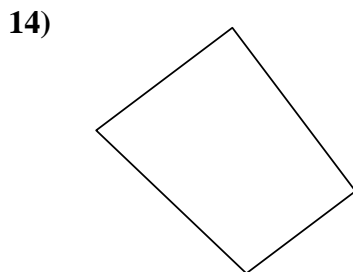
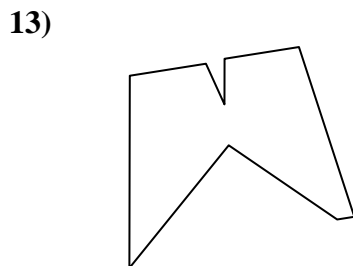
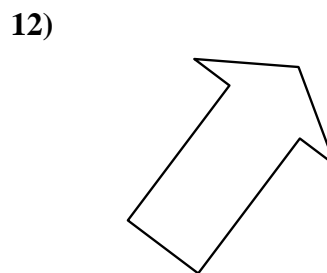
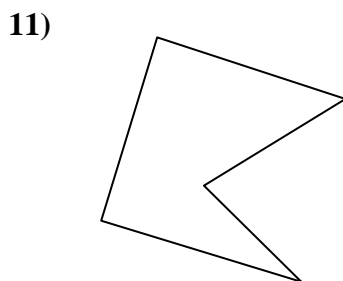
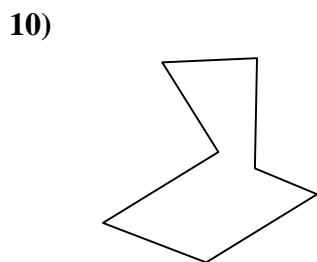

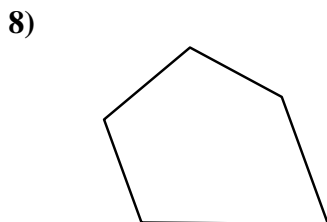
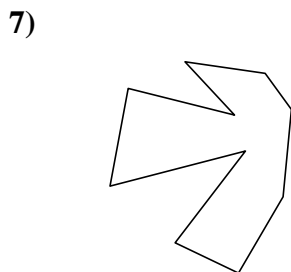
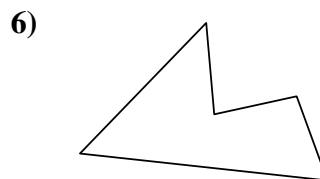
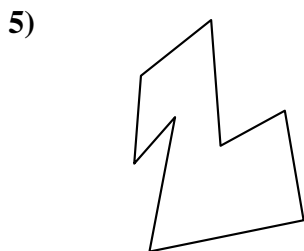
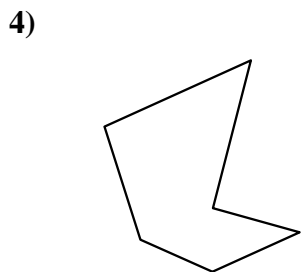
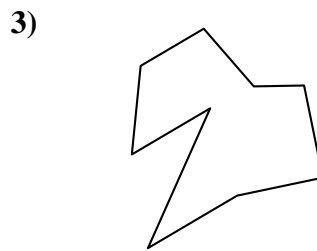

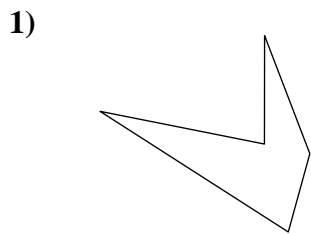
19. \_\_\_\_\_

20. \_\_\_\_\_

21. \_\_\_\_\_



Identify the type of shape shown.



Answers

1. pentagon

2. heptagon

3. nonagon

4. hexagon

5. octagon

6. pentagon

7. decagon

8. pentagon

9. heptagon

10. heptagon

11. pentagon

12. heptagon

13. nonagon

14. quadrilateral

15. heptagon

16. hexagon

17. nonagon

18. decagon

19. nonagon

20. hexagon

21. octagon