



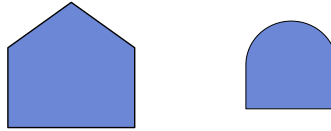
Determine if the shapes shown are 'similar', 'congruent' or 'neither'.

Answers

1)



2)



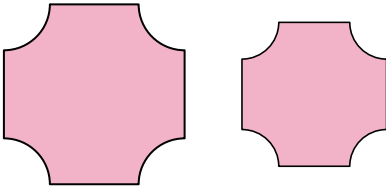
3)



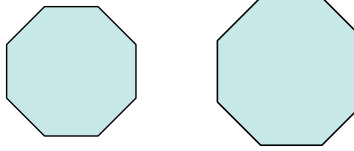
4)




5)



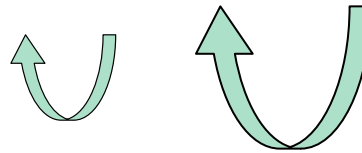
6)



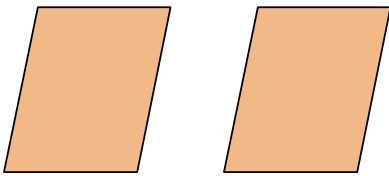
7)



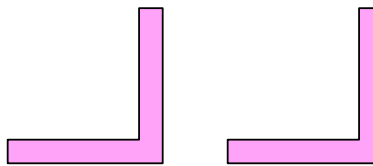
8)




9)




10)



11)



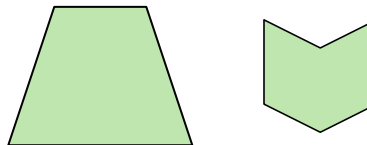
12)



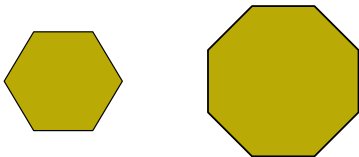
13)



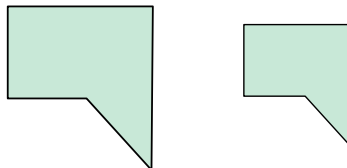
14)



15)



16)



1. _____
2. _____
3. _____
4. _____
5. _____
6. _____
7. _____
8. _____
9. _____
10. _____
11. _____
12. _____
13. _____
14. _____
15. _____
16. _____

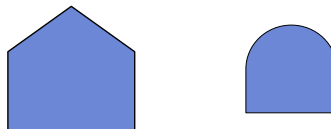


Determine if the shapes shown are 'similar', 'congruent' or 'neither'.

1)



2)



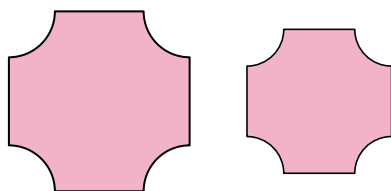
3)



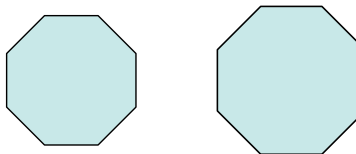
4)




5)



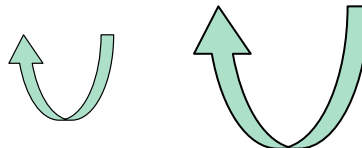
6)



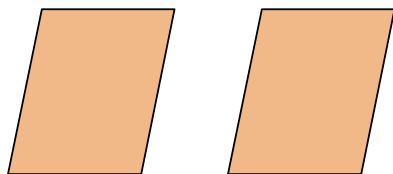
7)



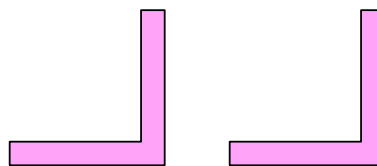
8)



9)



10)



11)



12)



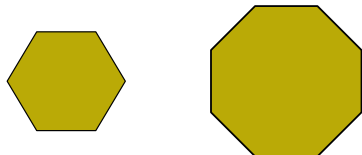
13)



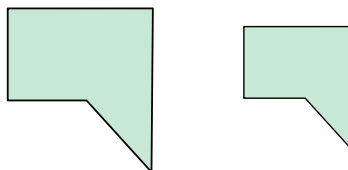
14)



15)



16)



Answers

1. congruent

2. neither

3. congruent

4. similar

5. similar

6. similar

7. similar

8. similar

9. congruent

10. congruent

11. congruent

12. neither

13. congruent

14. neither

15. neither

16. similar