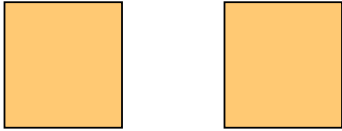




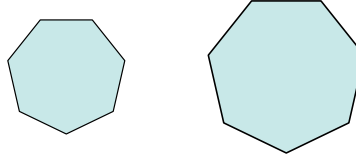
Determine if the shapes shown are 'similar', 'congruent' or 'neither'.

Answers

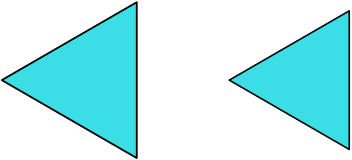
1)



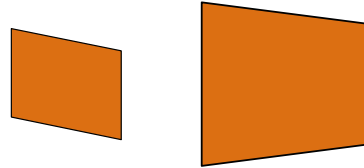
2)



3)



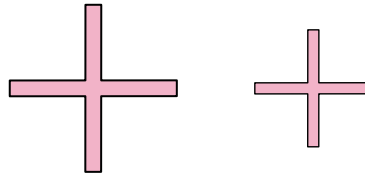
4)




5)



6)



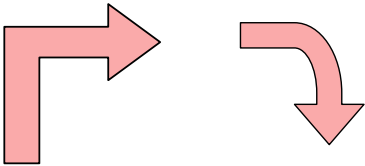
7)



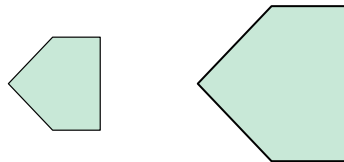
8)



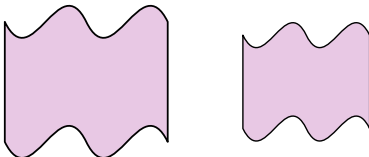
9)



10)



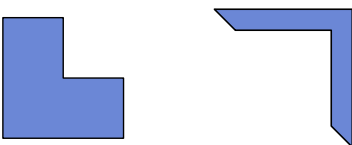
11)



12)



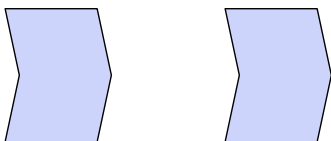
13)



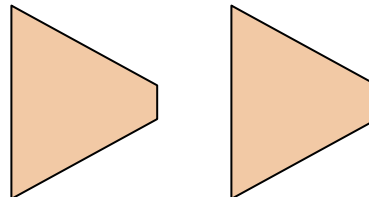
14)



15)



16)



1. _____

2. _____

3. _____

4. _____

5. _____

6. _____

7. _____

8. _____

9. _____

10. _____

11. _____

12. _____

13. _____

14. _____

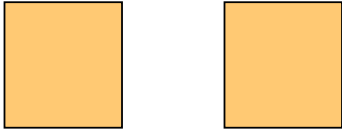
15. _____

16. _____

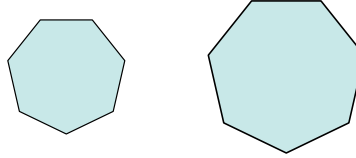


Determine if the shapes shown are 'similar', 'congruent' or 'neither'.

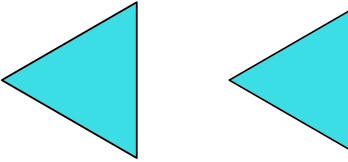
1)



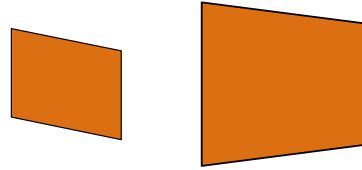
2)




3)



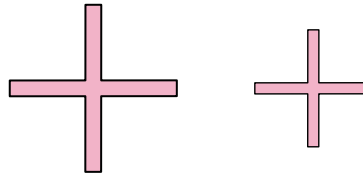
4)



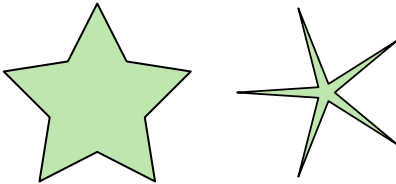
5)



6)



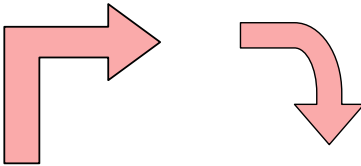
7)



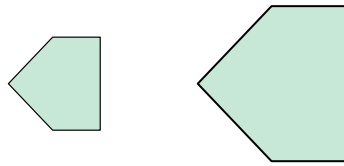
8)



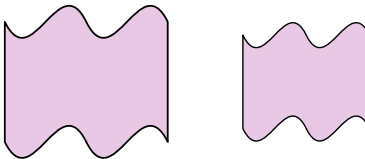
9)



10)



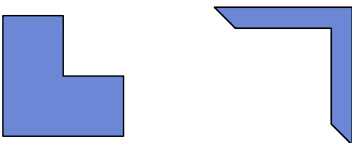
11)



12)



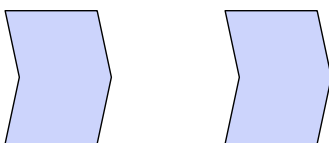
13)



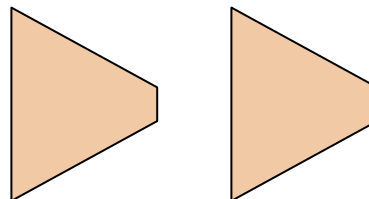
14)



15)



16)



Answers

1. congruent

2. similar

3. similar

4. neither

5. similar

6. similar

7. neither

8. congruent

9. neither

10. similar

11. similar

12. neither

13. neither

14. congruent

15. congruent

16. congruent