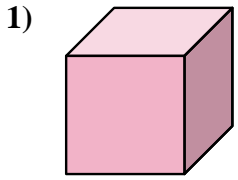


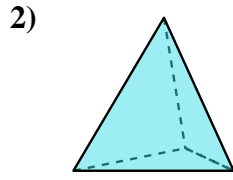


Determine which choice BEST describes the shape shown.

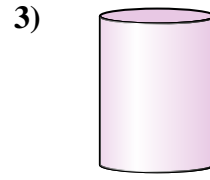
Answers



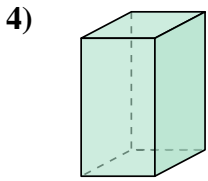
- A. cylinder
- B. triangular pyramid
- C. triangular prism
- D. cube



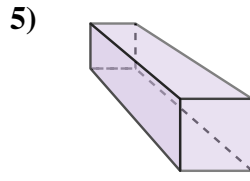
- A. rectangular pyramid
- B. triangular pyramid
- C. triangular prism
- D. rectangular prism



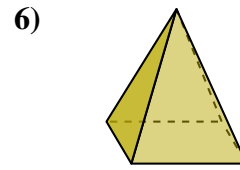
- A. cylinder
- B. sphere
- C. cone
- D. cube



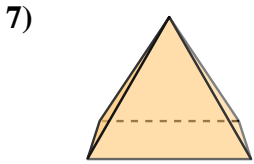
- A. cylinder
- B. rectangular pyramid
- C. sphere
- D. rectangular prism



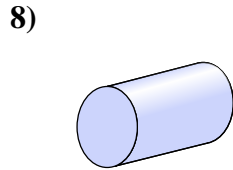
- A. rectangular prism
- B. cylinder
- C. cube
- D. sphere



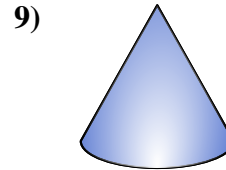
- A. rectangular pyramid
- B. triangular prism
- C. sphere
- D. cone



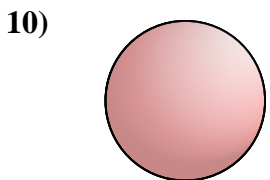
- A. cone
- B. triangular prism
- C. rectangular pyramid
- D. sphere



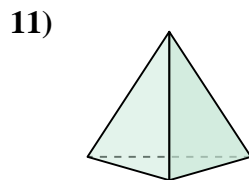
- A. triangular pyramid
- B. cylinder
- C. rectangular pyramid
- D. sphere



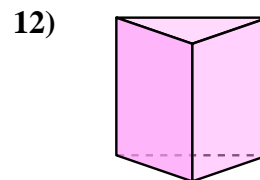
- A. cone
- B. cylinder
- C. triangular pyramid
- D. sphere



- A. cylinder
- B. triangular prism
- C. sphere
- D. cube



- A. sphere
- B. triangular pyramid
- C. rectangular pyramid
- D. rectangular prism

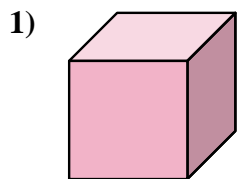


- A. triangular prism
- B. cylinder
- C. rectangular prism
- D. triangular pyramid

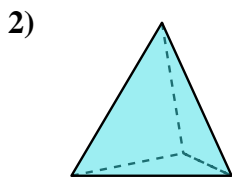
- 1. _____
- 2. _____
- 3. _____
- 4. _____
- 5. _____
- 6. _____
- 7. _____
- 8. _____
- 9. _____
- 10. _____
- 11. _____
- 12. _____



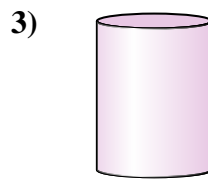
Determine which choice BEST describes the shape shown.



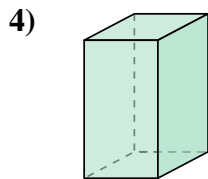
- 1) **A.** cylinder
B. triangular pyramid
C. triangular prism
D. cube



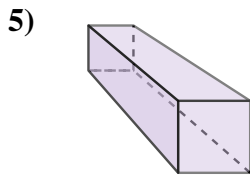
- 2) **A.** rectangular pyramid
B. triangular pyramid
C. triangular prism
D. rectangular prism



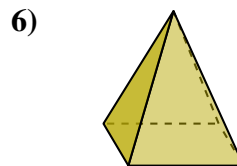
- 3) **A.** cylinder
B. sphere
C. cone
D. cube



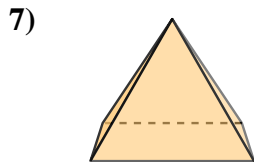
- 4) **A.** cylinder
B. rectangular pyramid
C. sphere
D. rectangular prism



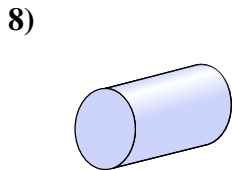
- 5) **A.** rectangular prism
B. cylinder
C. cube
D. sphere



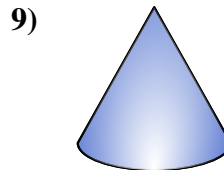
- 6) **A.** rectangular pyramid
B. triangular prism
C. sphere
D. cone



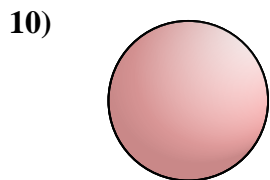
- 7) **A.** cone
B. triangular prism
C. rectangular pyramid
D. sphere



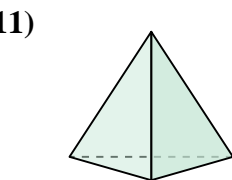
- 8) **A.** triangular pyramid
B. cylinder
C. rectangular pyramid
D. sphere



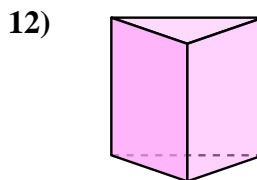
- 9) **A.** cone
B. cylinder
C. triangular pyramid
D. sphere



- 10) **A.** cylinder
B. triangular prism
C. sphere
D. cube



- 11) **A.** sphere
B. triangular pyramid
C. rectangular pyramid
D. rectangular prism



- 12) **A.** triangular prism
B. cylinder
C. rectangular prism
D. triangular pyramid

Answers

1. **D**
2. **B**
3. **A**
4. **D**
5. **A**
6. **A**
7. **C**
8. **B**
9. **A**
10. **C**
11. **B**
12. **A**