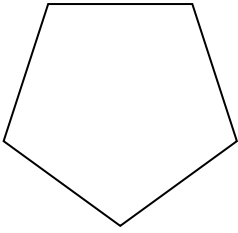




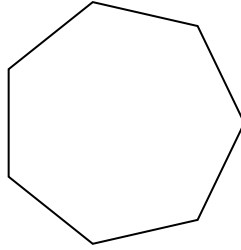
Determine if the shape shown is a regular shape or an irregular shape.

Answers

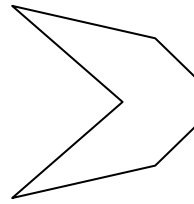
1)



2)




3)

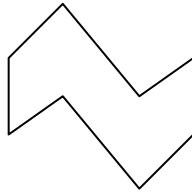


1. \_\_\_\_\_

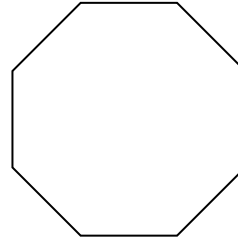
4)



5)



6)



2. \_\_\_\_\_

3. \_\_\_\_\_

4. \_\_\_\_\_

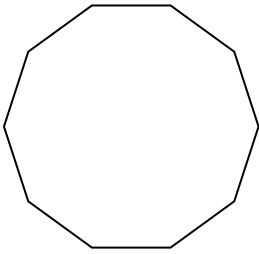
5. \_\_\_\_\_

6. \_\_\_\_\_

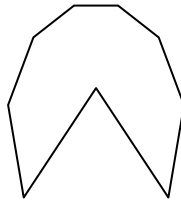
7. \_\_\_\_\_

8. \_\_\_\_\_

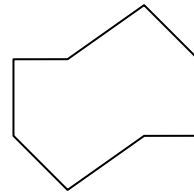
7)



8)



9)



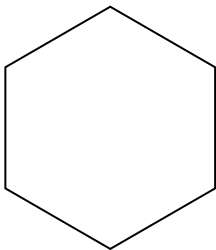
9. \_\_\_\_\_

10. \_\_\_\_\_

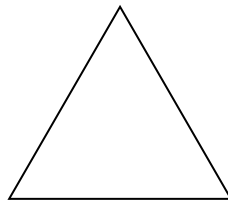
11. \_\_\_\_\_

12. \_\_\_\_\_

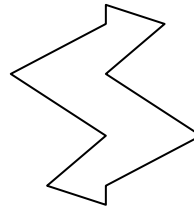
10)



11)



12)




13. \_\_\_\_\_

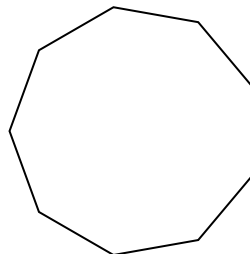
14. \_\_\_\_\_

15. \_\_\_\_\_


13)



14)


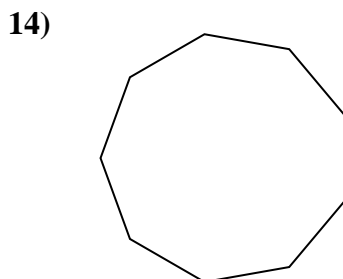
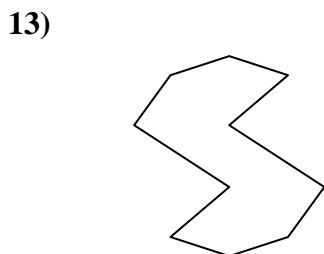
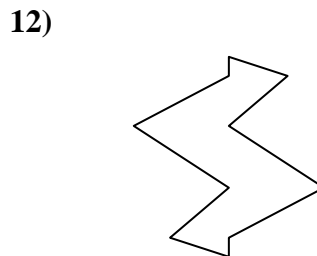
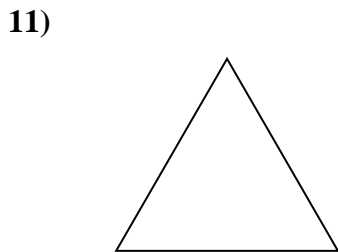
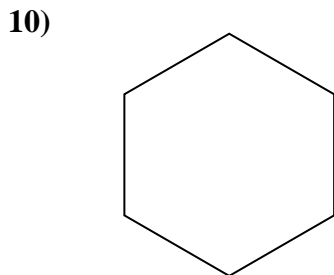
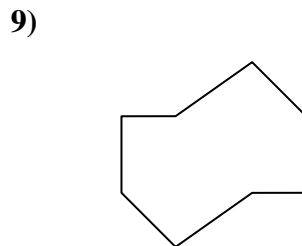
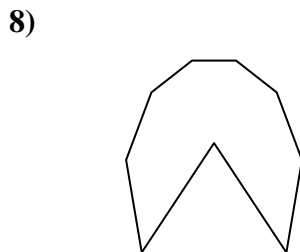
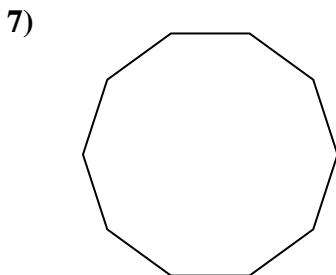
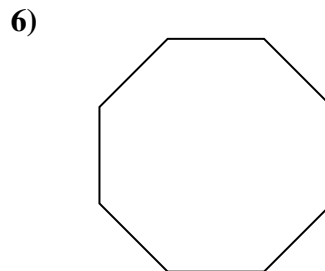
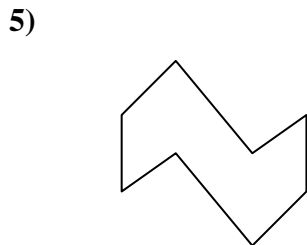

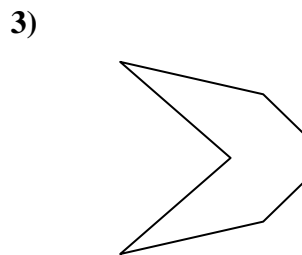
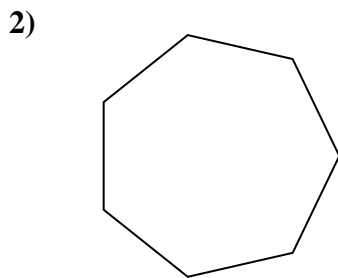
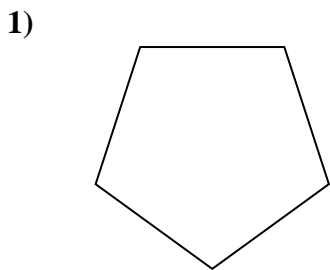


15)





Determine if the shape shown is a regular shape or an irregular shape.



Answers

1. Regular

2. Regular

3. Irregular

4. Irregular

5. Irregular

6. Regular

7. Regular

8. Irregular

9. Irregular

10. Regular

11. Regular

12. Irregular

13. Irregular

14. Regular

15. Irregular