




Determine if the shape is translating (slide), rotating (turn) or reflecting (flip).

Answers

1)



2)



3)




4)



5)




6)




7)



8)



9)



10)



11)



12)



13)



14)



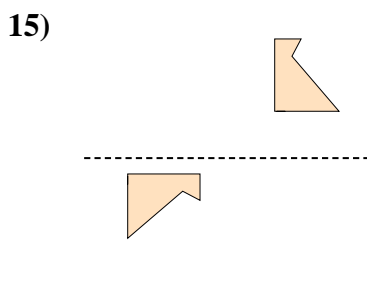
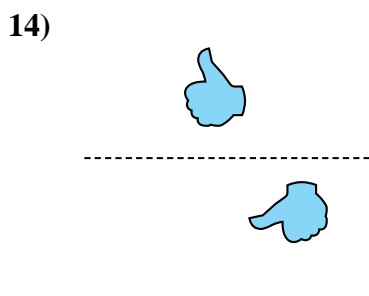
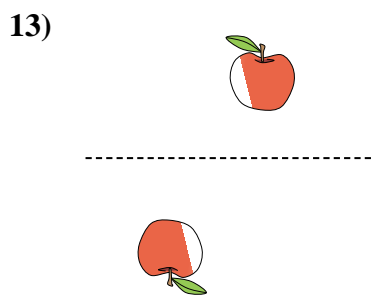
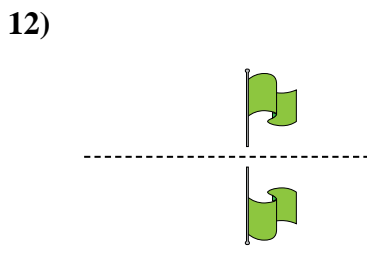
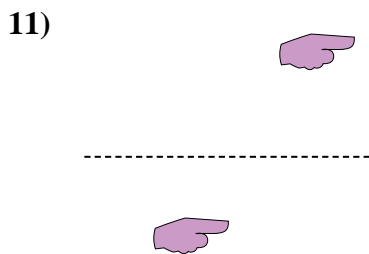
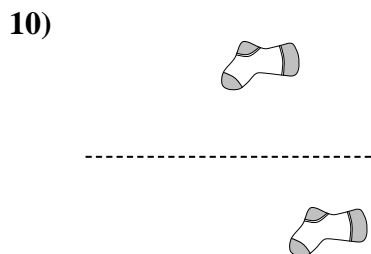
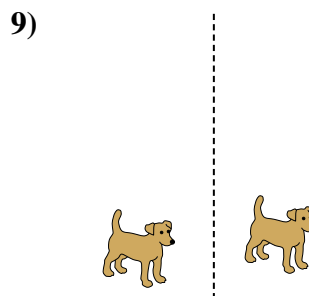
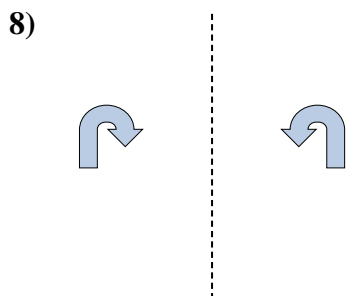
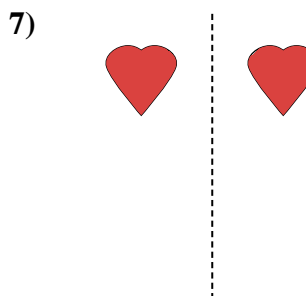
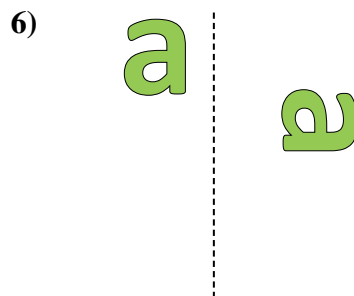
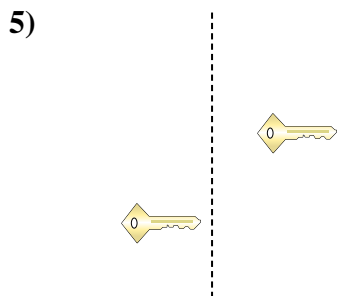
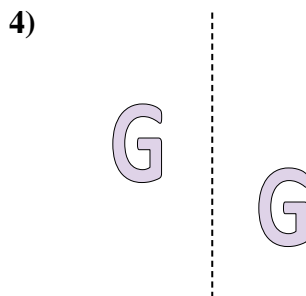
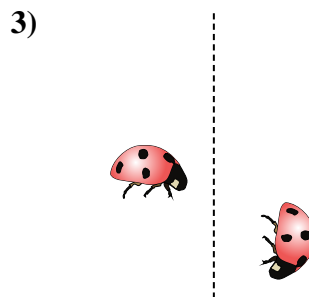
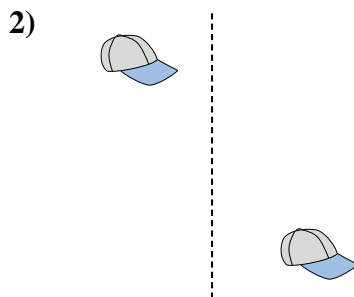
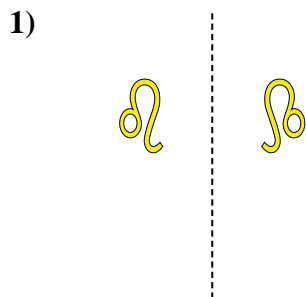
15)



1. \_\_\_\_\_
2. \_\_\_\_\_
3. \_\_\_\_\_
4. \_\_\_\_\_
5. \_\_\_\_\_
6. \_\_\_\_\_
7. \_\_\_\_\_
8. \_\_\_\_\_
9. \_\_\_\_\_
10. \_\_\_\_\_
11. \_\_\_\_\_
12. \_\_\_\_\_
13. \_\_\_\_\_
14. \_\_\_\_\_
15. \_\_\_\_\_



Determine if the shape is translating (slide), rotating (turn) or reflecting (flip).



Answers

1. reflecting
2. translating
3. rotating
4. translating
5. translating
6. rotating
7. reflecting
8. reflecting
9. translating
10. translating
11. translating
12. reflecting
13. rotating
14. rotating
15. rotating