



Determine the value of each set of tally marks.

Answers

1)

1. _____

2)

2. _____

3)

3. _____

4)

4. _____

5)

5. _____

6)

6. _____

7)

7. _____

8)

8. _____

9)

9. _____

10)

10. _____

11)

11. _____

12)

12. _____

13)

13. _____

14)

14. _____

15)

15. _____

16)

16. _____

17)

17. _____

18)

18. _____






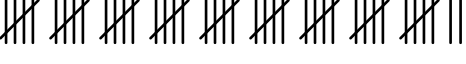
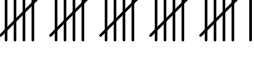

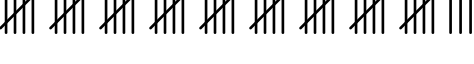

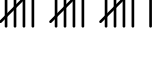
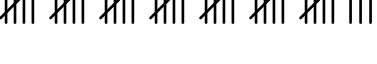
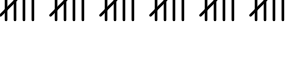
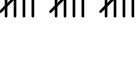
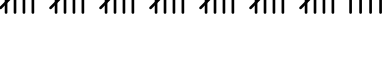
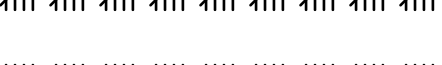


18. _____

18. _____



Determine the value of each set of tally marks.

Answers

- | | |
|---|---------------|
| 1)  | 1. <u>13</u> |
| 2)  | 2. <u>18</u> |
| 3)  | 3. <u>44</u> |
| 4)  | 4. <u>20</u> |
| 5)  | 5. <u>23</u> |
| 6)  | 6. <u>47</u> |
| 7)  | 7. <u>26</u> |
| 8)  | 8. <u>9</u> |
| 9)  | 9. <u>48</u> |
| 10)  | 10. <u>10</u> |
| 11)  | 11. <u>16</u> |
| 12)  | 12. <u>38</u> |
| 13)  | 13. <u>30</u> |
| 14)  | 14. <u>15</u> |
| 15)  | 15. <u>39</u> |
| 16)  | 16. <u>45</u> |
| 17)  | 17. <u>49</u> |
| 18)  | 18. <u>22</u> |