



Determine the value of each set of tally marks.

Answers

1) 

1. \_\_\_\_\_

2) 

2. \_\_\_\_\_

3) 

3. \_\_\_\_\_

4) 

4. \_\_\_\_\_

5) 

5. \_\_\_\_\_

6) 

6. \_\_\_\_\_

7) 

7. \_\_\_\_\_

8) 

8. \_\_\_\_\_

9) 

9. \_\_\_\_\_

10) 

10. \_\_\_\_\_

11) 

11. \_\_\_\_\_

12) 

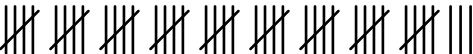
12. \_\_\_\_\_

13) 

13. \_\_\_\_\_

14) 

14. \_\_\_\_\_

15) 

15. \_\_\_\_\_

16) 

16. \_\_\_\_\_

17) 

17. \_\_\_\_\_



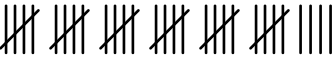


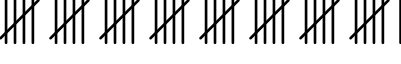

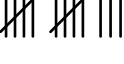

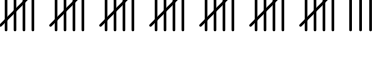

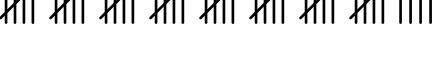
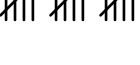
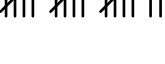
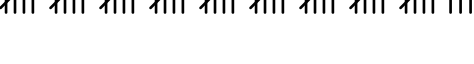



18) 

18. \_\_\_\_\_



Determine the value of each set of tally marks.

Answers

- |   |               |
|---|---------------|
| 1)     | 1. <u>19</u>  |
| 2)     | 2. <u>31</u>  |
| 3)     | 3. <u>34</u>  |
| 4)     | 4. <u>36</u>  |
| 5)     | 5. <u>16</u>  |
| 6)     | 6. <u>41</u>  |
| 7)     | 7. <u>20</u>  |
| 8)     | 8. <u>13</u>  |
| 9)    | 9. <u>7</u>   |
| 10)  | 10. <u>38</u> |
| 11)  | 11. <u>50</u> |
| 12)  | 12. <u>44</u> |
| 13)  | 13. <u>15</u> |
| 14)  | 14. <u>17</u> |
| 15)  | 15. <u>48</u> |
| 16)  | 16. <u>28</u> |
| 17)  | 17. <u>27</u> |
| 18)  | 18. <u>42</u> |