



Express each number using tally marks.

1) 26 \_\_\_\_\_

2) 36 \_\_\_\_\_

3) 47 \_\_\_\_\_

4) 21 \_\_\_\_\_

5) 19 \_\_\_\_\_

6) 30 \_\_\_\_\_

7) 91 \_\_\_\_\_

8) 98 \_\_\_\_\_

9) 70 \_\_\_\_\_

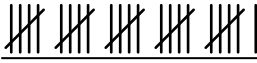
10) 97 \_\_\_\_\_

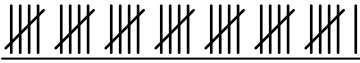
11) 22 \_\_\_\_\_

12) 35 \_\_\_\_\_



Express each number using tally marks.

1) 26 

2) 36 

3) 47 

4) 21 


5) 19 

6) 30 

7) 91 

8) 98 

9) 70 

10) 97 

11) 22 

12) 35 