



Express each number using tally marks.

1) 88 _____

2) 95 _____

3) 21 _____

4) 22 _____

5) 44 _____

6) 73 _____

7) 15 _____

8) 34 _____

9) 96 _____

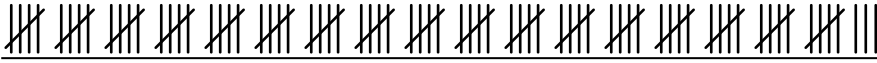
10) 6 _____

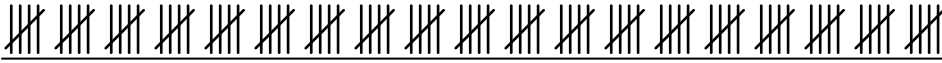
11) 23 _____


12) 100 _____



Express each number using tally marks.

1) 88 

2) 95 

3) 21 

4) 22 

5) 44 

6) 73 

7) 15 

8) 34 

9) 96 

10) 6 

11) 23 

12) 100 