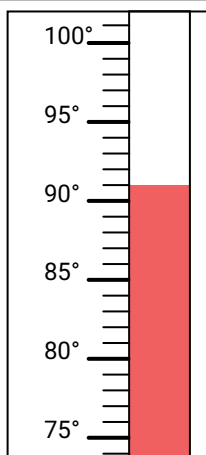
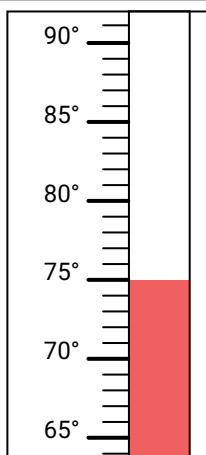
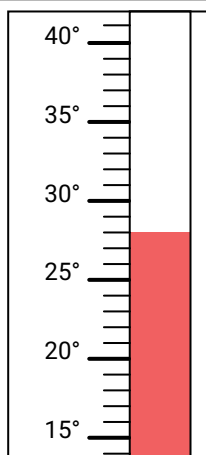
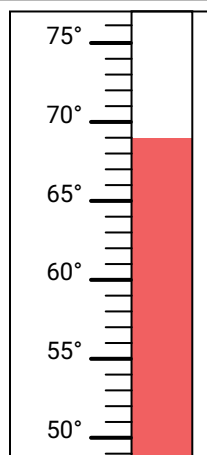
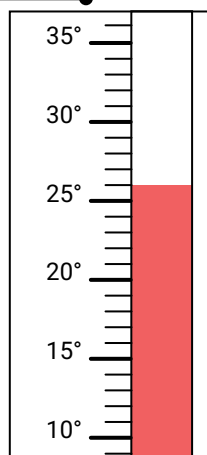
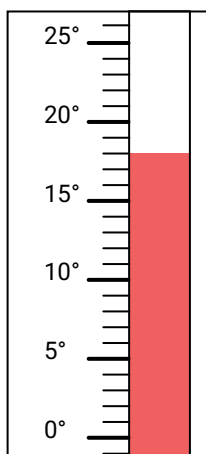
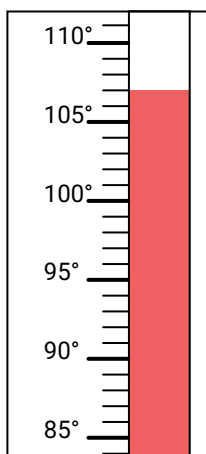
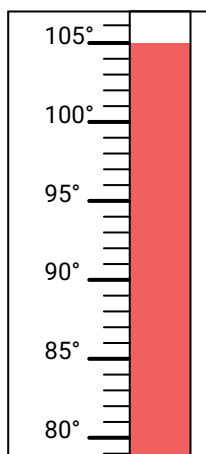
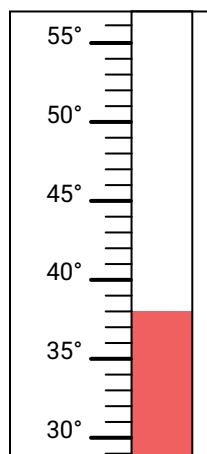
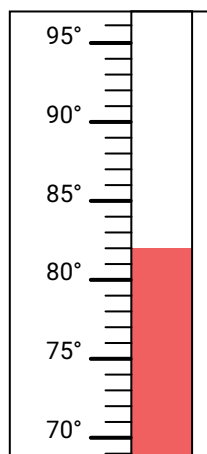


**Determine which letter best answers each question.****Answers**

- 1) Which thermometer best represents the temperature 82°?
- 2) Which thermometer best represents the temperature 91°?
- 3) Which thermometer best represents the temperature 18°?
- 4) Which thermometer best represents the temperature 107°?
- 5) Which thermometer best represents the temperature 105°?
- 6) Which thermometer best represents the temperature 69°?
- 7) Which thermometer best represents the temperature 28°?
- 8) Which thermometer best represents the temperature 38°?
- 9) Which thermometer best represents the temperature 26°?
- 10) Which thermometer best represents the temperature 75°?

A.**B.****C.****D.****E.****F.****G.****H.****I.****J.**

1. _____

2. _____

3. _____

4. _____

5. _____

6. _____

7. _____

8. _____

9. _____

10. _____



Determine which letter best answers each question.

- 1) Which thermometer best represents the temperature 82°?
- 2) Which thermometer best represents the temperature 91°?
- 3) Which thermometer best represents the temperature 18°?
- 4) Which thermometer best represents the temperature 107°?
- 5) Which thermometer best represents the temperature 105°?
- 6) Which thermometer best represents the temperature 69°?
- 7) Which thermometer best represents the temperature 28°?
- 8) Which thermometer best represents the temperature 38°?
- 9) Which thermometer best represents the temperature 26°?
- 10) Which thermometer best represents the temperature 75°?

Answers

1. **J**
2. **A**
3. **F**
4. **G**
5. **H**
6. **D**
7. **C**
8. **I**
9. **E**
10. **B**

