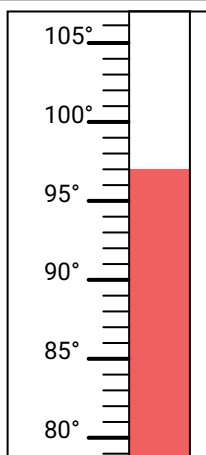
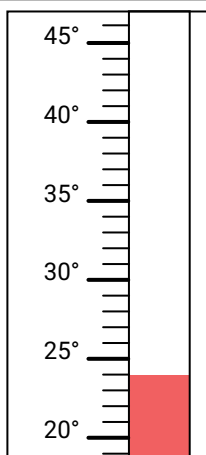
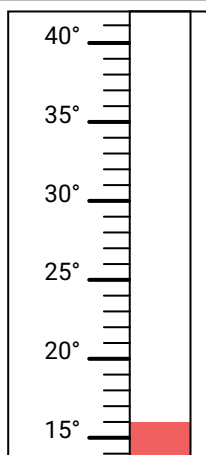
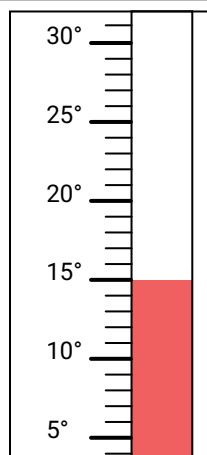
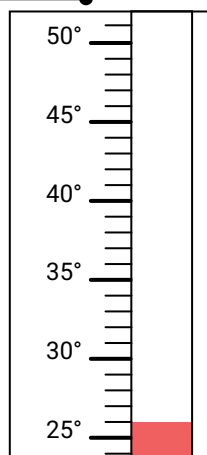
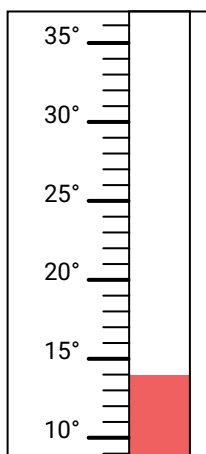
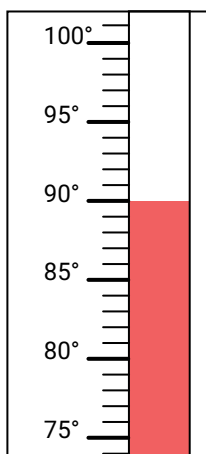
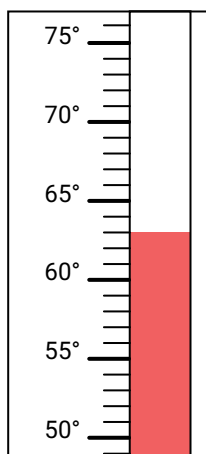
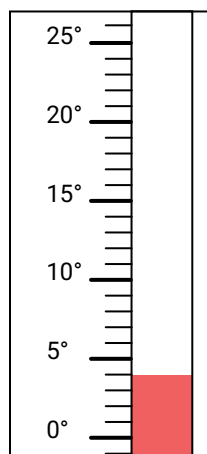
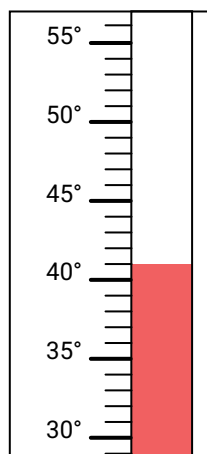


**Determine which letter best answers each question.****Answers**

- 1) Which thermometer best represents the temperature 24°?
- 2) Which thermometer best represents the temperature 26°?
- 3) Which thermometer best represents the temperature 90°?
- 4) Which thermometer best represents the temperature 97°?
- 5) Which thermometer best represents the temperature 15°?
- 6) Which thermometer best represents the temperature 41°?
- 7) Which thermometer best represents the temperature 14°?
- 8) Which thermometer best represents the temperature 4°?
- 9) Which thermometer best represents the temperature 63°?
- 10) Which thermometer best represents the temperature 16°?

**A.****B.****C.****D.****E.****F.****G.****H.****I.****J.**

1. \_\_\_\_\_

2. \_\_\_\_\_

3. \_\_\_\_\_

4. \_\_\_\_\_

5. \_\_\_\_\_

6. \_\_\_\_\_

7. \_\_\_\_\_

8. \_\_\_\_\_

9. \_\_\_\_\_

10. \_\_\_\_\_



Determine which letter best answers each question.

- 1) Which thermometer best represents the temperature 24°?
- 2) Which thermometer best represents the temperature 26°?
- 3) Which thermometer best represents the temperature 90°?
- 4) Which thermometer best represents the temperature 97°?
- 5) Which thermometer best represents the temperature 15°?
- 6) Which thermometer best represents the temperature 41°?
- 7) Which thermometer best represents the temperature 14°?
- 8) Which thermometer best represents the temperature 4°?
- 9) Which thermometer best represents the temperature 63°?
- 10) Which thermometer best represents the temperature 16°?

**Answers**

1. **B**
2. **E**
3. **G**
4. **A**
5. **D**
6. **J**
7. **F**
8. **I**
9. **H**
10. **C**

