

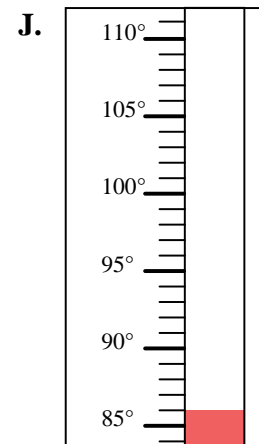
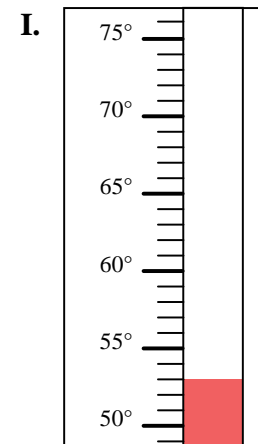
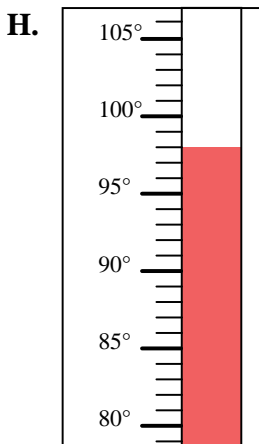
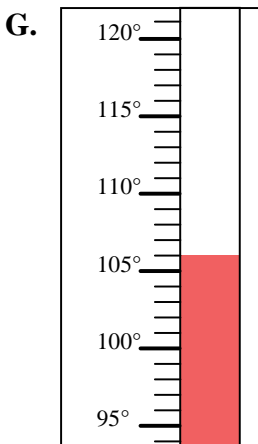
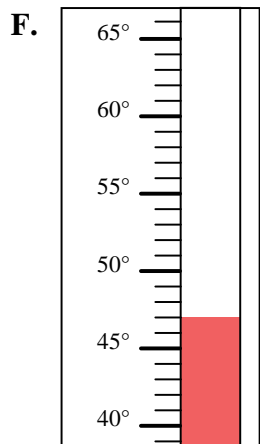
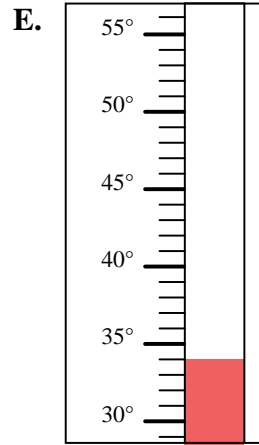
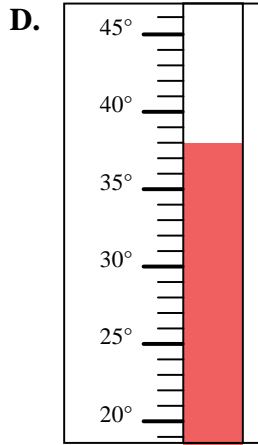
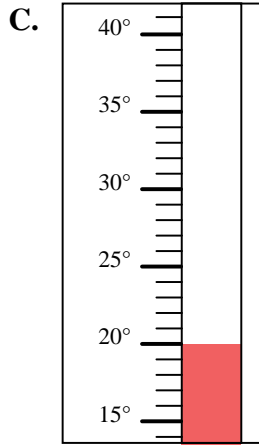
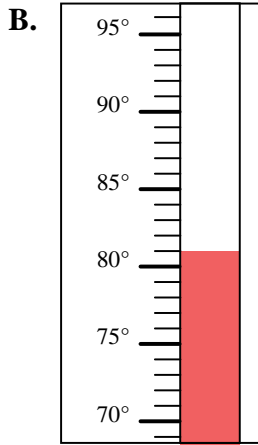
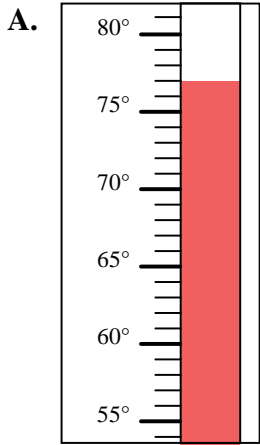


Determine which letter best answers each question.

**Answers**

- 1) Which thermometer best represents the temperature 53°?
- 2) Which thermometer best represents the temperature 98°?
- 3) Which thermometer best represents the temperature 77°?
- 4) Which thermometer best represents the temperature 106°?
- 5) Which thermometer best represents the temperature 47°?
- 6) Which thermometer best represents the temperature 86°?
- 7) Which thermometer best represents the temperature 34°?
- 8) Which thermometer best represents the temperature 81°?
- 9) Which thermometer best represents the temperature 20°?
- 10) Which thermometer best represents the temperature 38°?

1. \_\_\_\_\_
2. \_\_\_\_\_
3. \_\_\_\_\_
4. \_\_\_\_\_
5. \_\_\_\_\_
6. \_\_\_\_\_
7. \_\_\_\_\_
8. \_\_\_\_\_
9. \_\_\_\_\_
10. \_\_\_\_\_





Determine which letter best answers each question.

- 1) Which thermometer best represents the temperature  $53^{\circ}$ ?
- 2) Which thermometer best represents the temperature  $98^{\circ}$ ?
- 3) Which thermometer best represents the temperature  $77^{\circ}$ ?
- 4) Which thermometer best represents the temperature  $106^{\circ}$ ?
- 5) Which thermometer best represents the temperature  $47^{\circ}$ ?
- 6) Which thermometer best represents the temperature  $86^{\circ}$ ?
- 7) Which thermometer best represents the temperature  $34^{\circ}$ ?
- 8) Which thermometer best represents the temperature  $81^{\circ}$ ?
- 9) Which thermometer best represents the temperature  $20^{\circ}$ ?
- 10) Which thermometer best represents the temperature  $38^{\circ}$ ?

**Answers**

1.     **I**
2.     **H**
3.     **A**
4.     **G**
5.     **F**
6.     **J**
7.     **E**
8.     **B**
9.     **C**
10.     **D**

