

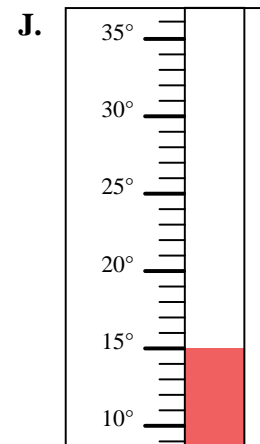
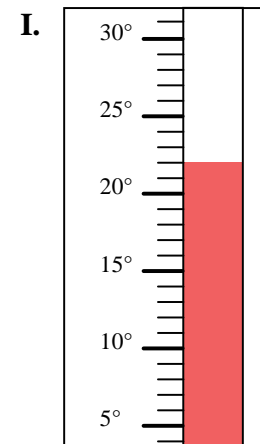
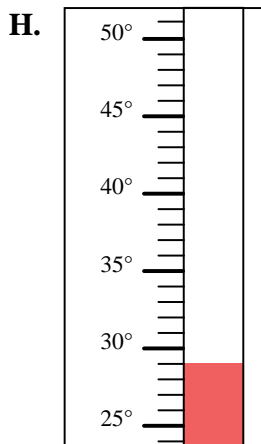
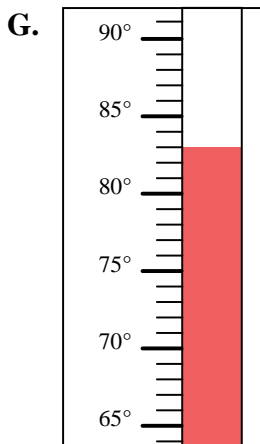
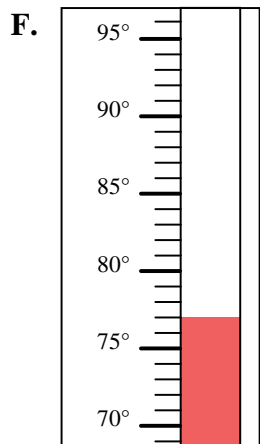
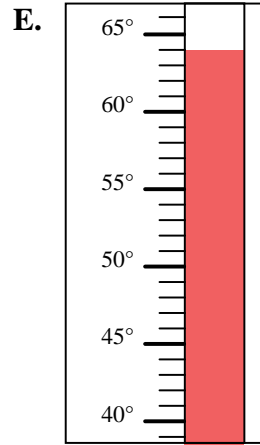
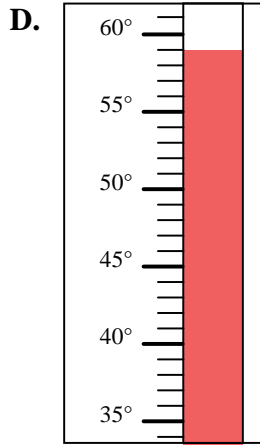
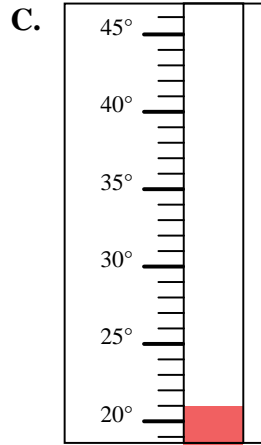
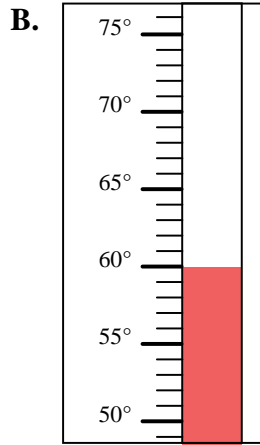
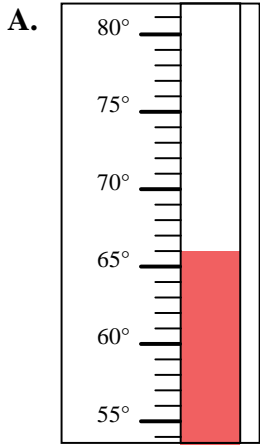


Determine which letter best answers each question.

**Answers**

- 1) Which thermometer best represents the temperature 22°?
- 2) Which thermometer best represents the temperature 66°?
- 3) Which thermometer best represents the temperature 15°?
- 4) Which thermometer best represents the temperature 83°?
- 5) Which thermometer best represents the temperature 21°?
- 6) Which thermometer best represents the temperature 59°?
- 7) Which thermometer best represents the temperature 60°?
- 8) Which thermometer best represents the temperature 77°?
- 9) Which thermometer best represents the temperature 64°?
- 10) Which thermometer best represents the temperature 29°?

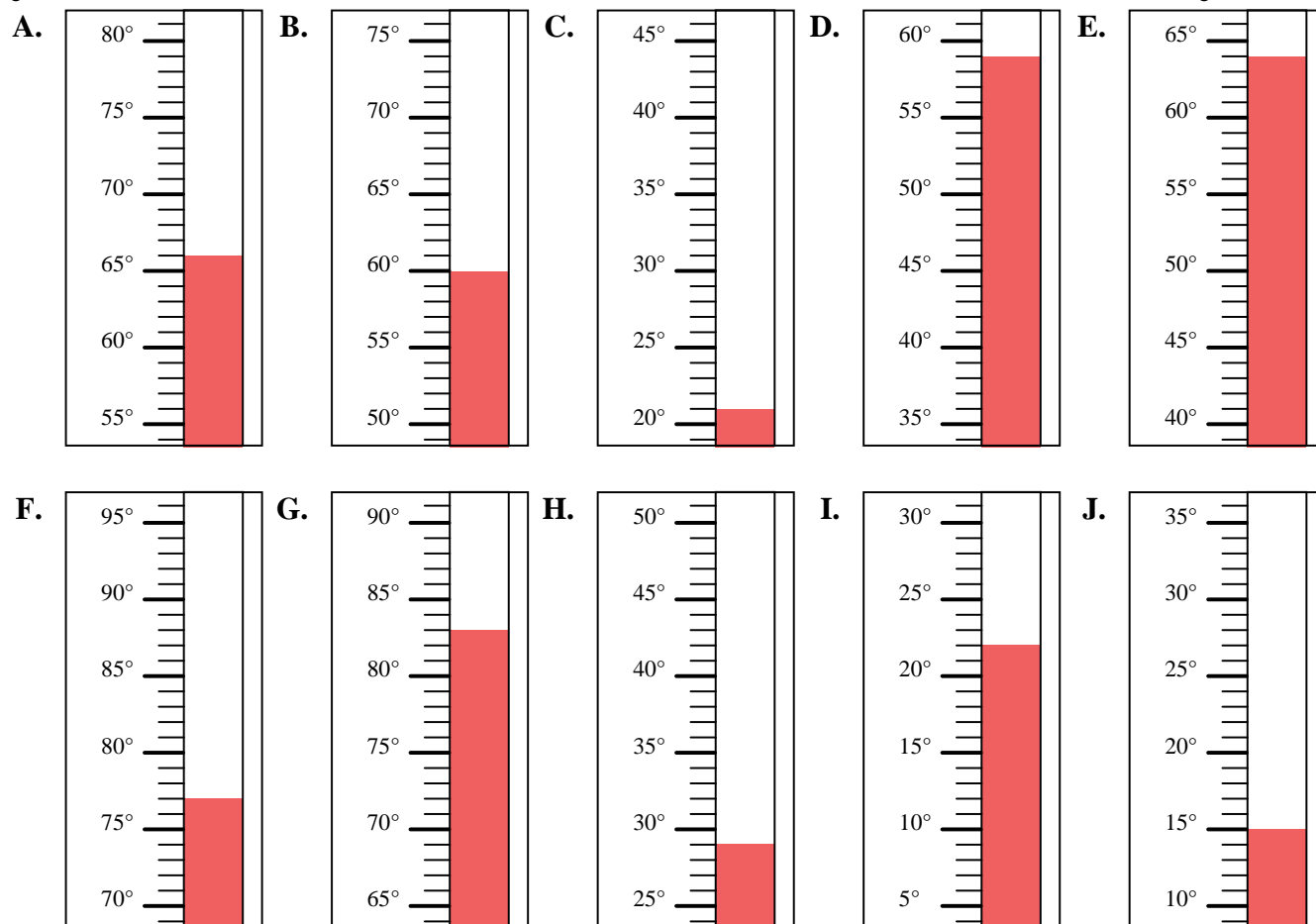
1. \_\_\_\_\_
2. \_\_\_\_\_
3. \_\_\_\_\_
4. \_\_\_\_\_
5. \_\_\_\_\_
6. \_\_\_\_\_
7. \_\_\_\_\_
8. \_\_\_\_\_
9. \_\_\_\_\_
10. \_\_\_\_\_





Determine which letter best answers each question.

- 1) Which thermometer best represents the temperature  $22^\circ$ ?
- 2) Which thermometer best represents the temperature  $66^\circ$ ?
- 3) Which thermometer best represents the temperature  $15^\circ$ ?
- 4) Which thermometer best represents the temperature  $83^\circ$ ?
- 5) Which thermometer best represents the temperature  $21^\circ$ ?
- 6) Which thermometer best represents the temperature  $59^\circ$ ?
- 7) Which thermometer best represents the temperature  $60^\circ$ ?
- 8) Which thermometer best represents the temperature  $77^\circ$ ?
- 9) Which thermometer best represents the temperature  $64^\circ$ ?
- 10) Which thermometer best represents the temperature  $29^\circ$ ?



**Answers**

1. **I**
2. **A**
3. **J**
4. **G**
5. **C**
6. **D**
7. **B**
8. **F**
9. **E**
10. **H**