

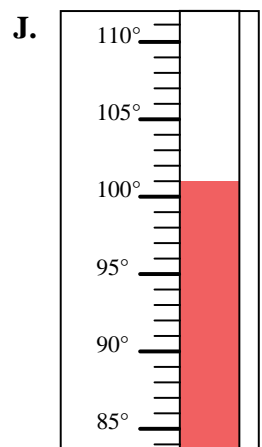
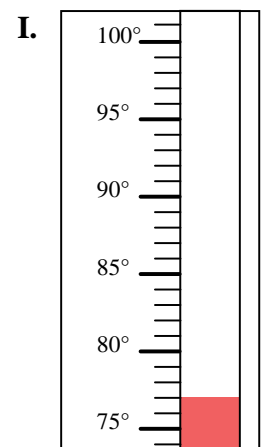
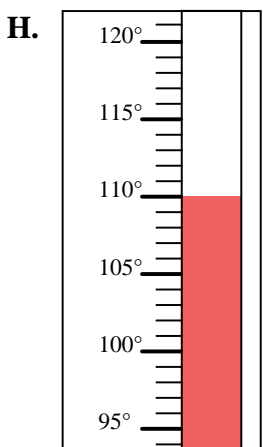
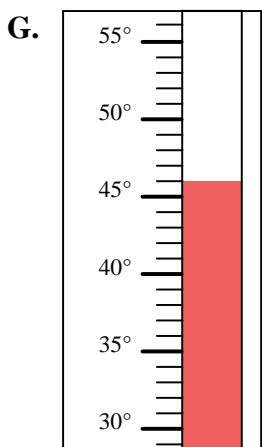
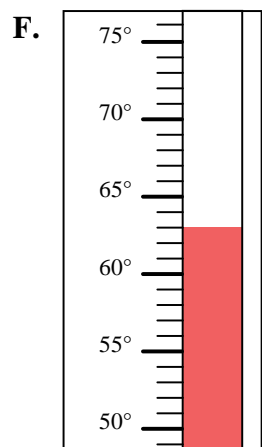
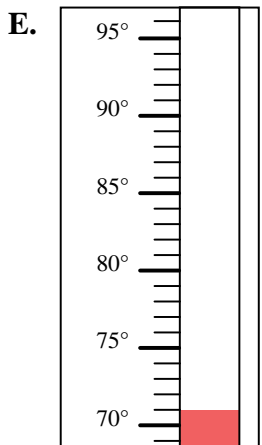
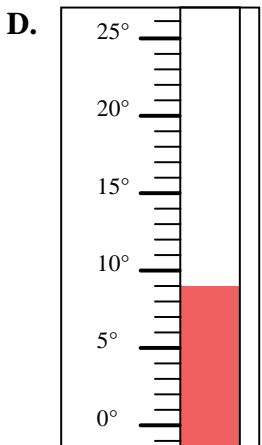
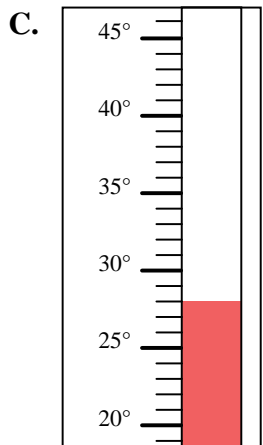
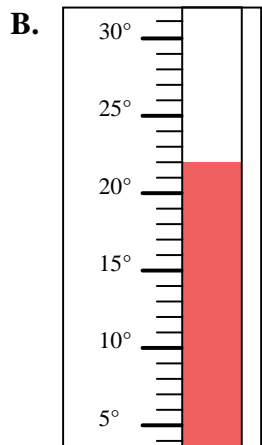
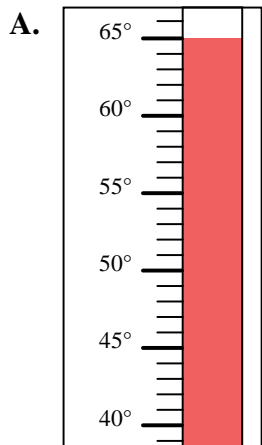


Determine which letter best answers each question.

Answers

- 1) Which thermometer best represents the temperature 63°?
- 2) Which thermometer best represents the temperature 46°?
- 3) Which thermometer best represents the temperature 65°?
- 4) Which thermometer best represents the temperature 110°?
- 5) Which thermometer best represents the temperature 77°?
- 6) Which thermometer best represents the temperature 22°?
- 7) Which thermometer best represents the temperature 71°?
- 8) Which thermometer best represents the temperature 28°?
- 9) Which thermometer best represents the temperature 9°?
- 10) Which thermometer best represents the temperature 101°?

1. _____
2. _____
3. _____
4. _____
5. _____
6. _____
7. _____
8. _____
9. _____
10. _____





Determine which letter best answers each question.

- 1) Which thermometer best represents the temperature 63° ?
- 2) Which thermometer best represents the temperature 46° ?
- 3) Which thermometer best represents the temperature 65° ?
- 4) Which thermometer best represents the temperature 110° ?
- 5) Which thermometer best represents the temperature 77° ?
- 6) Which thermometer best represents the temperature 22° ?
- 7) Which thermometer best represents the temperature 71° ?
- 8) Which thermometer best represents the temperature 28° ?
- 9) Which thermometer best represents the temperature 9° ?
- 10) Which thermometer best represents the temperature 101° ?

Answers

1. **F**
2. **G**
3. **A**
4. **H**
5. **I**
6. **B**
7. **E**
8. **C**
9. **D**
10. **J**

