

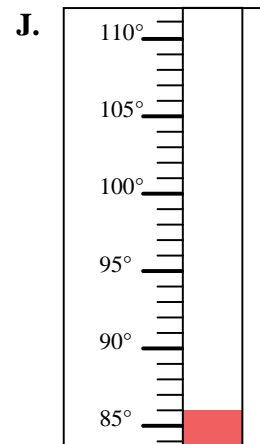
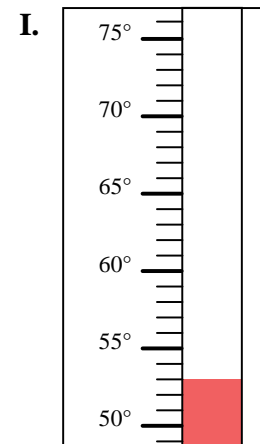
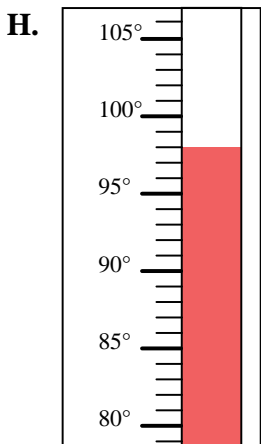
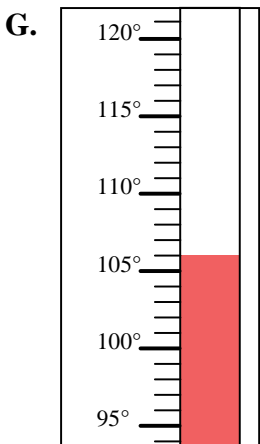
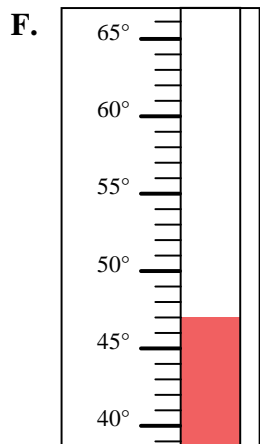
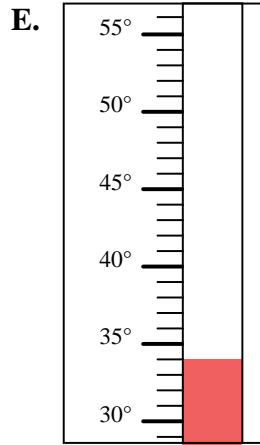
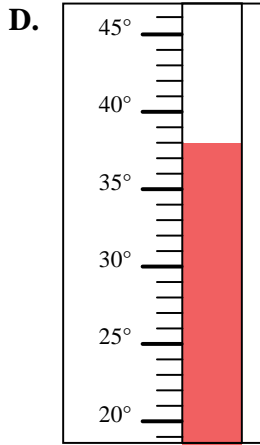
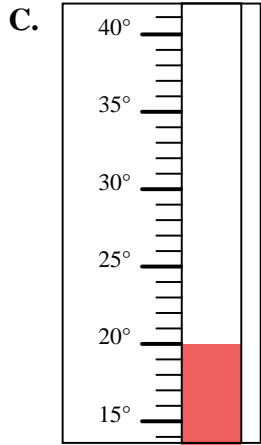
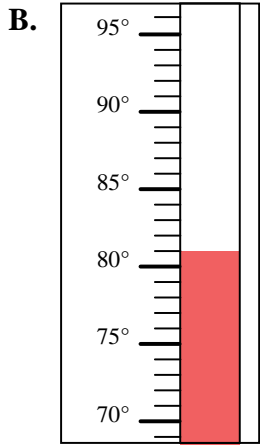
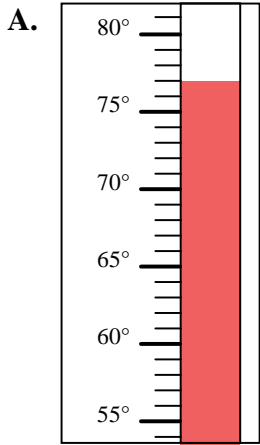


Determine which letter best answers each question.

Answers

- 1) Which thermometer best represents the temperature 53°?
- 2) Which thermometer best represents the temperature 98°?
- 3) Which thermometer best represents the temperature 77°?
- 4) Which thermometer best represents the temperature 106°?
- 5) Which thermometer best represents the temperature 47°?
- 6) Which thermometer best represents the temperature 86°?
- 7) Which thermometer best represents the temperature 34°?
- 8) Which thermometer best represents the temperature 81°?
- 9) Which thermometer best represents the temperature 20°?
- 10) Which thermometer best represents the temperature 38°?

1. _____
2. _____
3. _____
4. _____
5. _____
6. _____
7. _____
8. _____
9. _____
10. _____



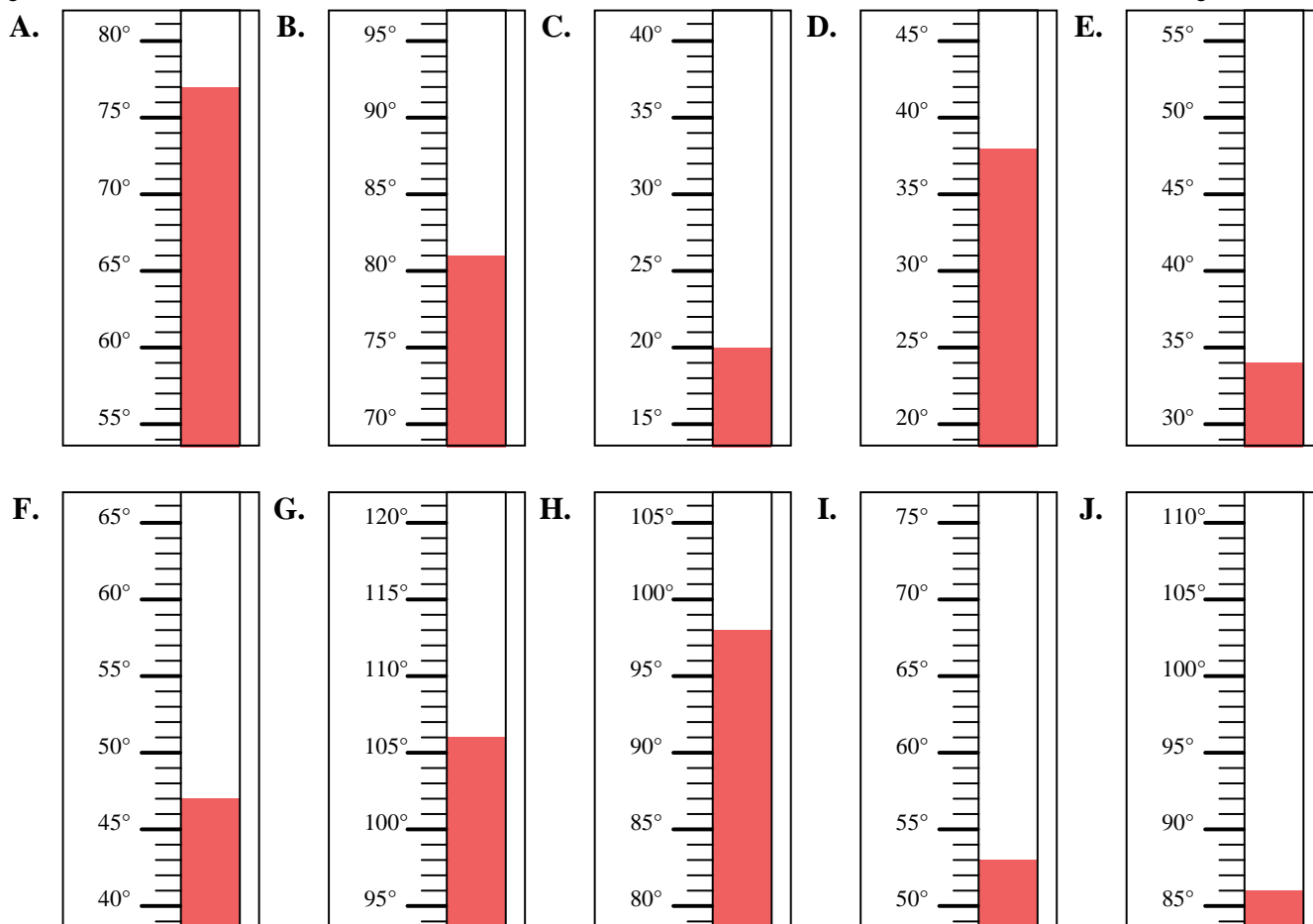


Determine which letter best answers each question.

- 1) Which thermometer best represents the temperature 53° ?
- 2) Which thermometer best represents the temperature 98° ?
- 3) Which thermometer best represents the temperature 77° ?
- 4) Which thermometer best represents the temperature 106° ?
- 5) Which thermometer best represents the temperature 47° ?
- 6) Which thermometer best represents the temperature 86° ?
- 7) Which thermometer best represents the temperature 34° ?
- 8) Which thermometer best represents the temperature 81° ?
- 9) Which thermometer best represents the temperature 20° ?
- 10) Which thermometer best represents the temperature 38° ?

Answers

1. **I**
2. **H**
3. **A**
4. **G**
5. **F**
6. **J**
7. **E**
8. **B**
9. **C**
10. **D**



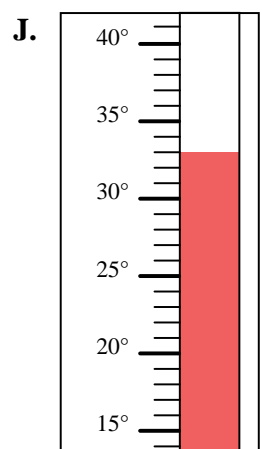
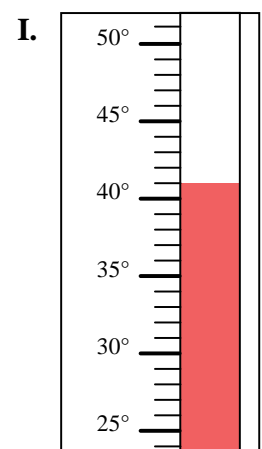
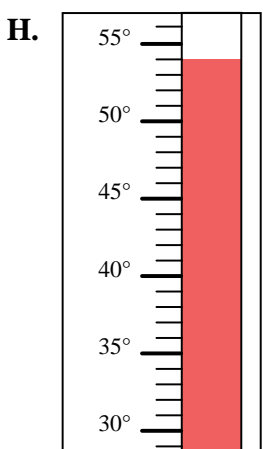
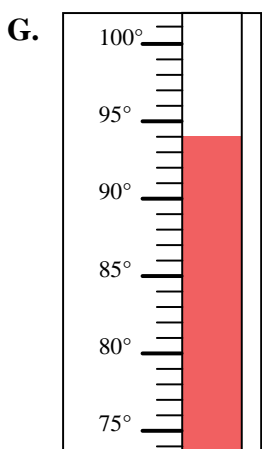
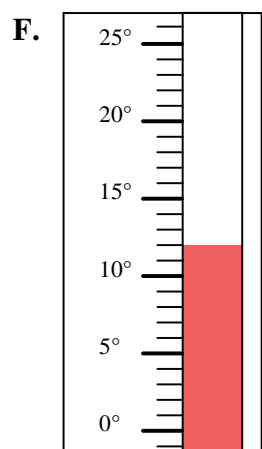
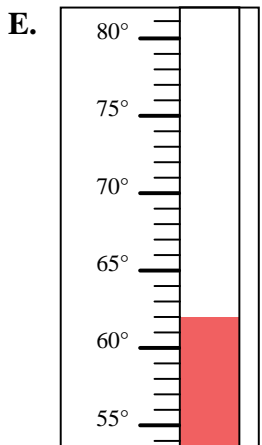
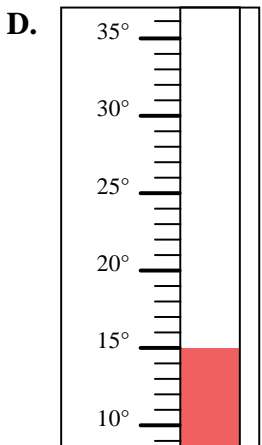
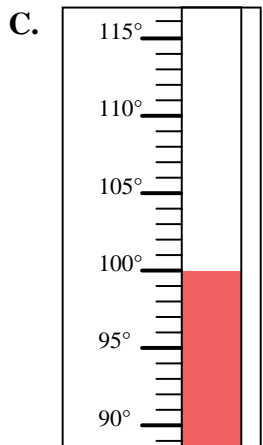
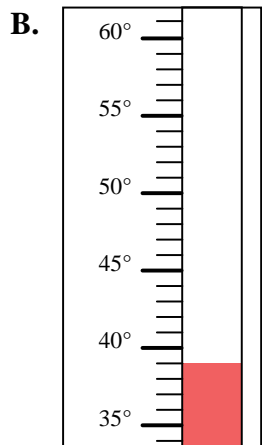
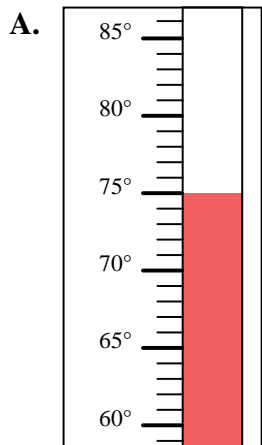


Determine which letter best answers each question.

Answers

- 1) Which thermometer best represents the temperature 39°?
- 2) Which thermometer best represents the temperature 12°?
- 3) Which thermometer best represents the temperature 75°?
- 4) Which thermometer best represents the temperature 100°?
- 5) Which thermometer best represents the temperature 33°?
- 6) Which thermometer best represents the temperature 15°?
- 7) Which thermometer best represents the temperature 94°?
- 8) Which thermometer best represents the temperature 54°?
- 9) Which thermometer best represents the temperature 62°?
- 10) Which thermometer best represents the temperature 41°?

1. _____
2. _____
3. _____
4. _____
5. _____
6. _____
7. _____
8. _____
9. _____
10. _____



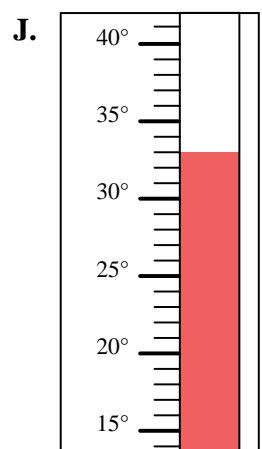
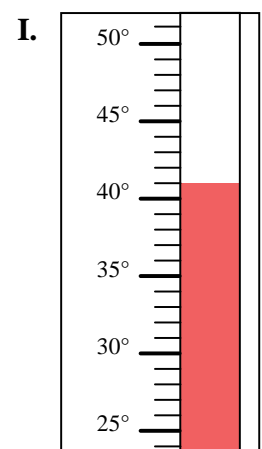
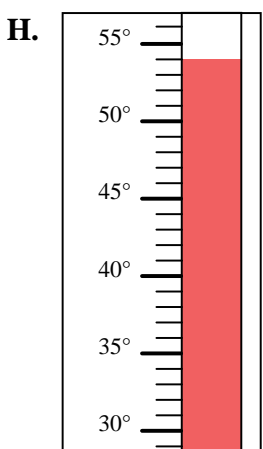
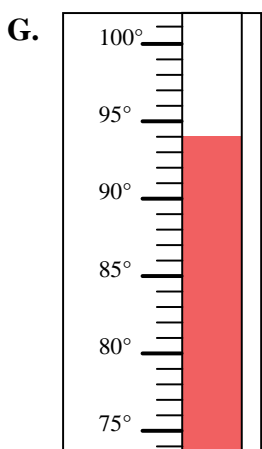
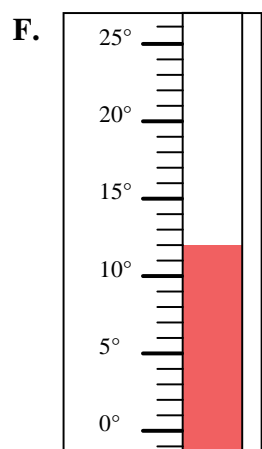
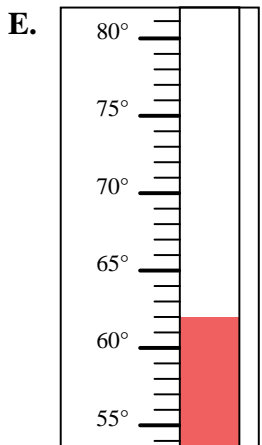
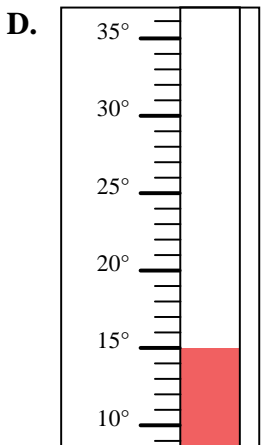
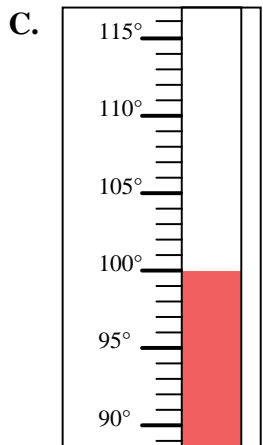
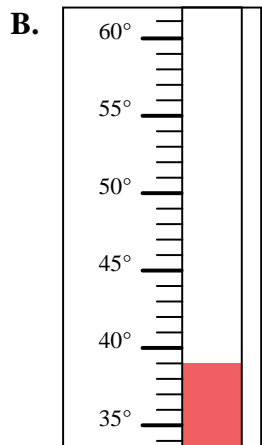
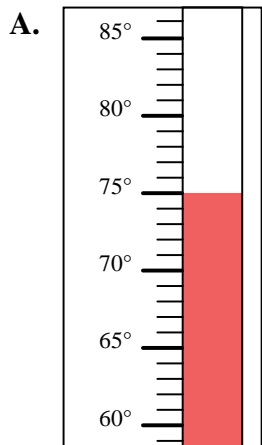


Determine which letter best answers each question.

- 1) Which thermometer best represents the temperature 39°?
- 2) Which thermometer best represents the temperature 12°?
- 3) Which thermometer best represents the temperature 75°?
- 4) Which thermometer best represents the temperature 100°?
- 5) Which thermometer best represents the temperature 33°?
- 6) Which thermometer best represents the temperature 15°?
- 7) Which thermometer best represents the temperature 94°?
- 8) Which thermometer best represents the temperature 54°?
- 9) Which thermometer best represents the temperature 62°?
- 10) Which thermometer best represents the temperature 41°?

Answers

1. **B**
2. **F**
3. **A**
4. **C**
5. **J**
6. **D**
7. **G**
8. **H**
9. **E**
10. **I**



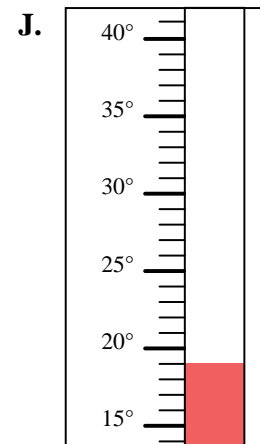
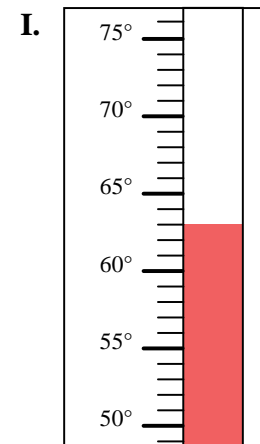
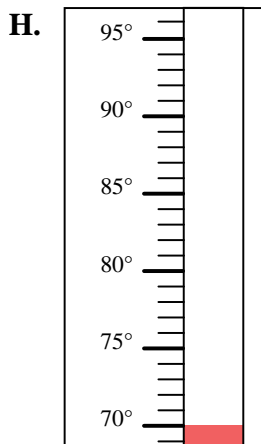
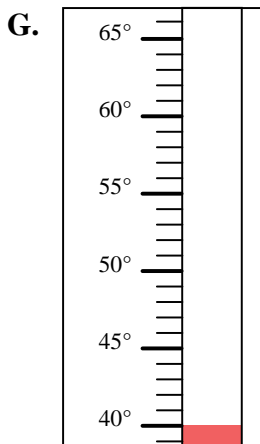
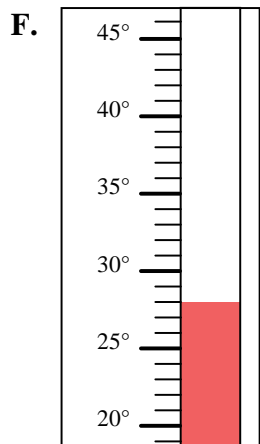
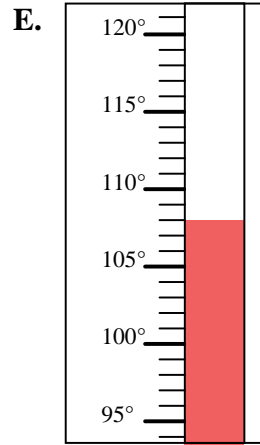
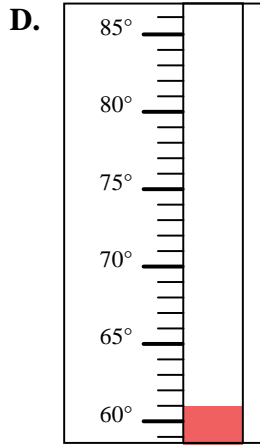
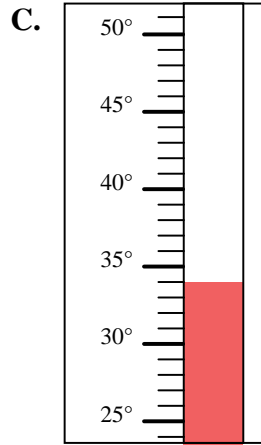
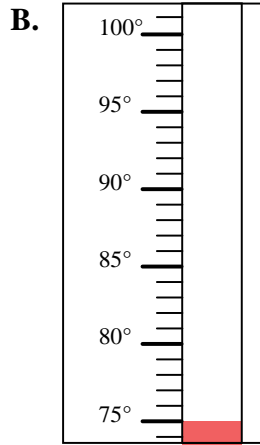
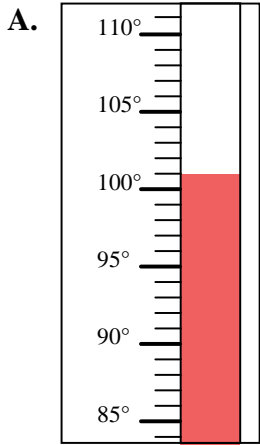


Determine which letter best answers each question.

Answers

- 1) Which thermometer best represents the temperature 101°?
- 2) Which thermometer best represents the temperature 34°?
- 3) Which thermometer best represents the temperature 63°?
- 4) Which thermometer best represents the temperature 108°?
- 5) Which thermometer best represents the temperature 61°?
- 6) Which thermometer best represents the temperature 75°?
- 7) Which thermometer best represents the temperature 40°?
- 8) Which thermometer best represents the temperature 28°?
- 9) Which thermometer best represents the temperature 70°?
- 10) Which thermometer best represents the temperature 19°?

1. _____
2. _____
3. _____
4. _____
5. _____
6. _____
7. _____
8. _____
9. _____
10. _____



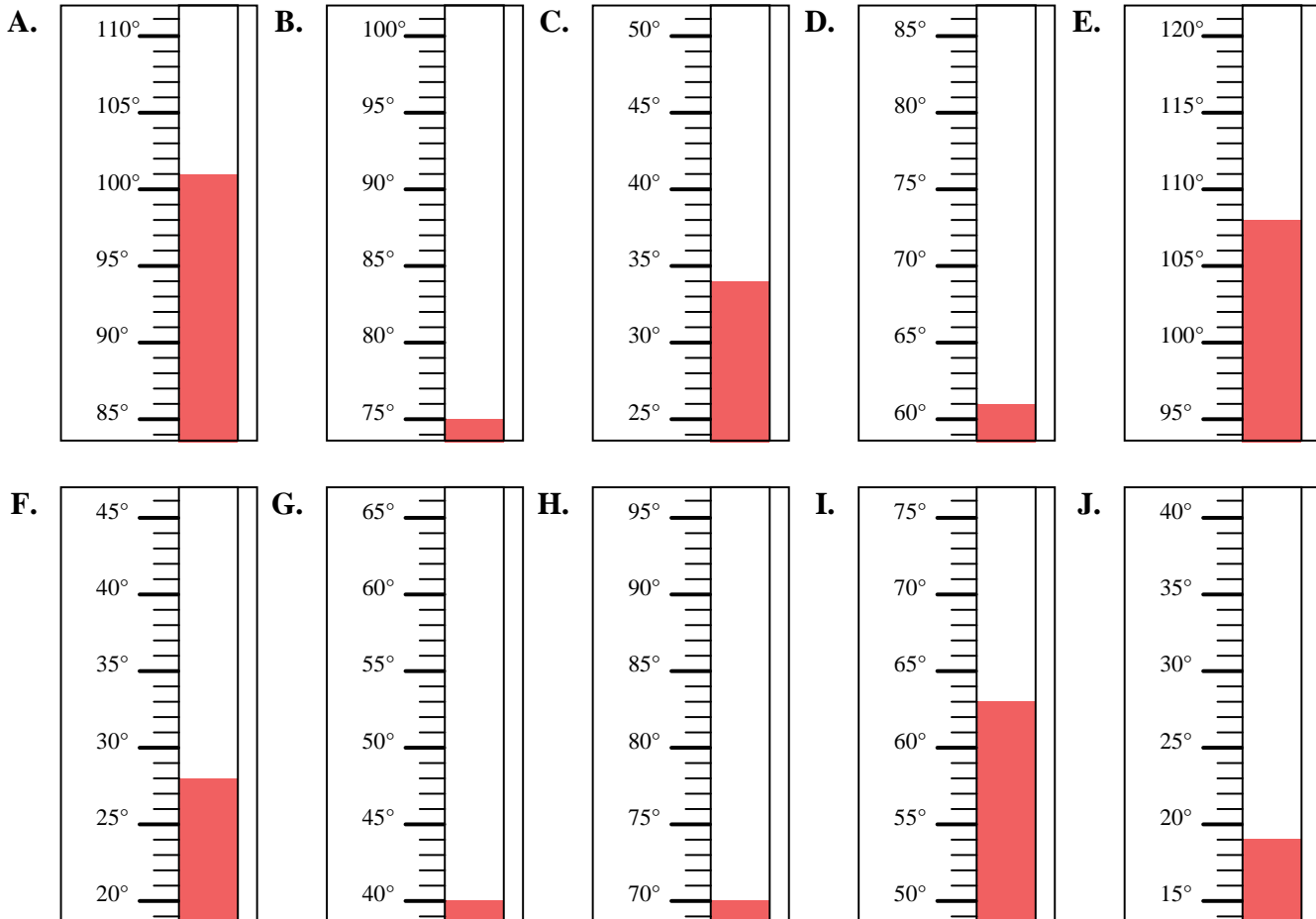


Determine which letter best answers each question.

- 1) Which thermometer best represents the temperature 101°?
- 2) Which thermometer best represents the temperature 34°?
- 3) Which thermometer best represents the temperature 63°?
- 4) Which thermometer best represents the temperature 108°?
- 5) Which thermometer best represents the temperature 61°?
- 6) Which thermometer best represents the temperature 75°?
- 7) Which thermometer best represents the temperature 40°?
- 8) Which thermometer best represents the temperature 28°?
- 9) Which thermometer best represents the temperature 70°?
- 10) Which thermometer best represents the temperature 19°?

Answers

1. **A**
2. **C**
3. **I**
4. **E**
5. **D**
6. **B**
7. **G**
8. **F**
9. **H**
10. **J**



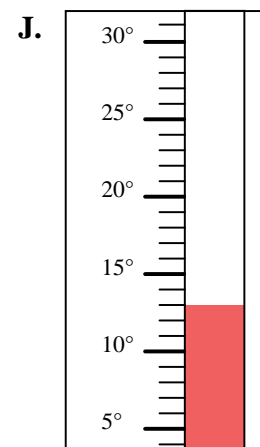
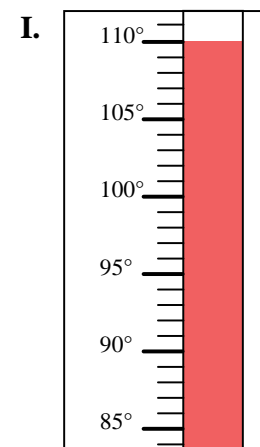
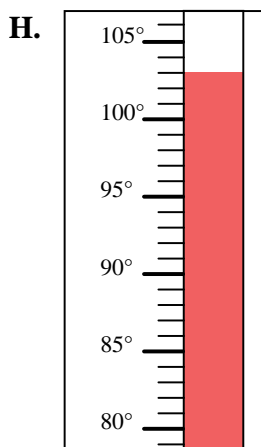
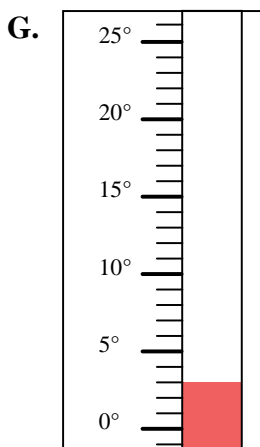
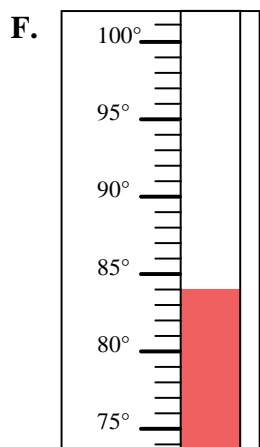
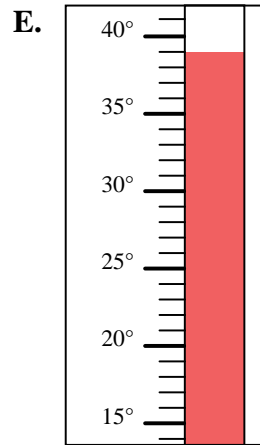
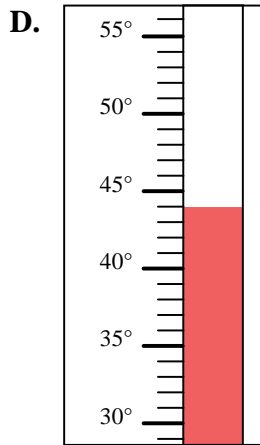
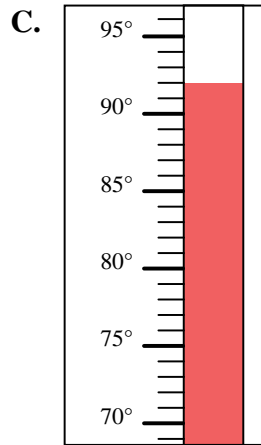
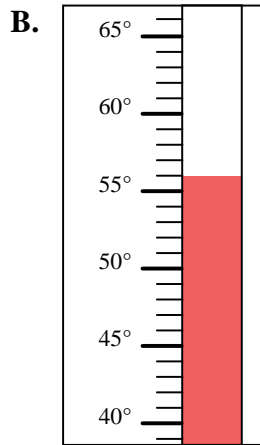
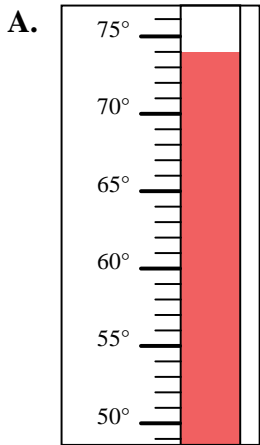


Determine which letter best answers each question.

Answers

- 1) Which thermometer best represents the temperature 92°?
- 2) Which thermometer best represents the temperature 84°?
- 3) Which thermometer best represents the temperature 56°?
- 4) Which thermometer best represents the temperature 110°?
- 5) Which thermometer best represents the temperature 13°?
- 6) Which thermometer best represents the temperature 39°?
- 7) Which thermometer best represents the temperature 3°?
- 8) Which thermometer best represents the temperature 44°?
- 9) Which thermometer best represents the temperature 74°?
- 10) Which thermometer best represents the temperature 103°?

1. _____
2. _____
3. _____
4. _____
5. _____
6. _____
7. _____
8. _____
9. _____
10. _____



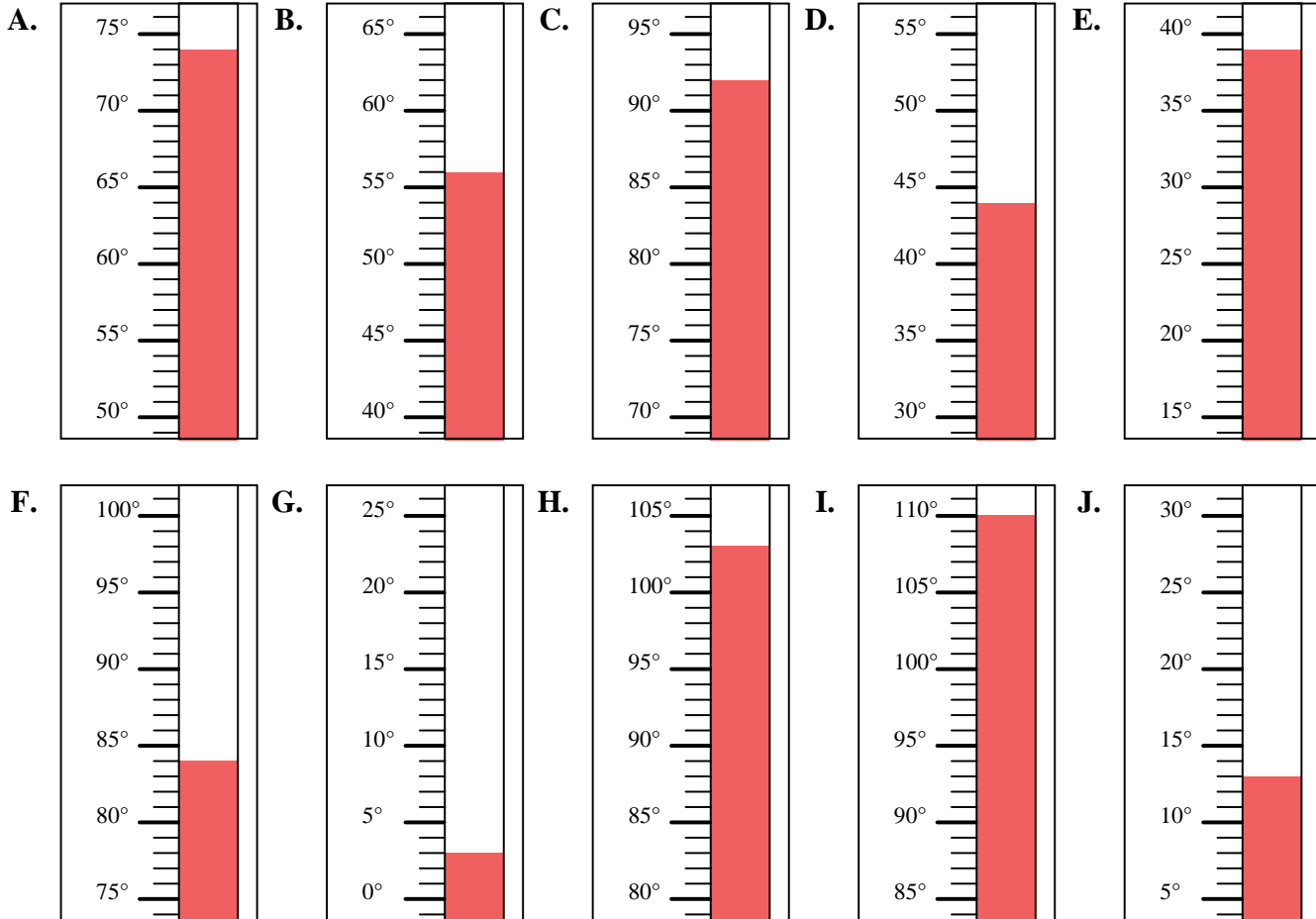


Determine which letter best answers each question.

Answers

- 1) Which thermometer best represents the temperature 92°?
- 2) Which thermometer best represents the temperature 84°?
- 3) Which thermometer best represents the temperature 56°?
- 4) Which thermometer best represents the temperature 110°?
- 5) Which thermometer best represents the temperature 13°?
- 6) Which thermometer best represents the temperature 39°?
- 7) Which thermometer best represents the temperature 3°?
- 8) Which thermometer best represents the temperature 44°?
- 9) Which thermometer best represents the temperature 74°?
- 10) Which thermometer best represents the temperature 103°?

1. **C**
2. **F**
3. **B**
4. **I**
5. **J**
6. **E**
7. **G**
8. **D**
9. **A**
10. **H**



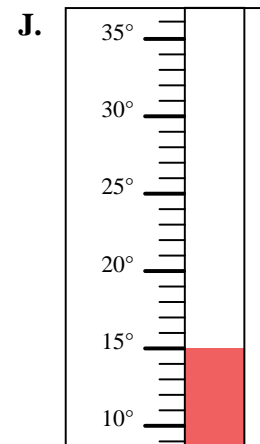
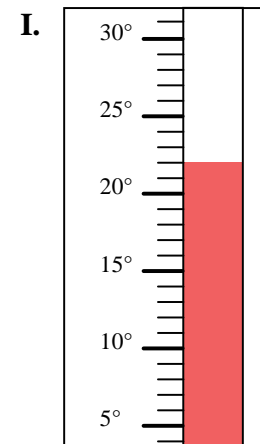
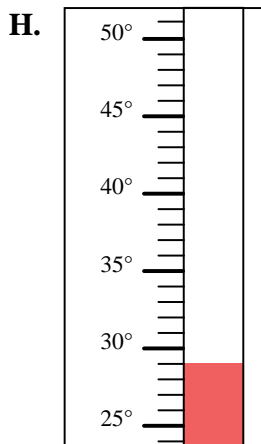
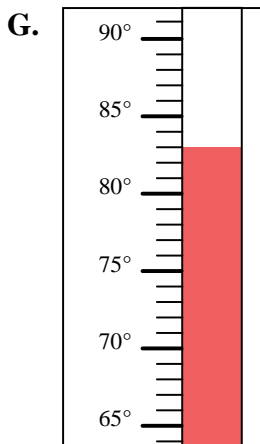
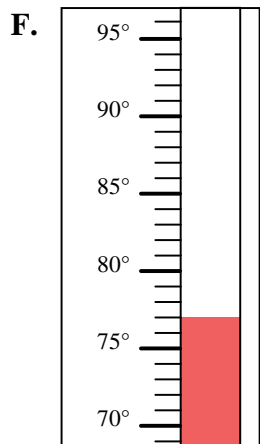
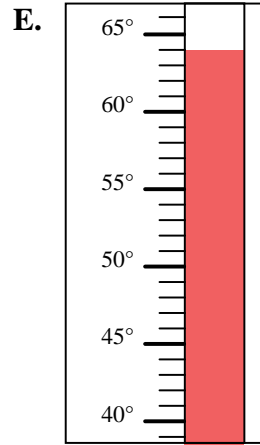
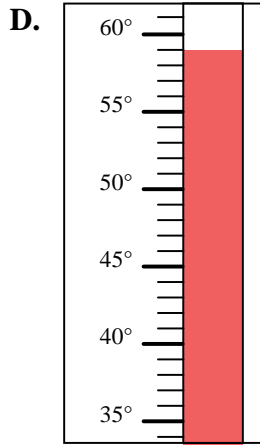
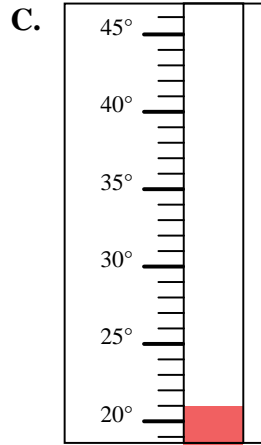
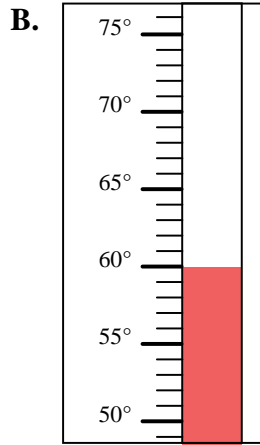
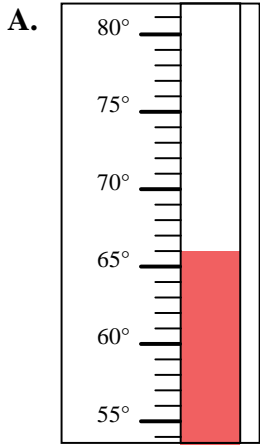


Determine which letter best answers each question.

Answers

- 1) Which thermometer best represents the temperature 22°?
- 2) Which thermometer best represents the temperature 66°?
- 3) Which thermometer best represents the temperature 15°?
- 4) Which thermometer best represents the temperature 83°?
- 5) Which thermometer best represents the temperature 21°?
- 6) Which thermometer best represents the temperature 59°?
- 7) Which thermometer best represents the temperature 60°?
- 8) Which thermometer best represents the temperature 77°?
- 9) Which thermometer best represents the temperature 64°?
- 10) Which thermometer best represents the temperature 29°?

1. _____
2. _____
3. _____
4. _____
5. _____
6. _____
7. _____
8. _____
9. _____
10. _____



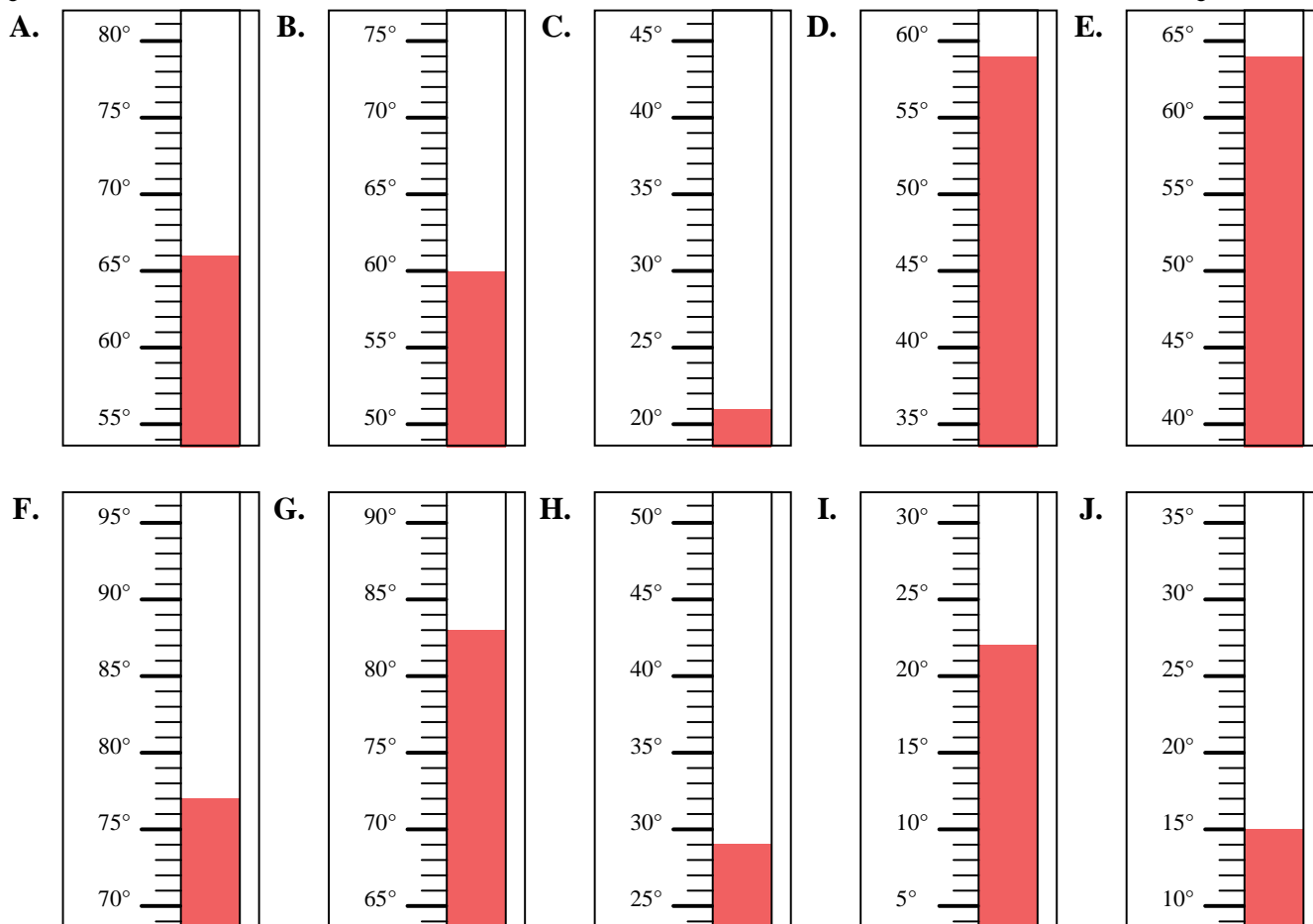


Determine which letter best answers each question.

- 1) Which thermometer best represents the temperature 22°?
- 2) Which thermometer best represents the temperature 66°?
- 3) Which thermometer best represents the temperature 15°?
- 4) Which thermometer best represents the temperature 83°?
- 5) Which thermometer best represents the temperature 21°?
- 6) Which thermometer best represents the temperature 59°?
- 7) Which thermometer best represents the temperature 60°?
- 8) Which thermometer best represents the temperature 77°?
- 9) Which thermometer best represents the temperature 64°?
- 10) Which thermometer best represents the temperature 29°?

Answers

1. **I**
2. **A**
3. **J**
4. **G**
5. **C**
6. **D**
7. **B**
8. **F**
9. **E**
10. **H**



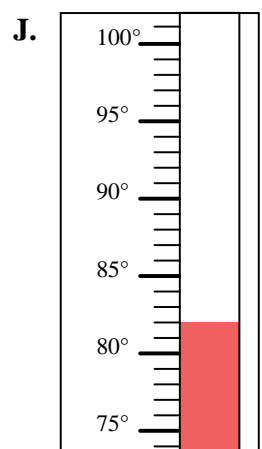
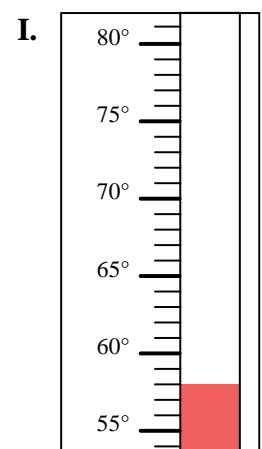
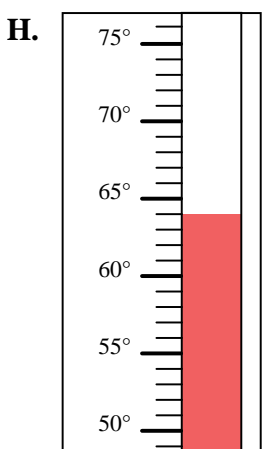
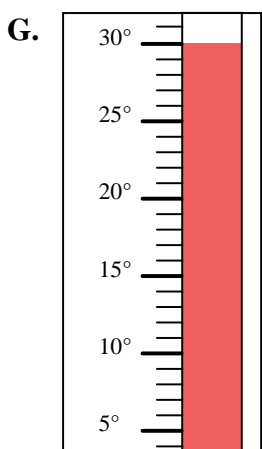
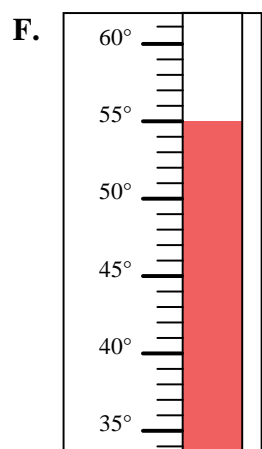
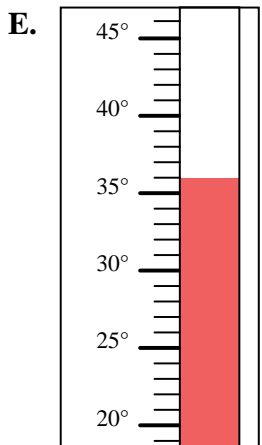
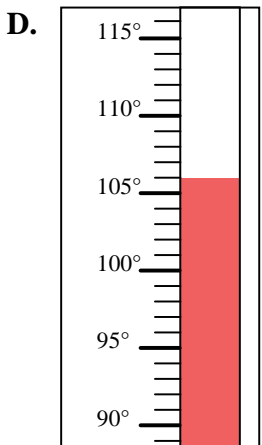
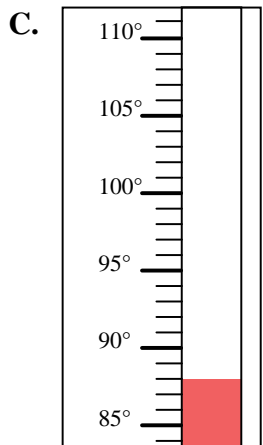
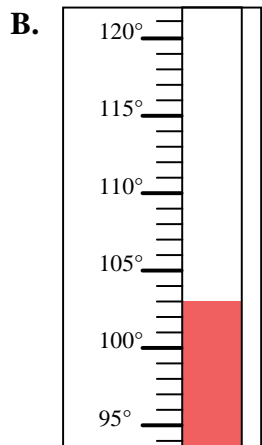
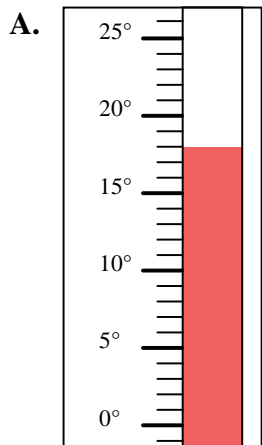


Determine which letter best answers each question.

Answers

- 1) Which thermometer best represents the temperature 82°?
- 2) Which thermometer best represents the temperature 64°?
- 3) Which thermometer best represents the temperature 58°?
- 4) Which thermometer best represents the temperature 106°?
- 5) Which thermometer best represents the temperature 88°?
- 6) Which thermometer best represents the temperature 36°?
- 7) Which thermometer best represents the temperature 18°?
- 8) Which thermometer best represents the temperature 30°?
- 9) Which thermometer best represents the temperature 55°?
- 10) Which thermometer best represents the temperature 103°?

1. _____
2. _____
3. _____
4. _____
5. _____
6. _____
7. _____
8. _____
9. _____
10. _____



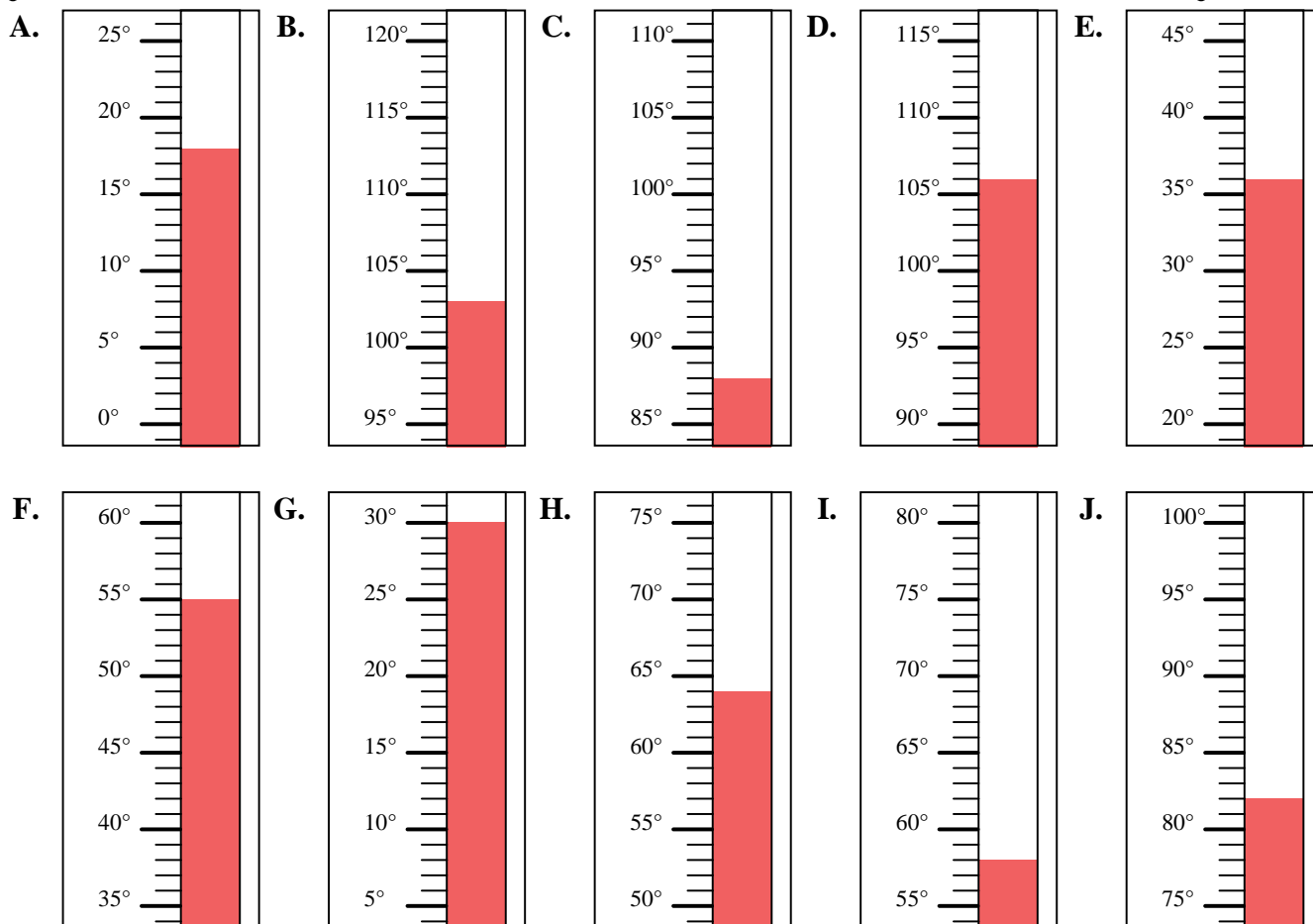


Determine which letter best answers each question.

- 1) Which thermometer best represents the temperature 82° ?
- 2) Which thermometer best represents the temperature 64° ?
- 3) Which thermometer best represents the temperature 58° ?
- 4) Which thermometer best represents the temperature 106° ?
- 5) Which thermometer best represents the temperature 88° ?
- 6) Which thermometer best represents the temperature 36° ?
- 7) Which thermometer best represents the temperature 18° ?
- 8) Which thermometer best represents the temperature 30° ?
- 9) Which thermometer best represents the temperature 55° ?
- 10) Which thermometer best represents the temperature 103° ?

Answers

1. **J**
2. **H**
3. **I**
4. **D**
5. **C**
6. **E**
7. **A**
8. **G**
9. **F**
10. **B**



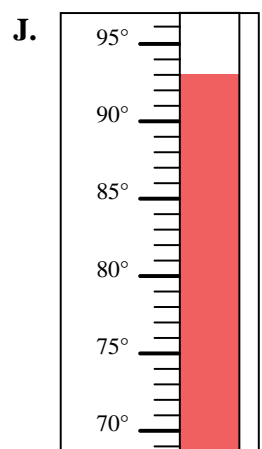
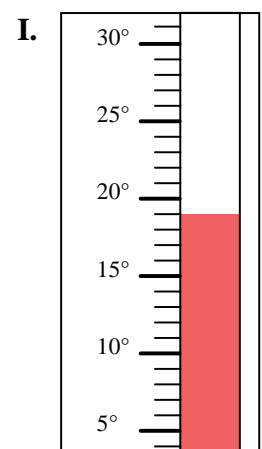
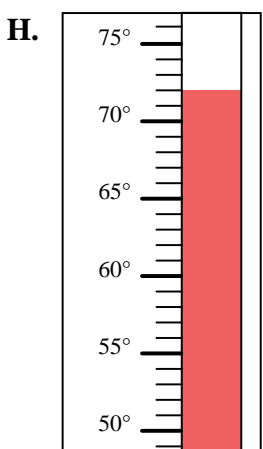
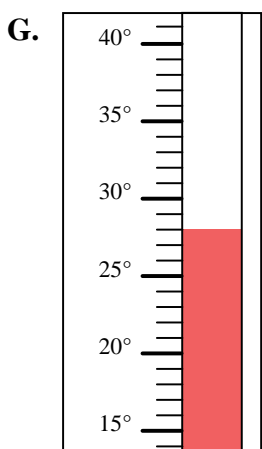
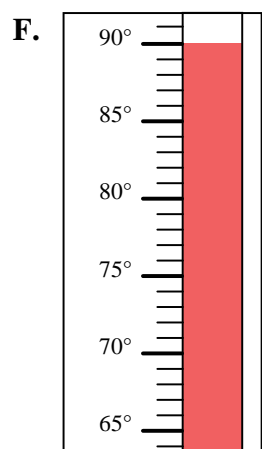
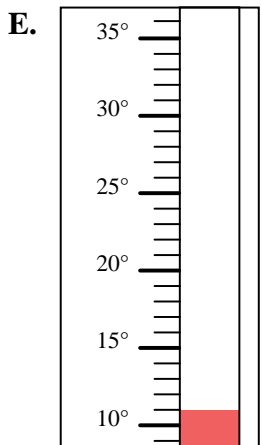
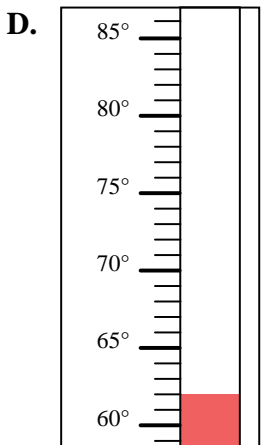
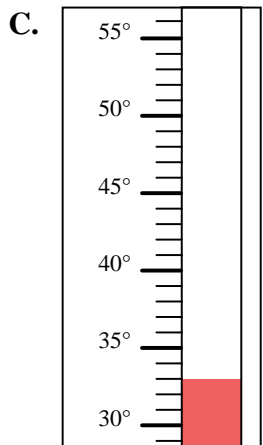
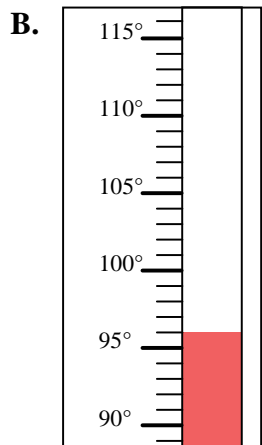
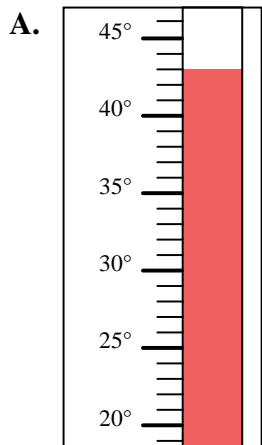


Determine which letter best answers each question.

Answers

- 1) Which thermometer best represents the temperature 62°?
- 2) Which thermometer best represents the temperature 43°?
- 3) Which thermometer best represents the temperature 72°?
- 4) Which thermometer best represents the temperature 33°?
- 5) Which thermometer best represents the temperature 11°?
- 6) Which thermometer best represents the temperature 93°?
- 7) Which thermometer best represents the temperature 96°?
- 8) Which thermometer best represents the temperature 19°?
- 9) Which thermometer best represents the temperature 28°?
- 10) Which thermometer best represents the temperature 90°?

1. _____
2. _____
3. _____
4. _____
5. _____
6. _____
7. _____
8. _____
9. _____
10. _____



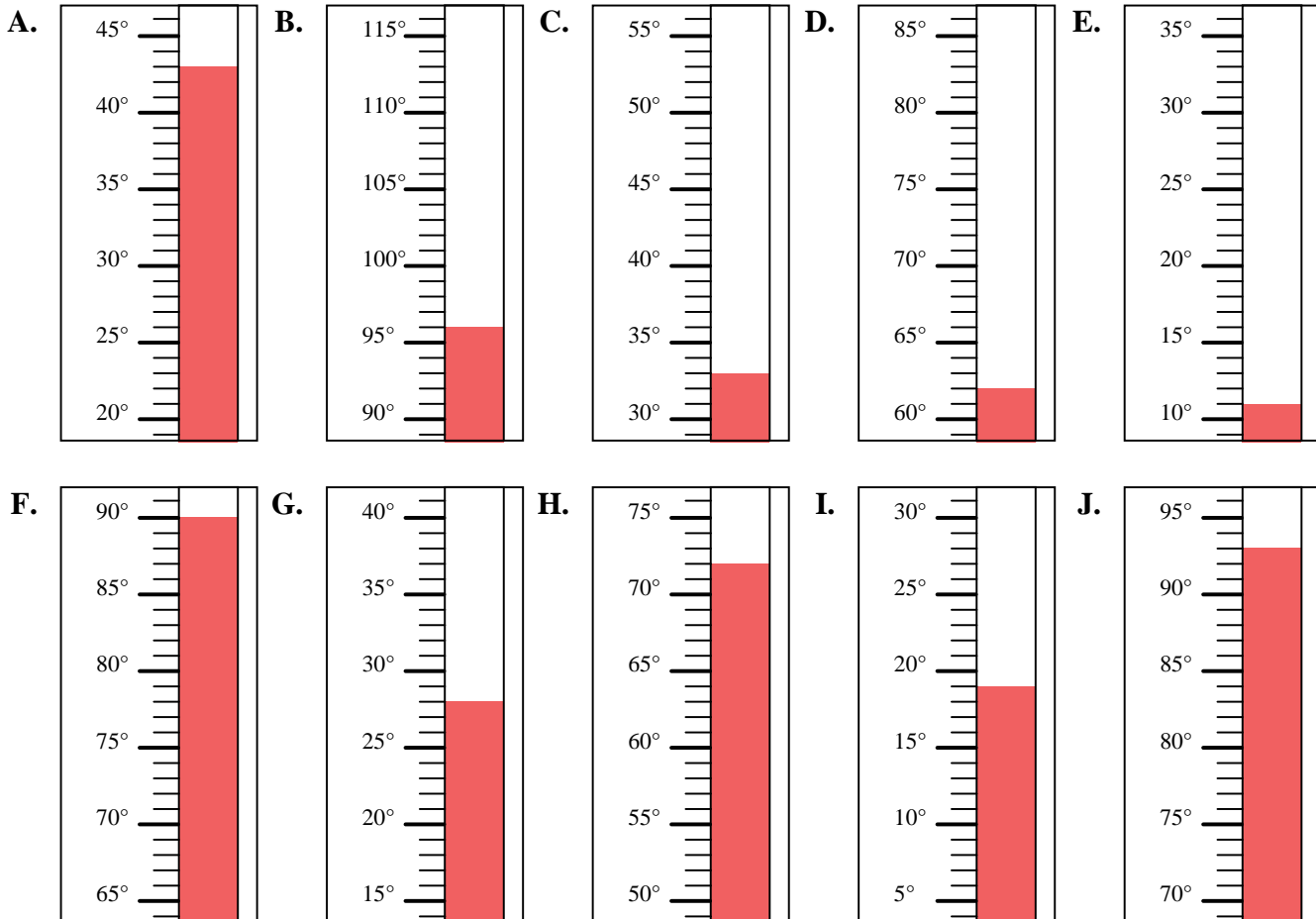


Determine which letter best answers each question.

- 1) Which thermometer best represents the temperature 62°?
- 2) Which thermometer best represents the temperature 43°?
- 3) Which thermometer best represents the temperature 72°?
- 4) Which thermometer best represents the temperature 33°?
- 5) Which thermometer best represents the temperature 11°?
- 6) Which thermometer best represents the temperature 93°?
- 7) Which thermometer best represents the temperature 96°?
- 8) Which thermometer best represents the temperature 19°?
- 9) Which thermometer best represents the temperature 28°?
- 10) Which thermometer best represents the temperature 90°?

Answers

1. **D**
2. **A**
3. **H**
4. **C**
5. **E**
6. **J**
7. **B**
8. **I**
9. **G**
10. **F**



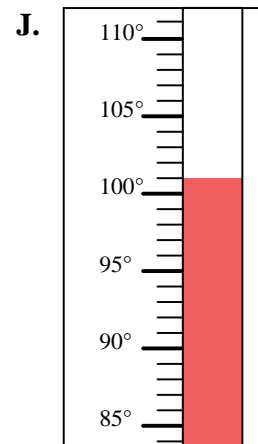
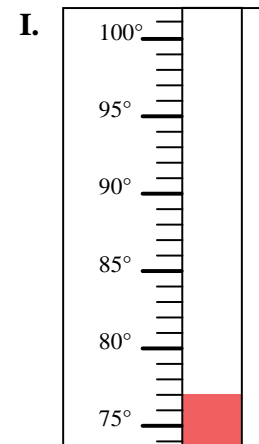
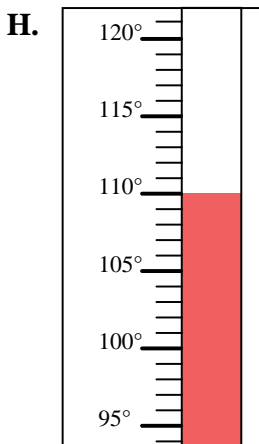
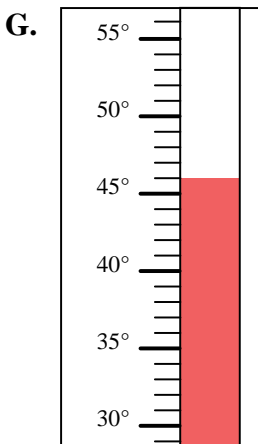
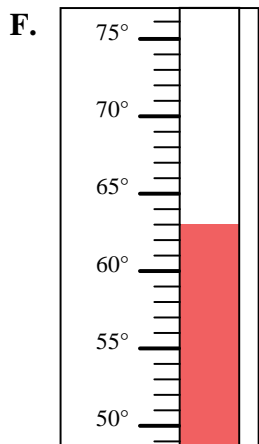
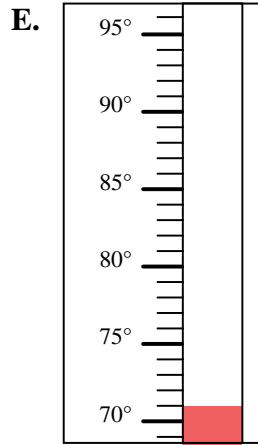
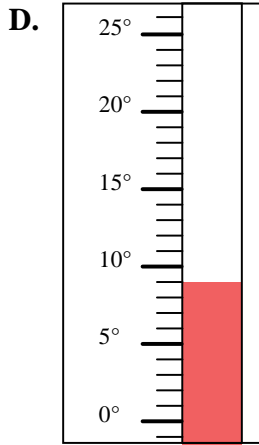
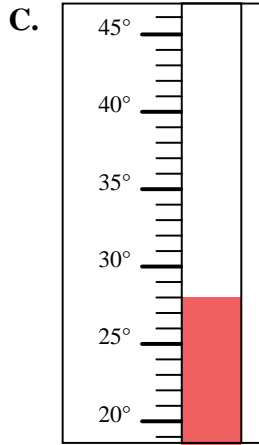
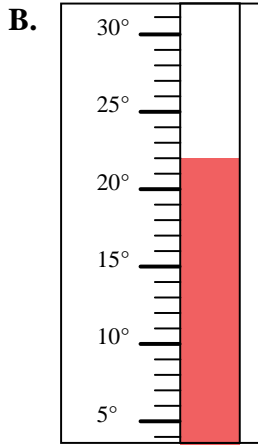
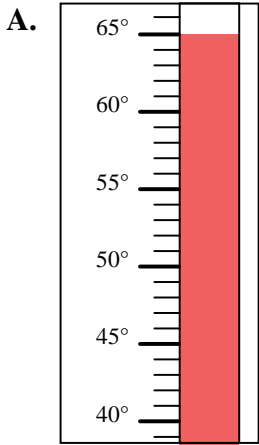


Determine which letter best answers each question.

Answers

- 1) Which thermometer best represents the temperature 63°?
- 2) Which thermometer best represents the temperature 46°?
- 3) Which thermometer best represents the temperature 65°?
- 4) Which thermometer best represents the temperature 110°?
- 5) Which thermometer best represents the temperature 77°?
- 6) Which thermometer best represents the temperature 22°?
- 7) Which thermometer best represents the temperature 71°?
- 8) Which thermometer best represents the temperature 28°?
- 9) Which thermometer best represents the temperature 9°?
- 10) Which thermometer best represents the temperature 101°?

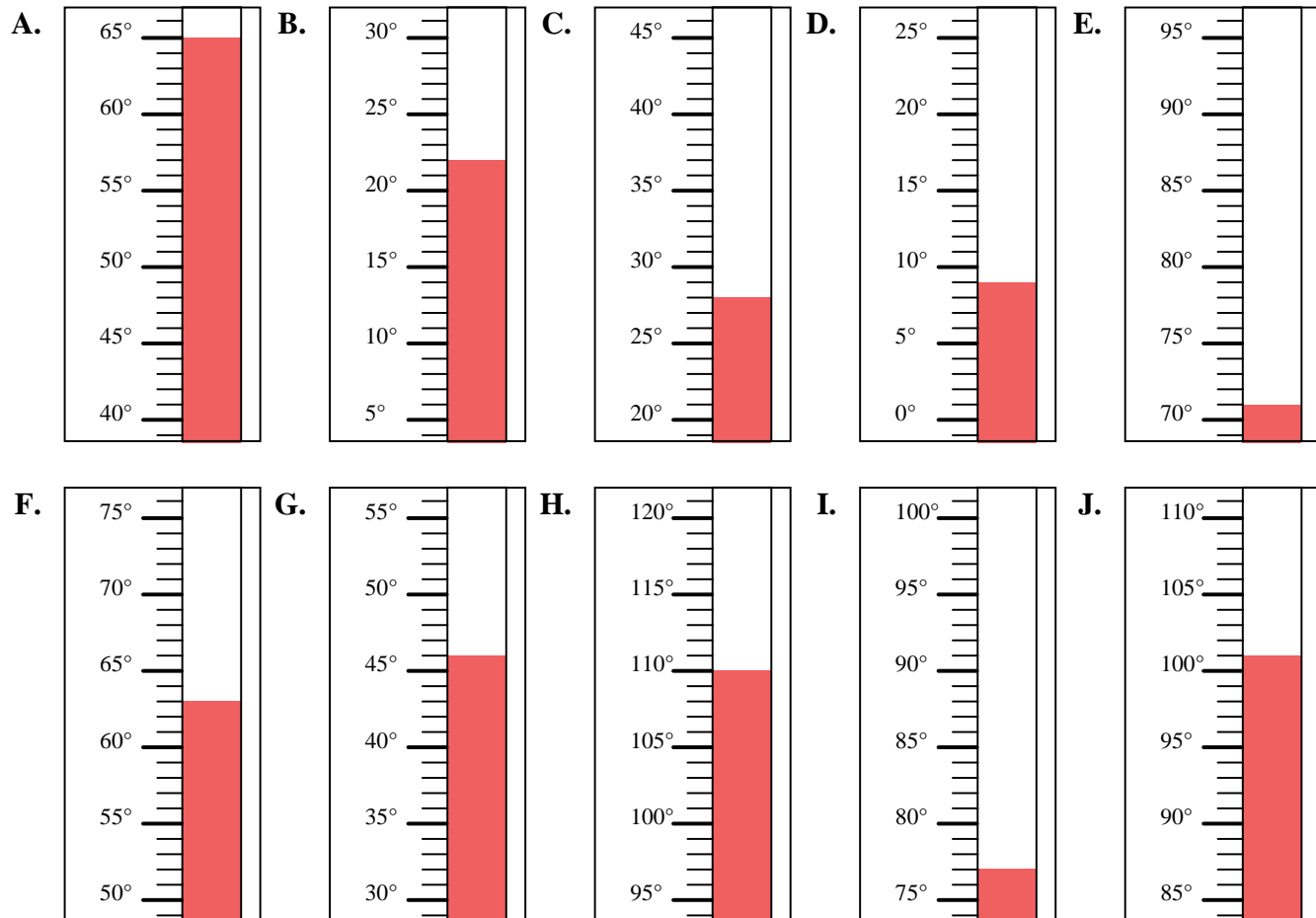
1. _____
2. _____
3. _____
4. _____
5. _____
6. _____
7. _____
8. _____
9. _____
10. _____





Determine which letter best answers each question.

- 1) Which thermometer best represents the temperature 63° ?
- 2) Which thermometer best represents the temperature 46° ?
- 3) Which thermometer best represents the temperature 65° ?
- 4) Which thermometer best represents the temperature 110° ?
- 5) Which thermometer best represents the temperature 77° ?
- 6) Which thermometer best represents the temperature 22° ?
- 7) Which thermometer best represents the temperature 71° ?
- 8) Which thermometer best represents the temperature 28° ?
- 9) Which thermometer best represents the temperature 9° ?
- 10) Which thermometer best represents the temperature 101° ?



Answers

1. **F**
2. **G**
3. **A**
4. **H**
5. **I**
6. **B**
7. **E**
8. **C**
9. **D**
10. **J**

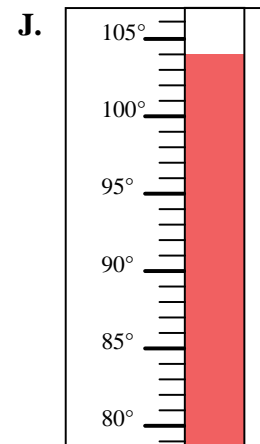
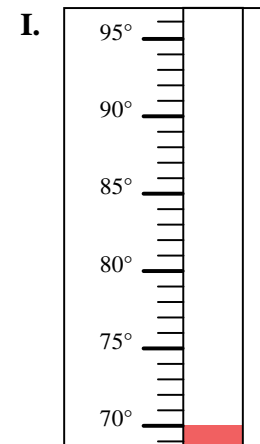
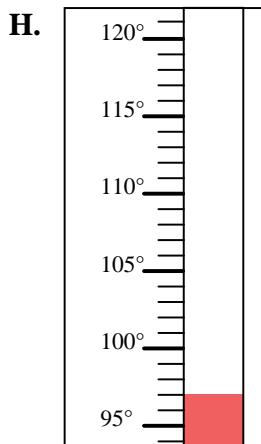
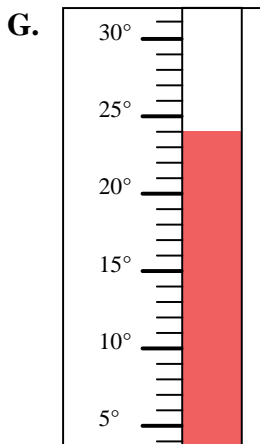
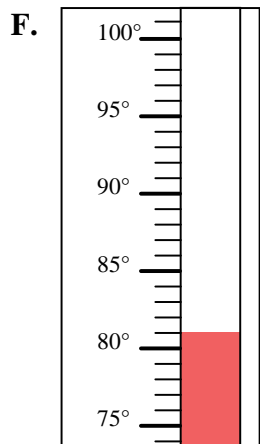
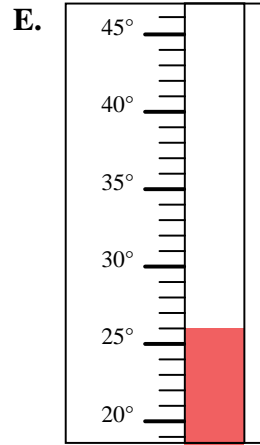
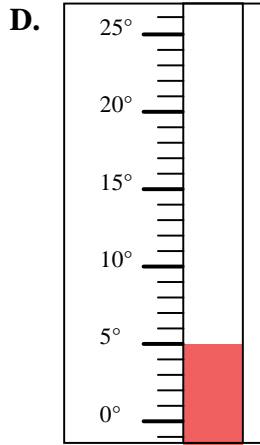
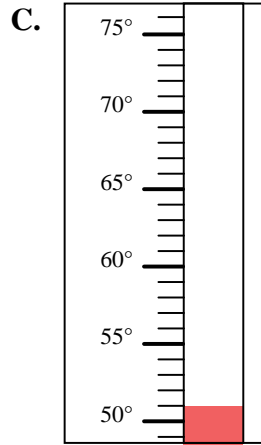
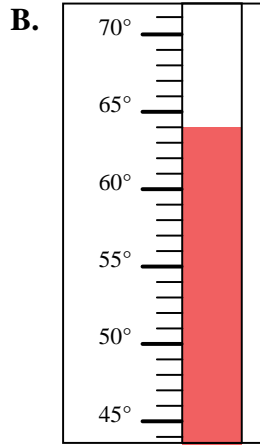
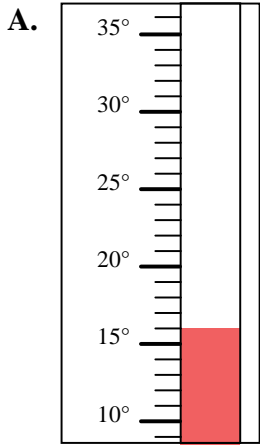


Determine which letter best answers each question.

Answers

- 1) Which thermometer best represents the temperature 70°?
- 2) Which thermometer best represents the temperature 51°?
- 3) Which thermometer best represents the temperature 64°?
- 4) Which thermometer best represents the temperature 26°?
- 5) Which thermometer best represents the temperature 104°?
- 6) Which thermometer best represents the temperature 97°?
- 7) Which thermometer best represents the temperature 5°?
- 8) Which thermometer best represents the temperature 81°?
- 9) Which thermometer best represents the temperature 16°?
- 10) Which thermometer best represents the temperature 24°?

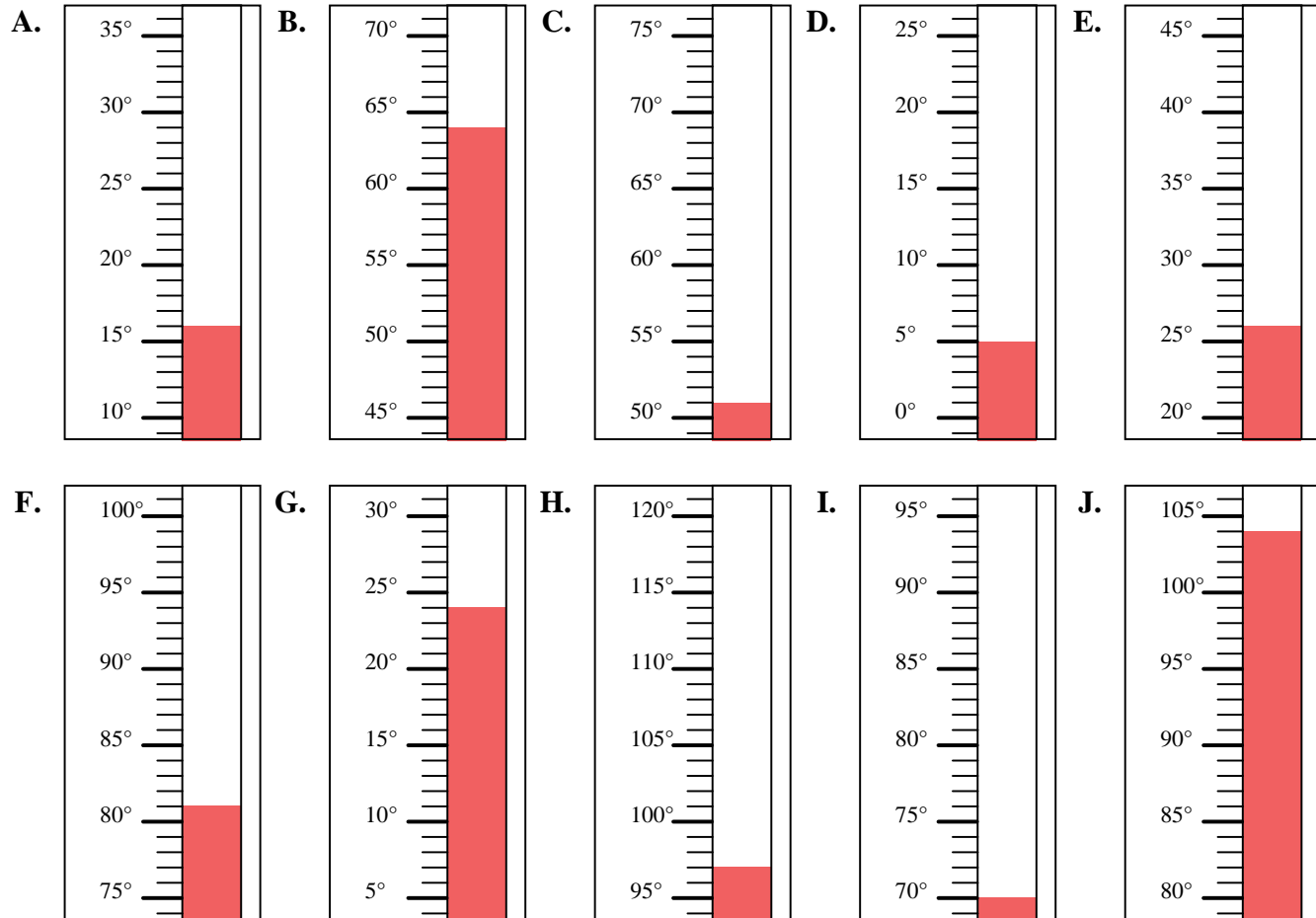
1. _____
2. _____
3. _____
4. _____
5. _____
6. _____
7. _____
8. _____
9. _____
10. _____





Determine which letter best answers each question.

- 1) Which thermometer best represents the temperature 70° ?
- 2) Which thermometer best represents the temperature 51° ?
- 3) Which thermometer best represents the temperature 64° ?
- 4) Which thermometer best represents the temperature 26° ?
- 5) Which thermometer best represents the temperature 104° ?
- 6) Which thermometer best represents the temperature 97° ?
- 7) Which thermometer best represents the temperature 5° ?
- 8) Which thermometer best represents the temperature 81° ?
- 9) Which thermometer best represents the temperature 16° ?
- 10) Which thermometer best represents the temperature 24° ?



Answers

1. **I**
2. **C**
3. **B**
4. **E**
5. **J**
6. **H**
7. **D**
8. **F**
9. **A**
10. **G**

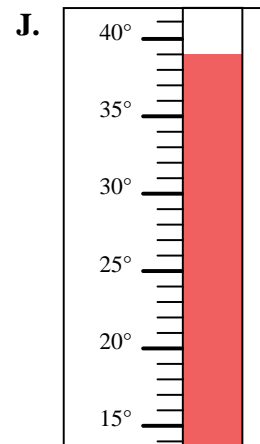
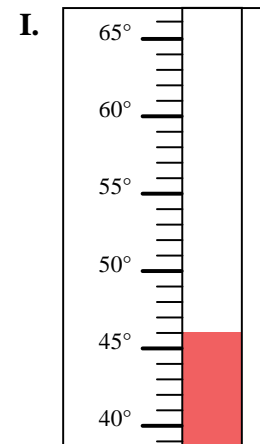
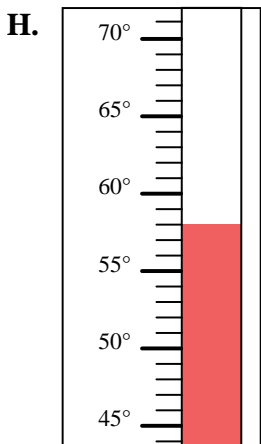
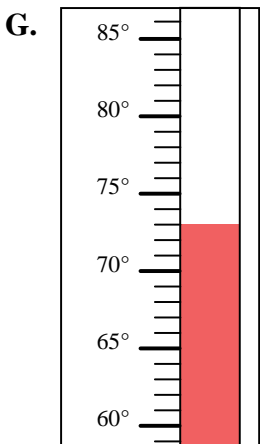
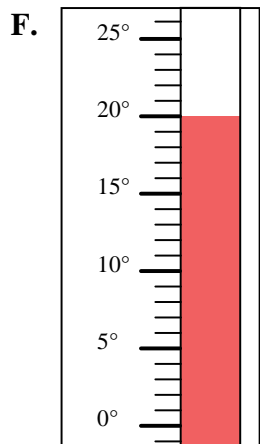
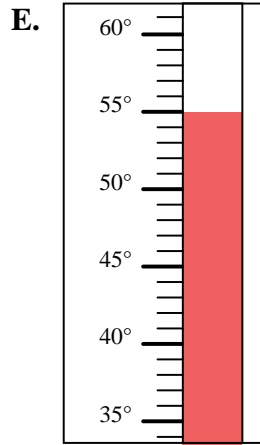
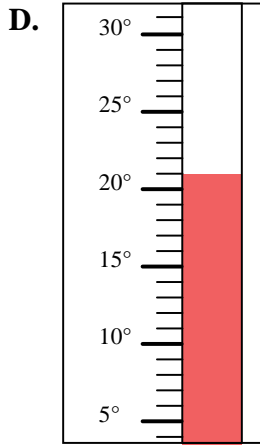
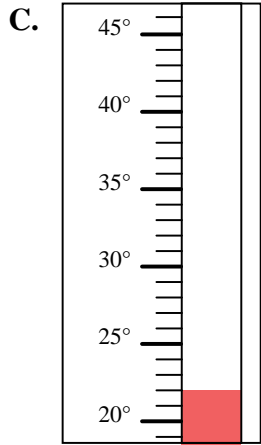
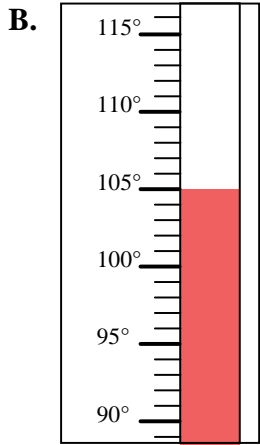
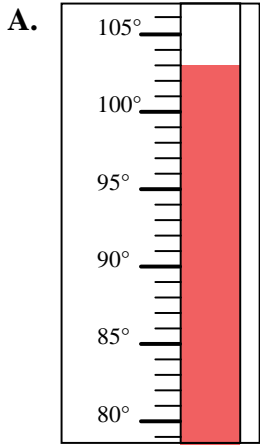


Determine which letter best answers each question.

Answers

- 1) Which thermometer best represents the temperature 103°?
- 2) Which thermometer best represents the temperature 73°?
- 3) Which thermometer best represents the temperature 22°?
- 4) Which thermometer best represents the temperature 21°?
- 5) Which thermometer best represents the temperature 46°?
- 6) Which thermometer best represents the temperature 20°?
- 7) Which thermometer best represents the temperature 39°?
- 8) Which thermometer best represents the temperature 55°?
- 9) Which thermometer best represents the temperature 105°?
- 10) Which thermometer best represents the temperature 58°?

1. _____
2. _____
3. _____
4. _____
5. _____
6. _____
7. _____
8. _____
9. _____
10. _____





Determine which letter best answers each question.

- 1) Which thermometer best represents the temperature 103° ?
- 2) Which thermometer best represents the temperature 73° ?
- 3) Which thermometer best represents the temperature 22° ?
- 4) Which thermometer best represents the temperature 21° ?
- 5) Which thermometer best represents the temperature 46° ?
- 6) Which thermometer best represents the temperature 20° ?
- 7) Which thermometer best represents the temperature 39° ?
- 8) Which thermometer best represents the temperature 55° ?
- 9) Which thermometer best represents the temperature 105° ?
- 10) Which thermometer best represents the temperature 58° ?

Answers

1. **A**
2. **G**
3. **C**
4. **D**
5. **I**
6. **F**
7. **J**
8. **E**
9. **B**
10. **H**

