

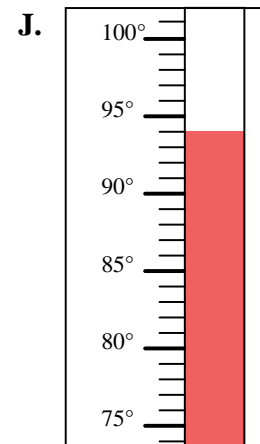
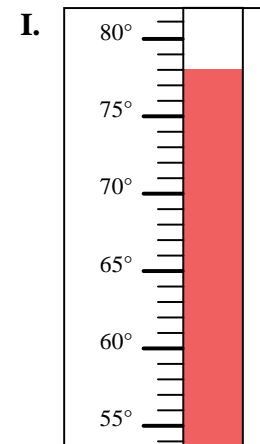
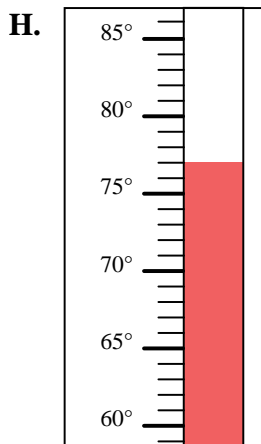
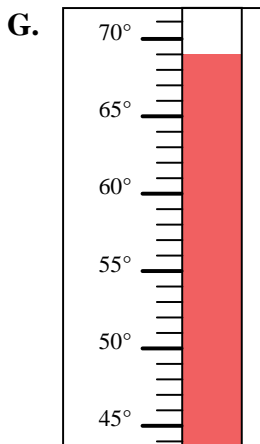
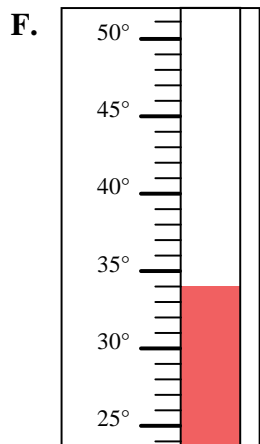
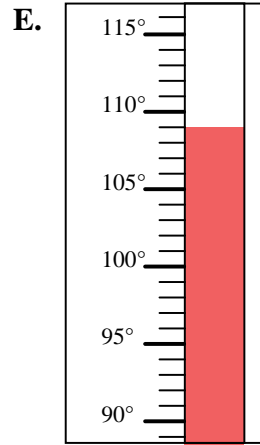
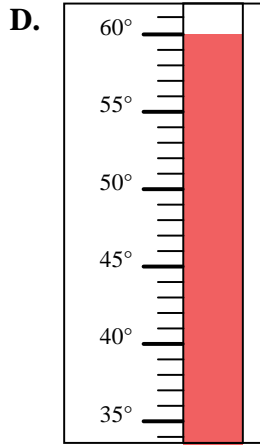
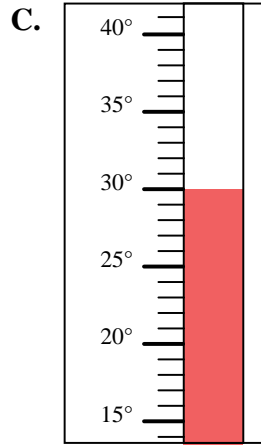
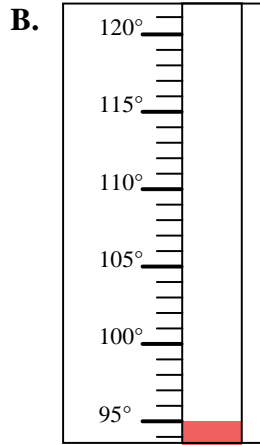
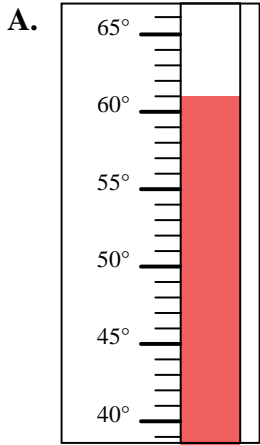


Determine which letter best answers each question.

Answers

- 1) Which thermometer best represents the temperature 34°?
- 2) Which thermometer best represents the temperature 77°?
- 3) Which thermometer best represents the temperature 69°?
- 4) Which thermometer best represents the temperature 61°?
- 5) Which thermometer best represents the temperature 95°?
- 6) Which thermometer best represents the temperature 94°?
- 7) Which thermometer best represents the temperature 78°?
- 8) Which thermometer best represents the temperature 30°?
- 9) Which thermometer best represents the temperature 109°?
- 10) Which thermometer best represents the temperature 60°?

1. _____
2. _____
3. _____
4. _____
5. _____
6. _____
7. _____
8. _____
9. _____
10. _____





Determine which letter best answers each question.

Answers

- 1) Which thermometer best represents the temperature 34° ?
- 2) Which thermometer best represents the temperature 77° ?
- 3) Which thermometer best represents the temperature 69° ?
- 4) Which thermometer best represents the temperature 61° ?
- 5) Which thermometer best represents the temperature 95° ?
- 6) Which thermometer best represents the temperature 94° ?
- 7) Which thermometer best represents the temperature 78° ?
- 8) Which thermometer best represents the temperature 30° ?
- 9) Which thermometer best represents the temperature 109° ?
- 10) Which thermometer best represents the temperature 60° ?

1. **F**
2. **H**
3. **G**
4. **A**
5. **B**
6. **J**
7. **I**
8. **C**
9. **E**
10. **D**

