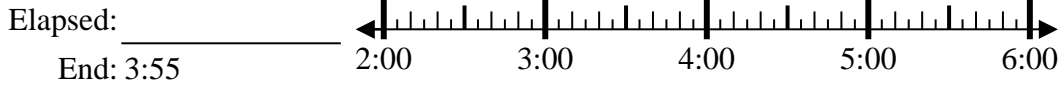




Solve each problem.

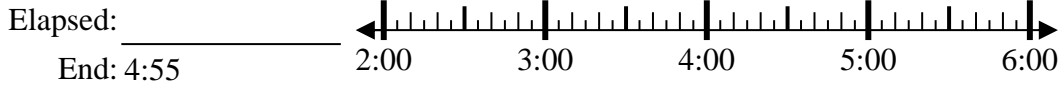
Answers

1) Start: 2:15



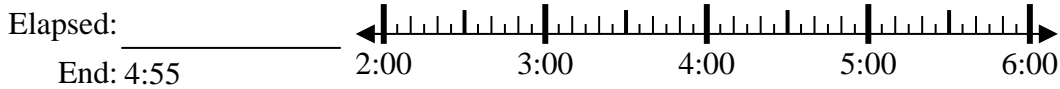
1. \_\_\_\_\_

2) Start: 2:10



2. \_\_\_\_\_

3) Start: 2:45



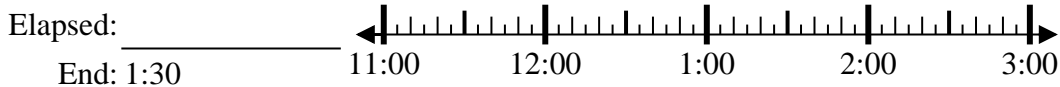
3. \_\_\_\_\_

4) Start: 2:20



4. \_\_\_\_\_

5) Start: 11:05



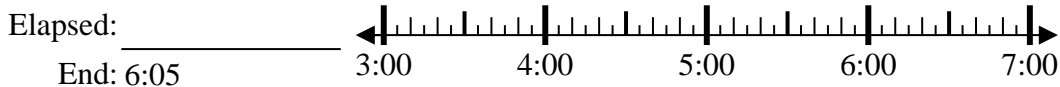
5. \_\_\_\_\_

6) Start: 11:05



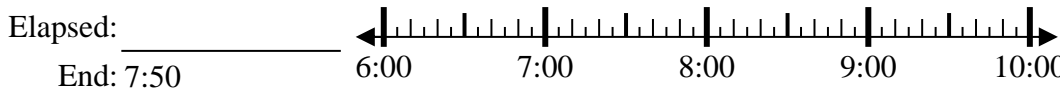
6. \_\_\_\_\_

7) Start: 3:45



7. \_\_\_\_\_

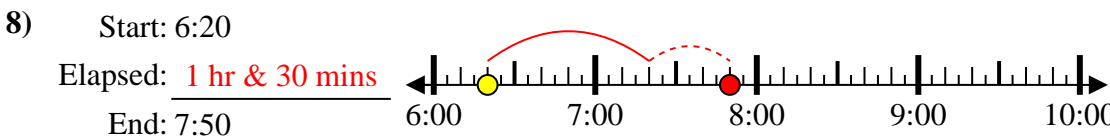
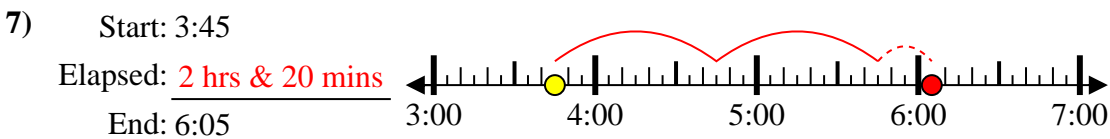
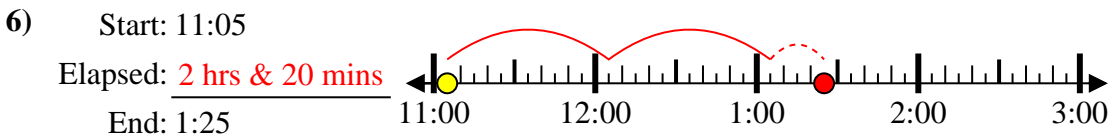
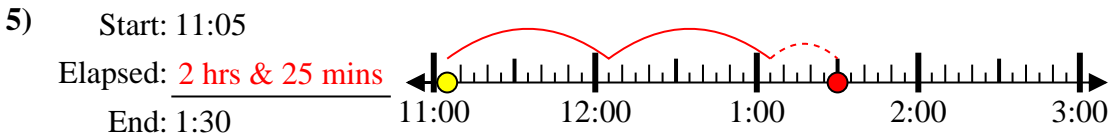
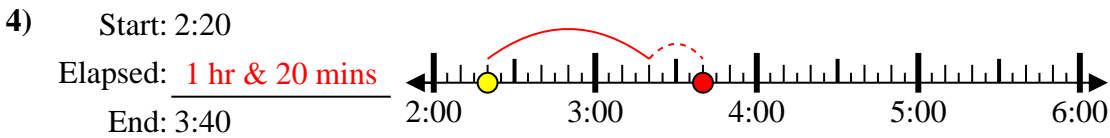
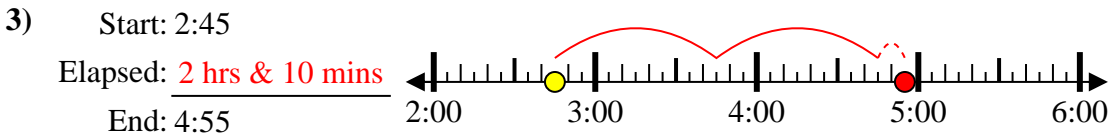
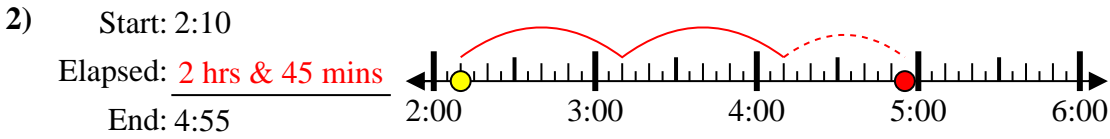
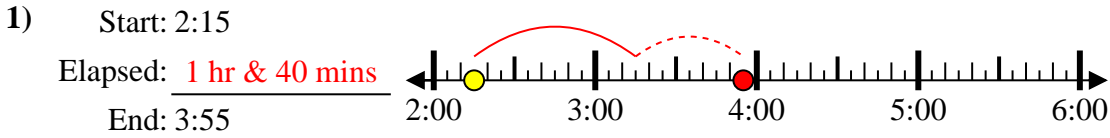
8) Start: 6:20



8. \_\_\_\_\_



Solve each problem.



Answers

1. 1 hr & 40 mins
2. 2 hrs & 45 mins
3. 2 hrs & 10 mins
4. 1 hr & 20 mins
5. 2 hrs & 25 mins
6. 2 hrs & 20 mins
7. 2 hrs & 20 mins
8. 1 hr & 30 mins